



Stelle fest, wie man die gezeigten Gruppen als eine Multiplikationsaufgabe ausdrücken könnte.

Antworten

Bsp)

Bsp. **5•8=40**

1. _____

2. _____

3. _____

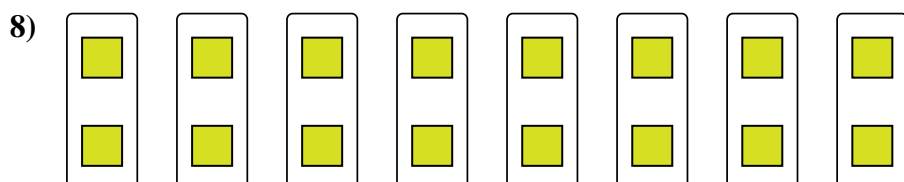
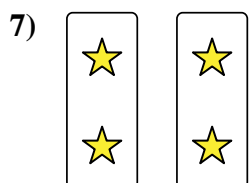
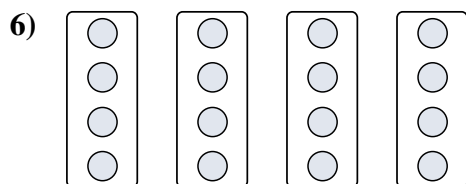
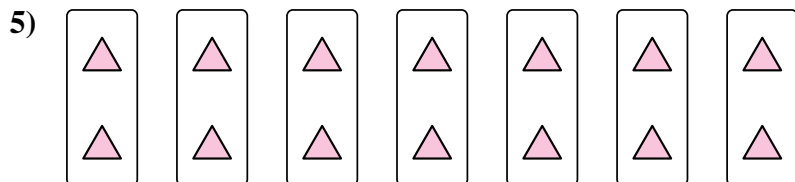
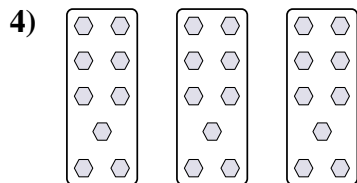

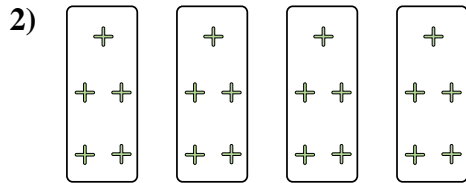
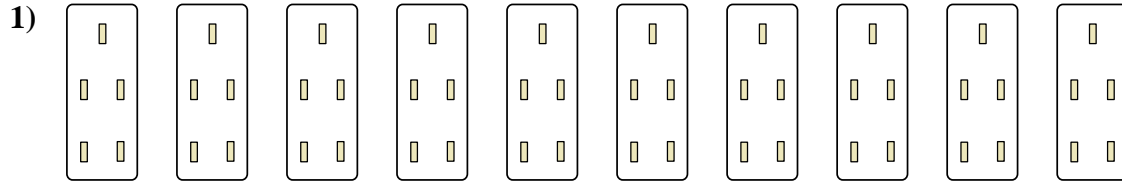

4. _____

5. _____

6. _____

7. _____

8. _____





Stelle fest, wie man die gezeigten Gruppen als eine Multiplikationsaufgabe ausdrücken könnte.

Antworten

Bsp)

Bsp. $5 \cdot 8 = 40$

1. $10 \cdot 5 = 50$

2. $4 \cdot 5 = 20$

3. $2 \cdot 8 = 16$


4. $3 \cdot 9 = 27$

5. $7 \cdot 2 = 14$

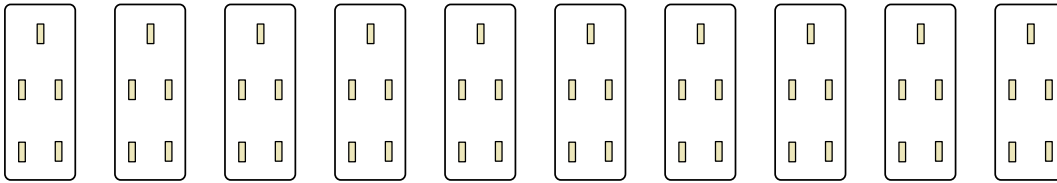
6. $4 \cdot 4 = 16$

7. $2 \cdot 2 = 4$

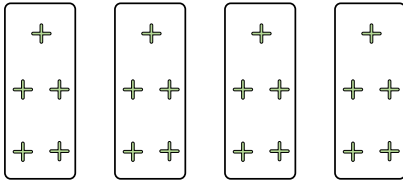
8. $8 \cdot 2 = 16$




1)



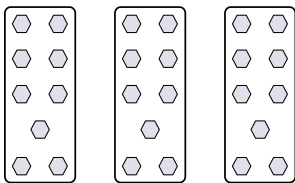
2)



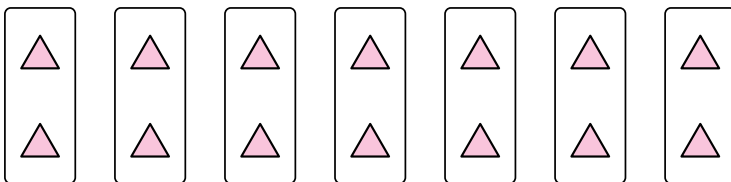
3)



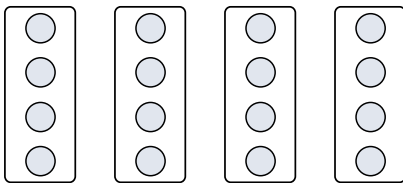
4)




5)



6)



7)



8)

