



Stelle fest, wie man die gezeigten Gruppen als eine Multiplikationsaufgabe ausdrücken könnte.

Antworten

Bsp)

Bsp. **6•3=18**

1. _____

2. _____

3. _____

4. _____

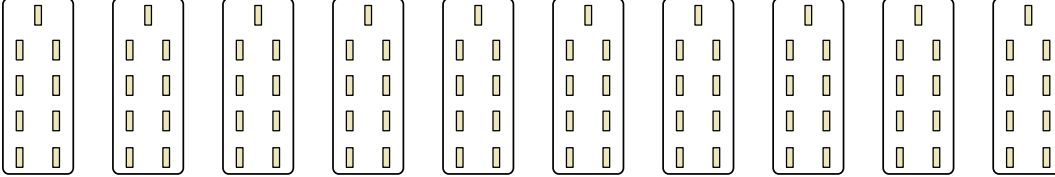
5. _____

6. _____

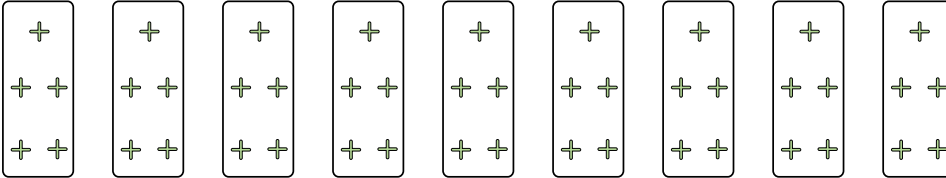
7. _____

8. _____


1)



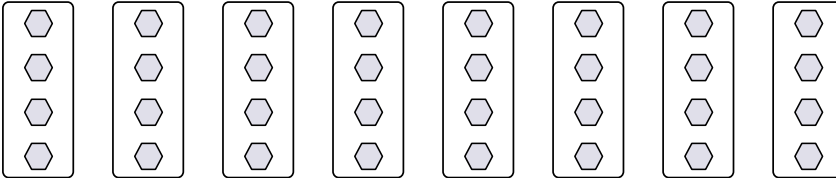
2)



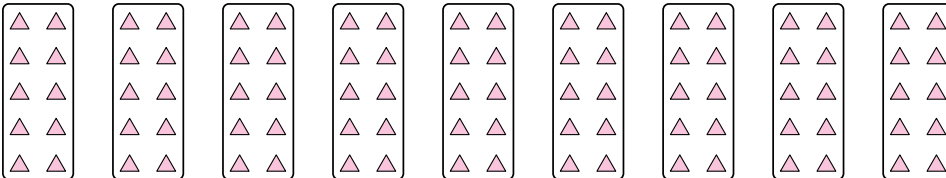
3)



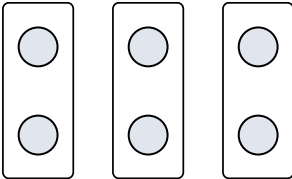
4)




5)



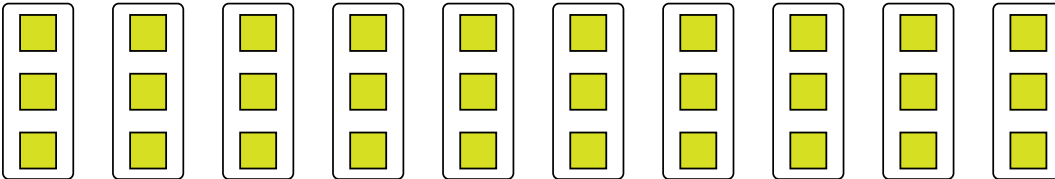
6)



7)



8)






Stelle fest, wie man die gezeigten Gruppen als eine Multiplikationsaufgabe ausdrücken könnte.

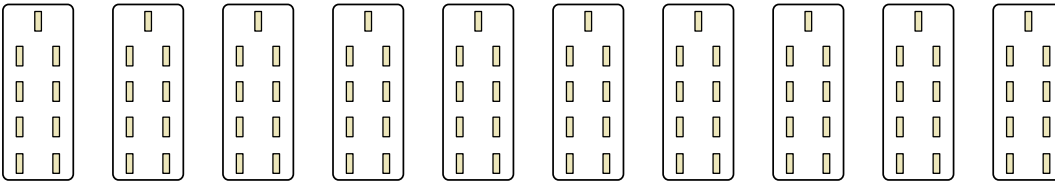
Antworten

Bsp)



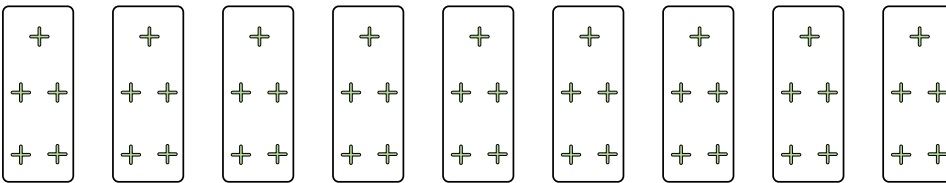
Bsp. $6 \cdot 3 = 18$

1)




1. $10 \cdot 9 = 90$

2)



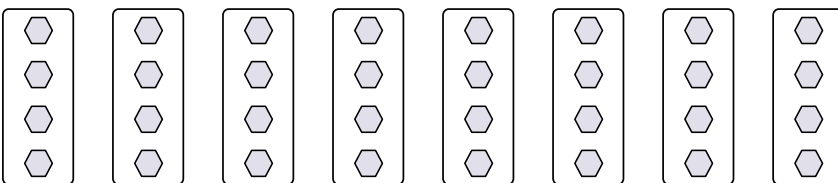
2. $9 \cdot 5 = 45$

3)



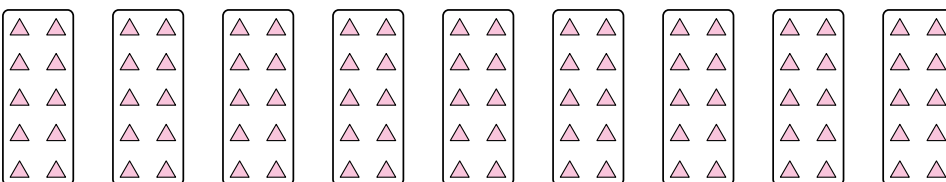
3. $5 \cdot 2 = 10$

4)



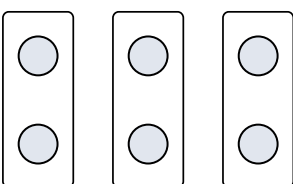
4. $8 \cdot 4 = 32$

5)




5. $9 \cdot 10 = 90$

6)



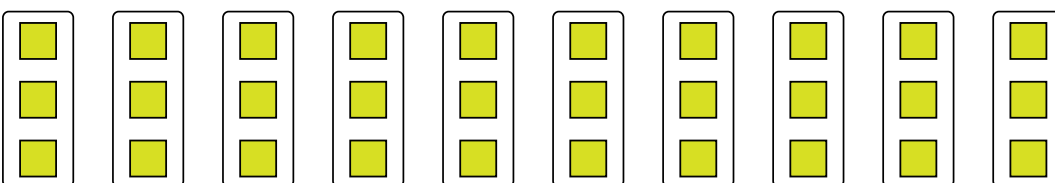
6. $3 \cdot 2 = 6$

7)



7. $4 \cdot 9 = 36$

8)



8. $10 \cdot 3 = 30$