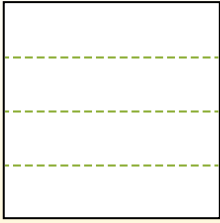


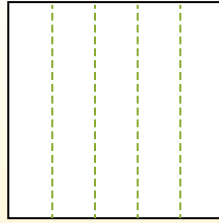


Teile die Form wie beschrieben auf und zähle dann die Anzahl der Felder.

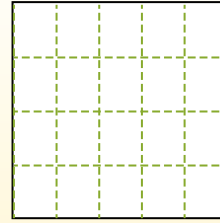
Las filas van de izquierda a derecha.




Las columnas van de arriba a abajo.



Aqui tem 4 linhas e 5 colunas .  
Existem 20 caixas no total.




1) 2 Reihen  
4 Spalten




2) 5 Reihen  
2 Spalten



3) 3 Reihen  
4 Spalten




4) 3 Reihen  
5 Spalten




5) 2 Reihen  
3 Spalten




6) 4 Reihen  
3 Spalten




7) 5 Reihen  
3 Spalten



8) 3 Reihen  
2 Spalten



9) 3 Reihen  
3 Spalten



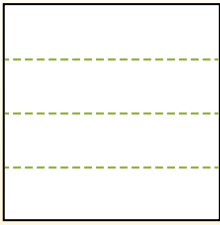
**Antworten**

- 1. \_\_\_\_\_
- 2. \_\_\_\_\_
- 3. \_\_\_\_\_
- 4. \_\_\_\_\_
- 5. \_\_\_\_\_
- 6. \_\_\_\_\_
- 7. \_\_\_\_\_
- 8. \_\_\_\_\_
- 9. \_\_\_\_\_

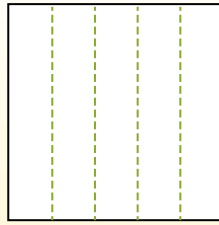


Teile die Form wie beschrieben auf und zähle dann die Anzahl der Felder.

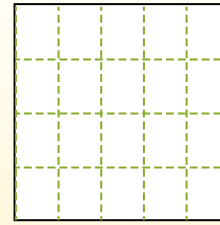
Las filas van de izquierda a derecha.



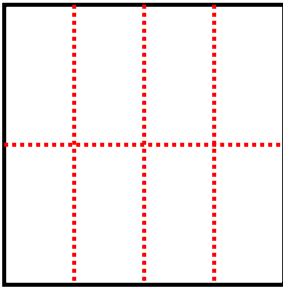
Las columnas van de arriba a abajo.



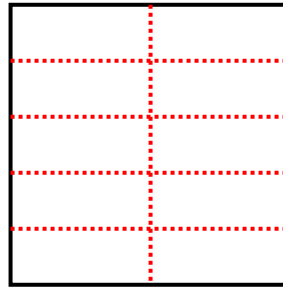
Aqui tem 4 linhas e 5 colunas. Existem 20 caixas no total.



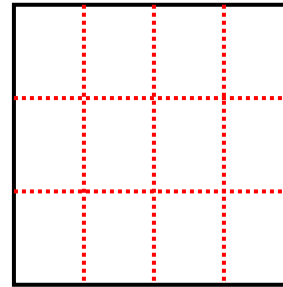
1) 2 Reihen  
4 Spalten



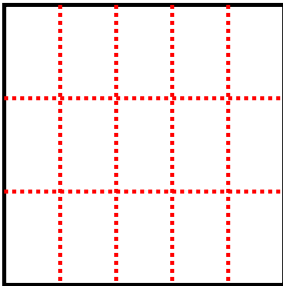
2) 5 Reihen  
2 Spalten



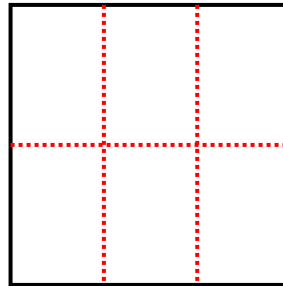
3) 3 Reihen  
4 Spalten



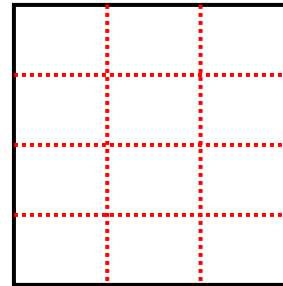
4) 3 Reihen  
5 Spalten



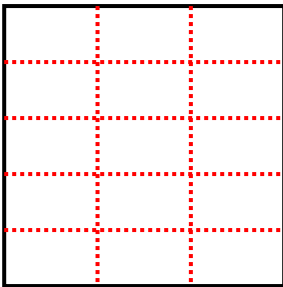
5) 2 Reihen  
3 Spalten



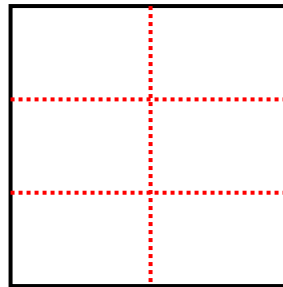
6) 4 Reihen  
3 Spalten



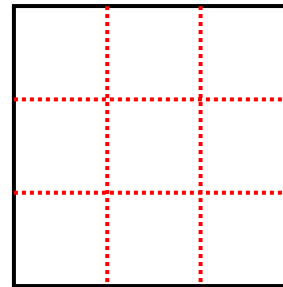
7) 5 Reihen  
3 Spalten



8) 3 Reihen  
2 Spalten



9) 3 Reihen  
3 Spalten



**Antworten**

1. **8**

2. **10**

3. **12**

4. **15**

5. **6**

6. **12**

7. **15**

8. **6**

9. **9**