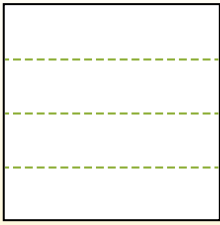


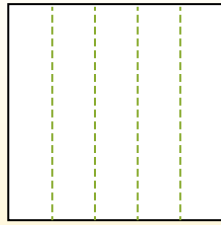


Teile die Form wie beschrieben auf und zähle dann die Anzahl der Felder.

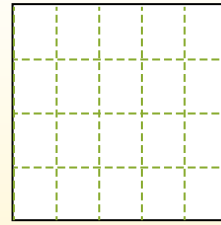
Las filas van de izquierda a derecha.




Las columnas van de arriba a abajo.



Aqui tem 4 linhas e 5 colunas .
Existem 20 caixas no total.




1) 5 Reihen
2 Spalten




2) 3 Reihen
3 Spalten



3) 2 Reihen
3 Spalten




4) 3 Reihen
4 Spalten




5) 2 Reihen
2 Spalten



6) 5 Reihen
4 Spalten




7) 3 Reihen
2 Spalten



8) 5 Reihen
3 Spalten



9) 2 Reihen
5 Spalten



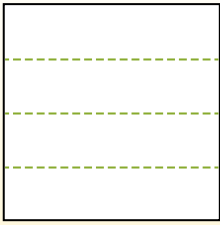
Antworten

- 1. _____
- 2. _____
- 3. _____
- 4. _____
- 5. _____
- 6. _____
- 7. _____
- 8. _____
- 9. _____

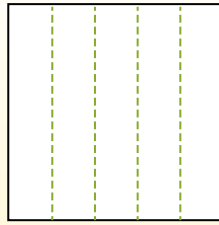


Teile die Form wie beschrieben auf und zähle dann die Anzahl der Felder.

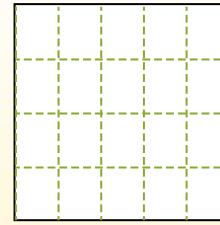
Las filas van de izquierda a derecha.



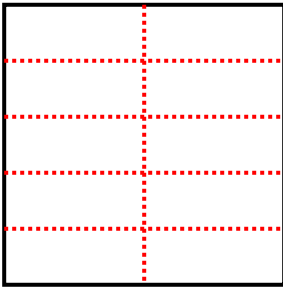
Las columnas van de arriba a abajo.



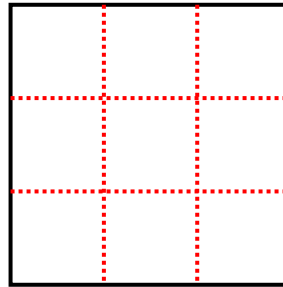
Aqui tem 4 linhas e 5 colunas . Existem 20 caixas no total.



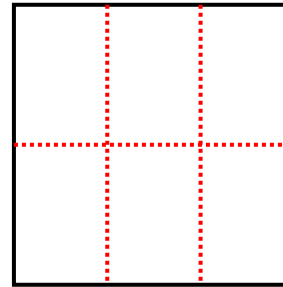
1) 5 Reihen
2 Spalten



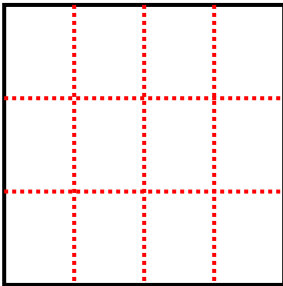
2) 3 Reihen
3 Spalten



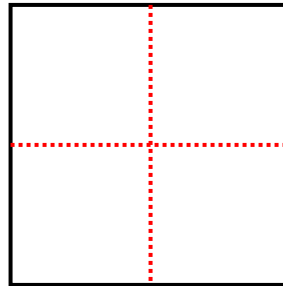
3) 2 Reihen
3 Spalten



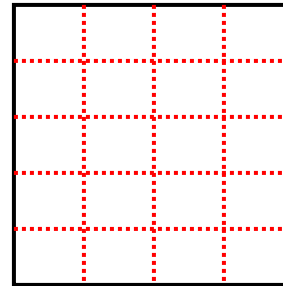
4) 3 Reihen
4 Spalten



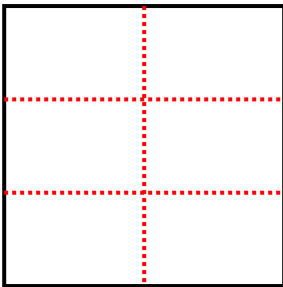
5) 2 Reihen
2 Spalten



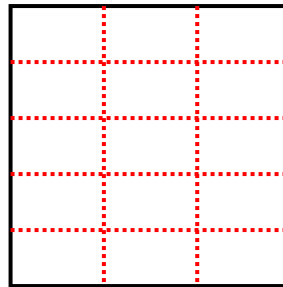
6) 5 Reihen
4 Spalten



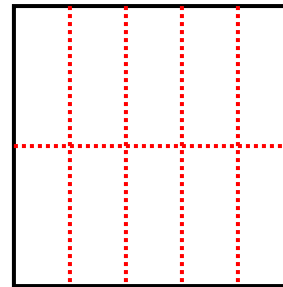
7) 3 Reihen
2 Spalten



8) 5 Reihen
3 Spalten



9) 2 Reihen
5 Spalten



Antworten

- 1. 10
- 2. 9
- 3. 6
- 4. 12
- 5. 4
- 6. 20
- 7. 6
- 8. 15
- 9. 10