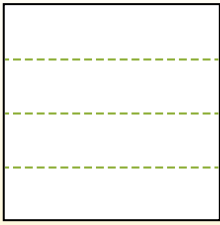


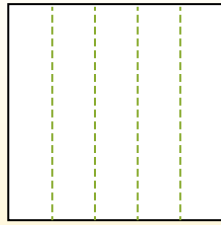


Teile die Form wie beschrieben auf und zähle dann die Anzahl der Felder.

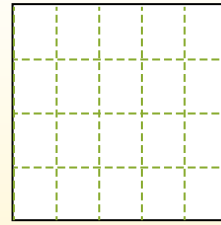
Las filas van de izquierda a derecha.




Las columnas van de arriba a abajo.



Aqui tem 4 linhas e 5 colunas .
Existem 20 caixas no total.



1) 3 Reihen
3 Spalten




2) 2 Reihen
3 Spalten



3) 4 Reihen
2 Spalten




4) 4 Reihen
4 Spalten




5) 2 Reihen
5 Spalten



6) 2 Reihen
4 Spalten




7) 4 Reihen
3 Spalten



8) 5 Reihen
4 Spalten



9) 5 Reihen
3 Spalten



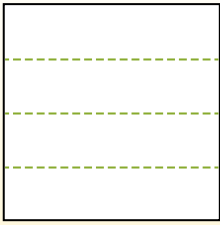
Antworten

- 1. _____
- 2. _____
- 3. _____
- 4. _____
- 5. _____
- 6. _____
- 7. _____
- 8. _____
- 9. _____

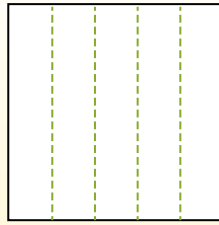


Teile die Form wie beschrieben auf und zähle dann die Anzahl der Felder.

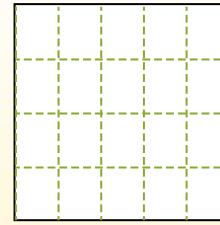
Las filas van de izquierda a derecha.



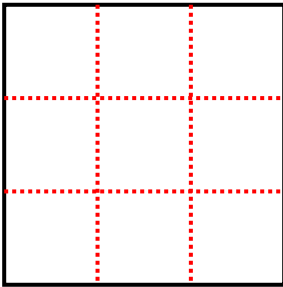
Las columnas van de arriba a abajo.



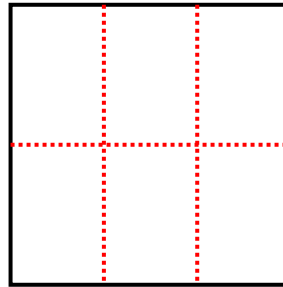
Aqui tem 4 linhas e 5 colunas. Existem 20 caixas no total.



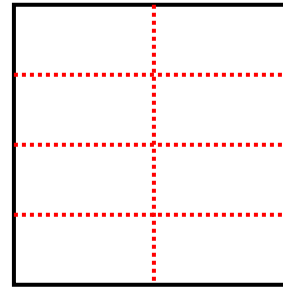
1) 3 Reihen
3 Spalten



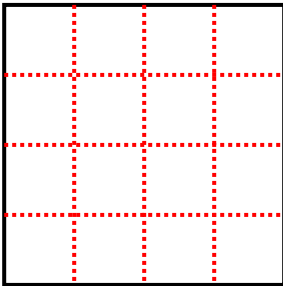
2) 2 Reihen
3 Spalten



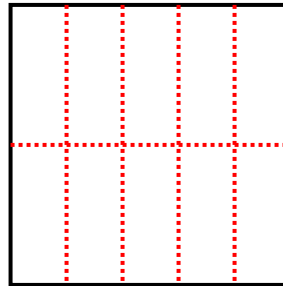
3) 4 Reihen
2 Spalten



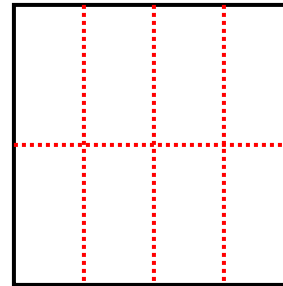
4) 4 Reihen
4 Spalten



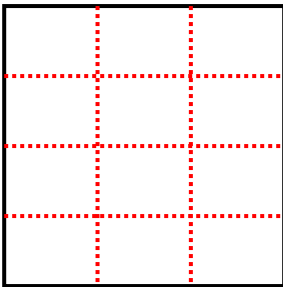
5) 2 Reihen
5 Spalten



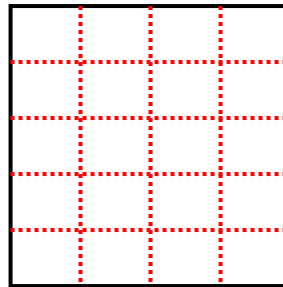
6) 2 Reihen
4 Spalten



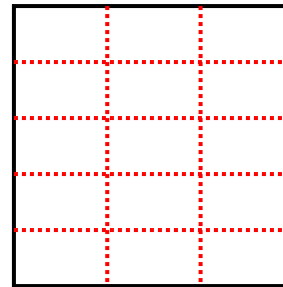
7) 4 Reihen
3 Spalten



8) 5 Reihen
4 Spalten



9) 5 Reihen
3 Spalten



Antworten

1. **9**

2. **6**

3. **8**

4. **16**

5. **10**

6. **8**

7. **12**

8. **20**

9. **15**