



Benutze die vorgegebene Anordnung um jede Aufgabe zu lösen.

**Antworten**

1)  $39 \cdot 30 =$

2)  $28 \cdot 20 =$

1. \_\_\_\_\_

2. \_\_\_\_\_

3. \_\_\_\_\_

4. \_\_\_\_\_

5. \_\_\_\_\_

6. \_\_\_\_\_

3)  $21 \cdot 20 =$

4)  $27 \cdot 20 =$

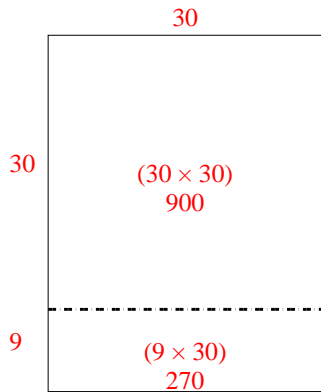
5)  $20 \cdot 28 =$

6)  $20 \cdot 21 =$

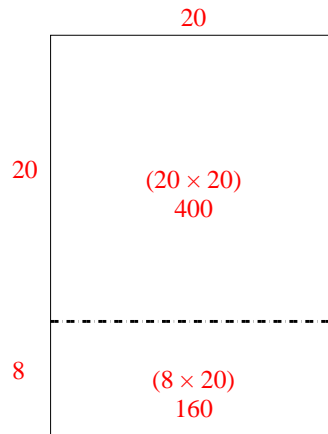


Benutze die vorgegebene Anordnung um jede Aufgabe zu lösen.

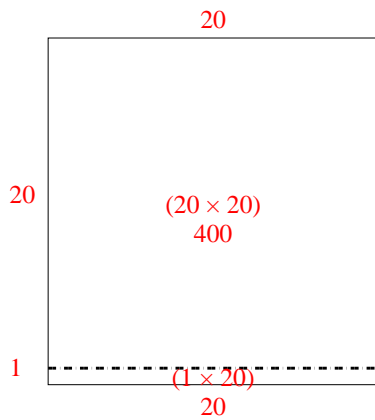
1)  $39 \cdot 30 =$



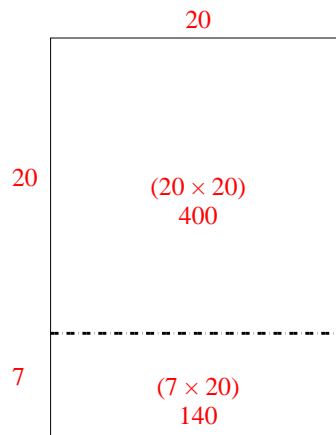
2)  $28 \cdot 20 =$



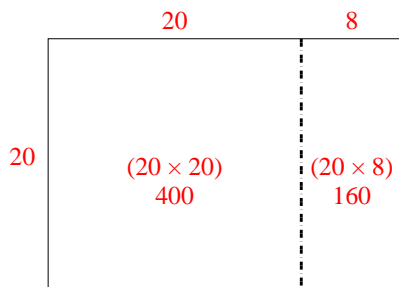
3)  $21 \cdot 20 =$



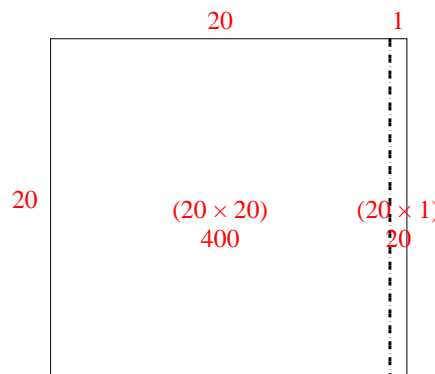
4)  $27 \cdot 20 =$



5)  $20 \cdot 28 =$



6)  $20 \cdot 21 =$



**Antworten**

1. **1.170**

2. **560**

3. **420**

4. **540**


5. **560**

6. **420**




Benutze die vorgegebene Anordnung um jede Aufgabe zu lösen.


1)  $21 \cdot 20 =$




2)  $27 \cdot 20 =$




3)  $20 \cdot 23 =$




4)  $20 \cdot 27 =$



5)  $20 \cdot 29 =$



6)  $20 \cdot 25 =$



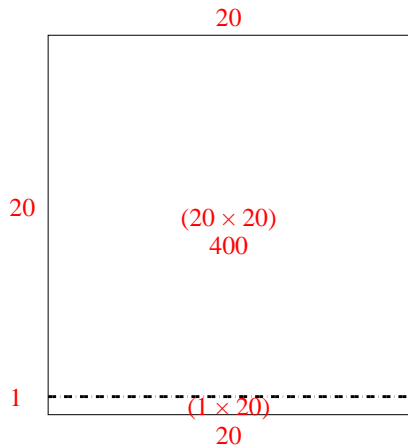
**Antworten**

- 1. \_\_\_\_\_
- 2. \_\_\_\_\_
- 3. \_\_\_\_\_
- 4. \_\_\_\_\_
- 5. \_\_\_\_\_
- 6. \_\_\_\_\_

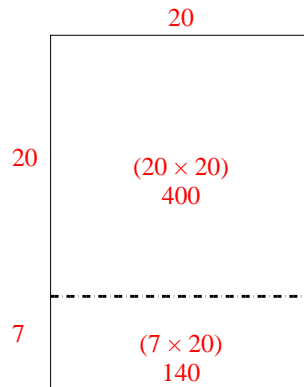


Benutze die vorgegebene Anordnung um jede Aufgabe zu lösen.

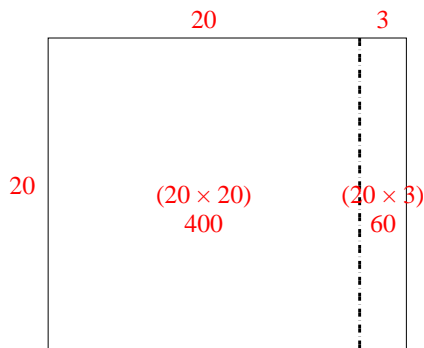
1)  $21 \cdot 20 =$



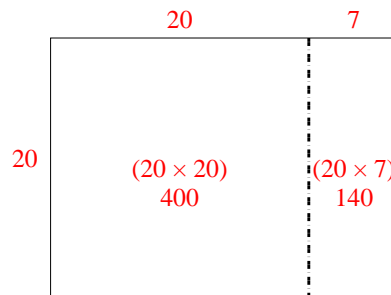
2)  $27 \cdot 20 =$



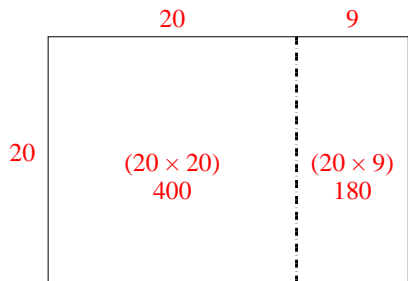
3)  $20 \cdot 23 =$



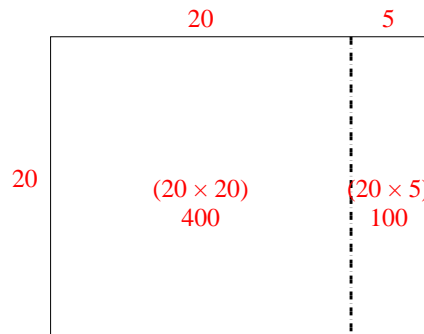
4)  $20 \cdot 27 =$



5)  $20 \cdot 29 =$



6)  $20 \cdot 25 =$




**Antworten**

1. 420
2. 540
3. 460
4. 540
5. 580
6. 500




Benutze die vorgegebene Anordnung um jede Aufgabe zu lösen.


1)  $26 \cdot 20 =$




2)  $20 \cdot 22 =$




3)  $29 \cdot 20 =$




4)  $20 \cdot 29 =$



5)  $25 \cdot 20 =$



6)  $20 \cdot 28 =$



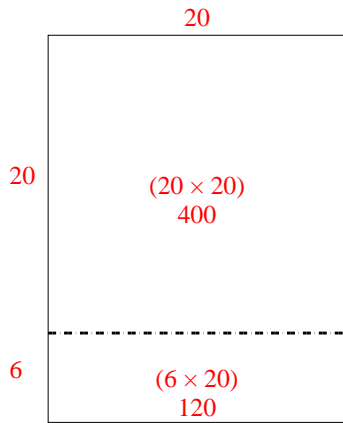
**Antworten**

- 1. \_\_\_\_\_
- 2. \_\_\_\_\_
- 3. \_\_\_\_\_
- 4. \_\_\_\_\_
- 5. \_\_\_\_\_
- 6. \_\_\_\_\_

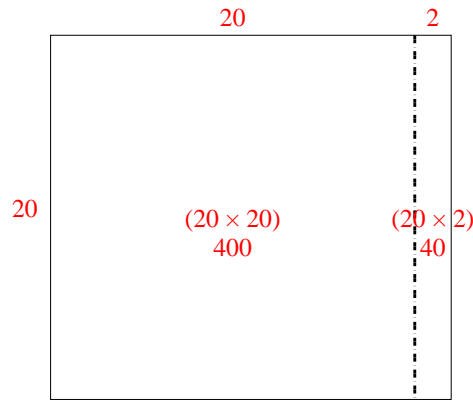


Benutze die vorgegebene Anordnung um jede Aufgabe zu lösen.

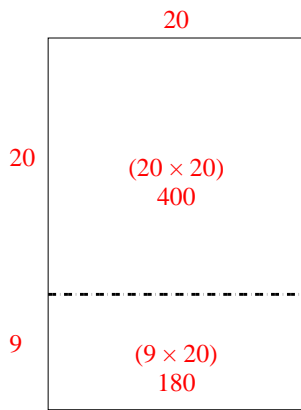
1)  $26 \cdot 20 =$



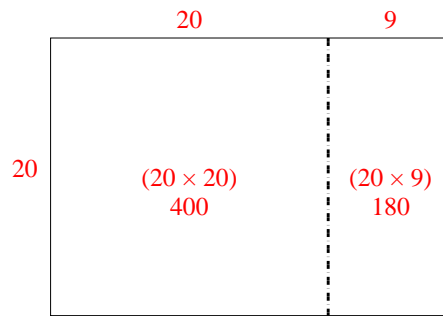
2)  $20 \cdot 22 =$



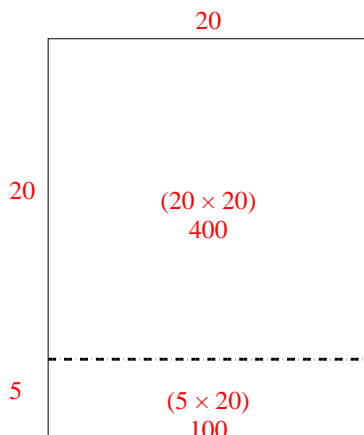
3)  $29 \cdot 20 =$



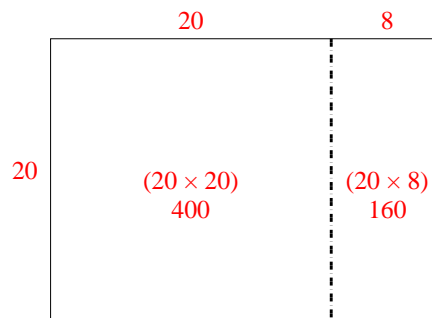
4)  $20 \cdot 29 =$



5)  $25 \cdot 20 =$



6)  $20 \cdot 28 =$



**Antworten**

1. **520**

2. **440**

3. **580**

4. **580**

5. **500**


6. **560**




Benutze die vorgegebene Anordnung um jede Aufgabe zu lösen.

**Antworten**

1)  $33 \cdot 30 =$



2)  $20 \cdot 23 =$



1. \_\_\_\_\_

2. \_\_\_\_\_


3. \_\_\_\_\_

4. \_\_\_\_\_


5. \_\_\_\_\_

6. \_\_\_\_\_


3)  $20 \cdot 21 =$



4)  $20 \cdot 27 =$



5)  $20 \cdot 26 =$



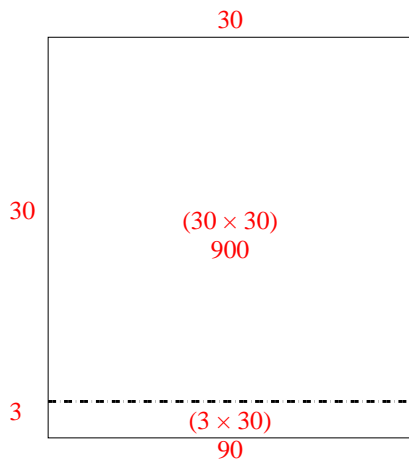
6)  $29 \cdot 20 =$



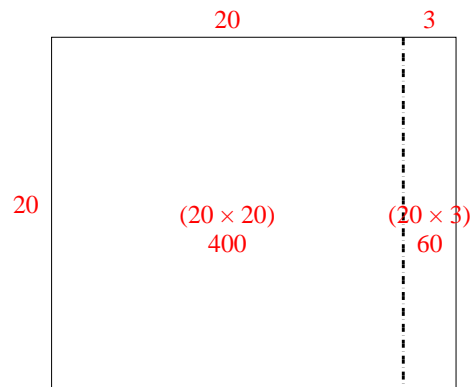


Benutze die vorgegebene Anordnung um jede Aufgabe zu lösen.

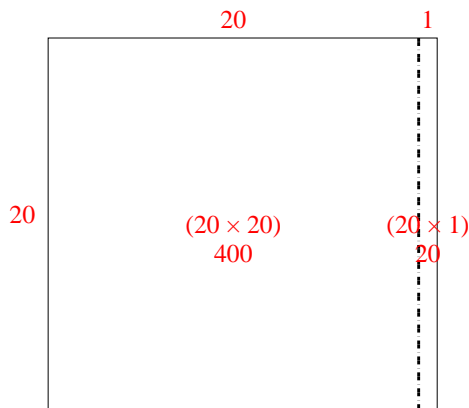
1)  $33 \cdot 30 =$



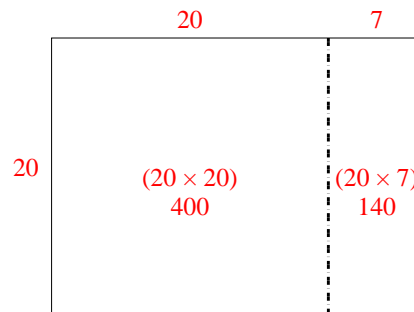
2)  $20 \cdot 23 =$



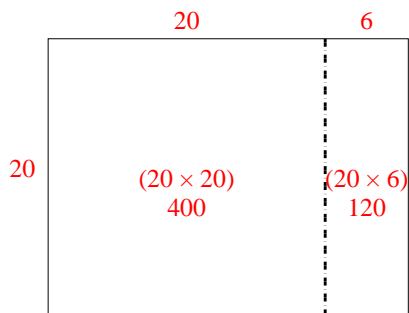
3)  $20 \cdot 21 =$



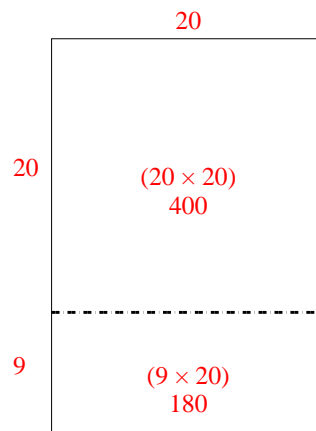
4)  $20 \cdot 27 =$



5)  $20 \cdot 26 =$



6)  $29 \cdot 20 =$



**Antworten**

1. 990
2. 460
3. 420
4. 540
5. 520
6. 580





Benutze die vorgegebene Anordnung um jede Aufgabe zu lösen.

**Antworten**

1)  $43 \cdot 30 =$

2)  $32 \cdot 30 =$

1. \_\_\_\_\_

2. \_\_\_\_\_

3. \_\_\_\_\_

4. \_\_\_\_\_

5. \_\_\_\_\_

6. \_\_\_\_\_

3)  $20 \cdot 23 =$

4)  $25 \cdot 20 =$

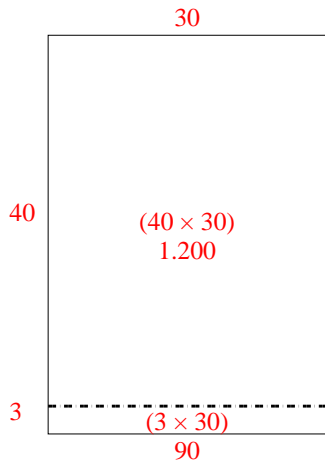
5)  $20 \cdot 24 =$

6)  $22 \cdot 20 =$

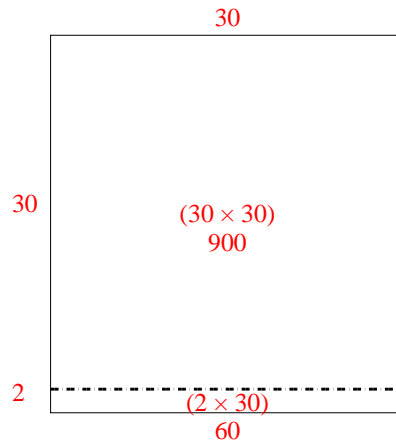


Benutze die vorgegebene Anordnung um jede Aufgabe zu lösen.

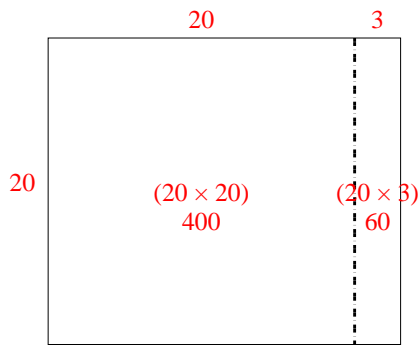
1)  $43 \cdot 30 =$



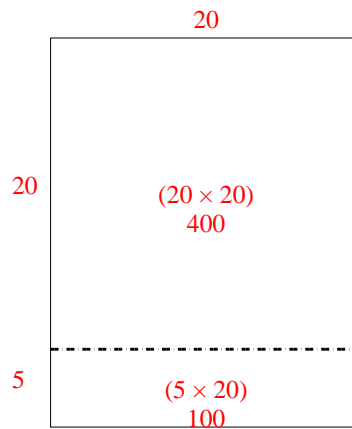
2)  $32 \cdot 30 =$



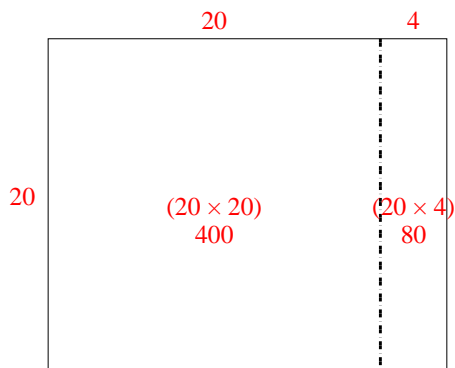
3)  $20 \cdot 23 =$



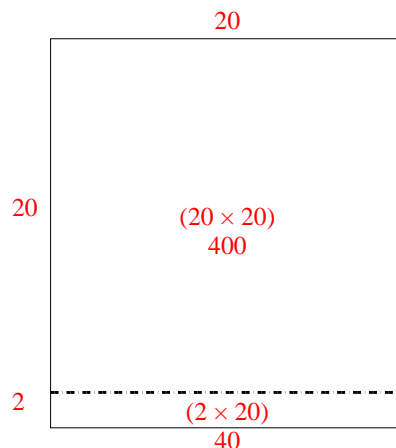
4)  $25 \cdot 20 =$



5)  $20 \cdot 24 =$



6)  $22 \cdot 20 =$




**Antworten**

- 1. **1.290**
- 2. **960**
- 3. **460**
- 4. **500**
- 5. **480**
- 6. **440**




Benutze die vorgegebene Anordnung um jede Aufgabe zu lösen.


1)  $20 \cdot 23 =$




2)  $28 \cdot 20 =$




3)  $24 \cdot 20 =$




4)  $26 \cdot 20 =$



5)  $20 \cdot 25 =$



6)  $20 \cdot 24 =$



**Antworten**

1. \_\_\_\_\_

2. \_\_\_\_\_

3. \_\_\_\_\_

4. \_\_\_\_\_

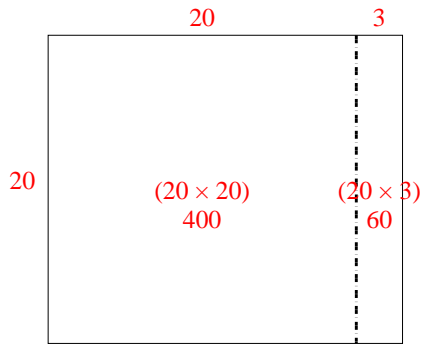
5. \_\_\_\_\_

6. \_\_\_\_\_

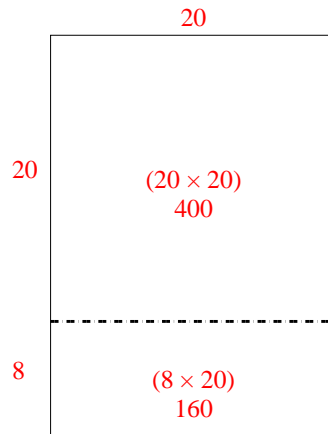


Benutze die vorgegebene Anordnung um jede Aufgabe zu lösen.

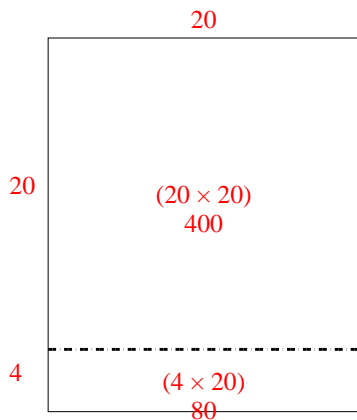
1)  $20 \cdot 23 =$



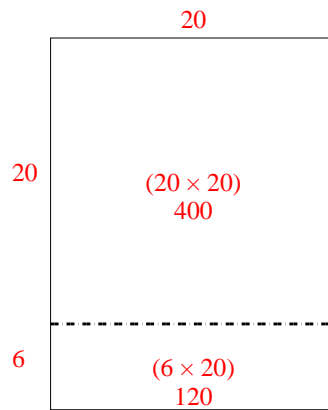
2)  $28 \cdot 20 =$



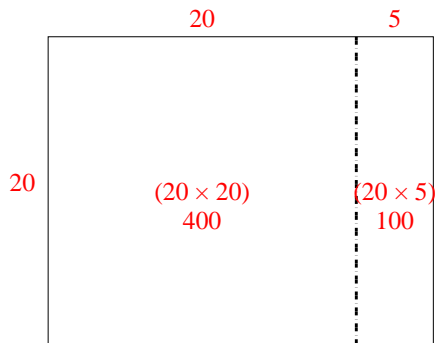
3)  $24 \cdot 20 =$



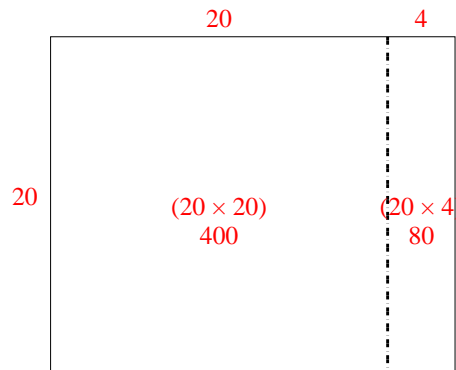
4)  $26 \cdot 20 =$



5)  $20 \cdot 25 =$



6)  $20 \cdot 24 =$



**Antworten**

1. **460**

2. **560**

3. **480**

4. **520**

5. **500**

6. **480**



Benutze die vorgegebene Anordnung um jede Aufgabe zu lösen.

1)  $30 \cdot 32 =$

2)  $20 \cdot 23 =$

3)  $25 \cdot 20 =$

4)  $26 \cdot 20 =$

5)  $22 \cdot 20 =$

6)  $20 \cdot 21 =$

**Antworten**

1. \_\_\_\_\_

2. \_\_\_\_\_

3. \_\_\_\_\_

4. \_\_\_\_\_

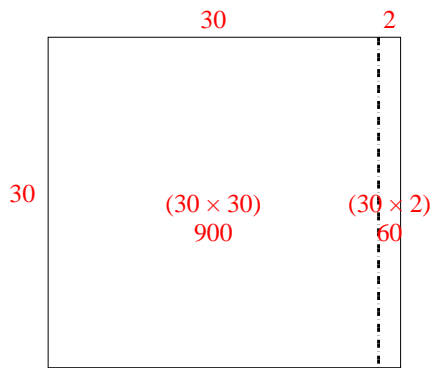
5. \_\_\_\_\_

6. \_\_\_\_\_

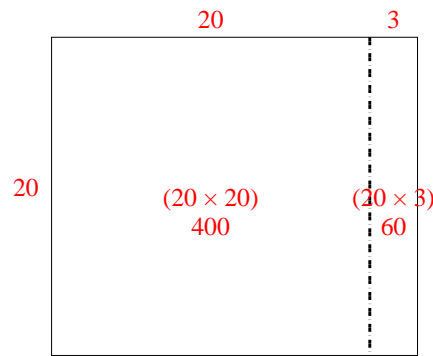


Benutze die vorgegebene Anordnung um jede Aufgabe zu lösen.

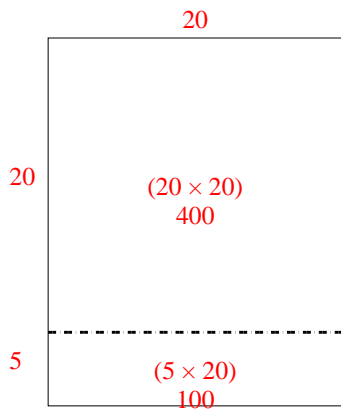
1)  $30 \cdot 32 =$



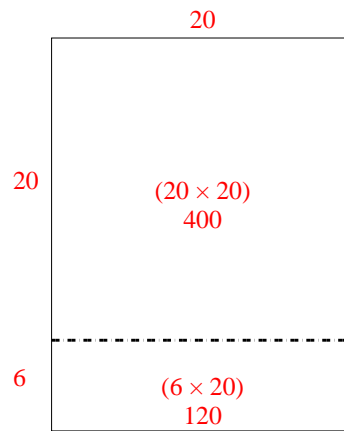
2)  $20 \cdot 23 =$



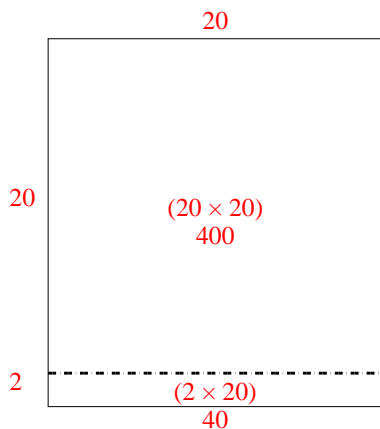
3)  $25 \cdot 20 =$



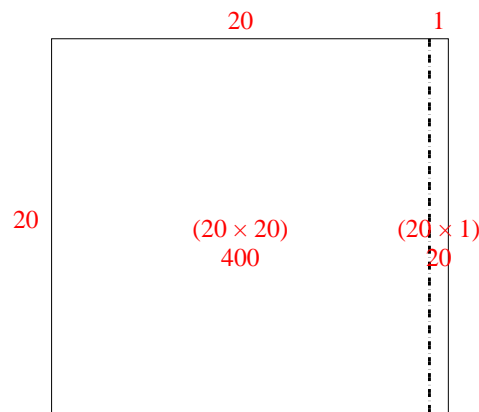
4)  $26 \cdot 20 =$



5)  $22 \cdot 20 =$



6)  $20 \cdot 21 =$



**Antworten**

1. 960

2. 460

3. 500

4. 520

5. 440

6. 420



Benutze die vorgegebene Anordnung um jede Aufgabe zu lösen.

**Antworten**

1)  $32 \cdot 20 =$

2)  $30 \cdot 37 =$

1. \_\_\_\_\_



2. \_\_\_\_\_

3. \_\_\_\_\_

4. \_\_\_\_\_



5. \_\_\_\_\_

6. \_\_\_\_\_





3)  $20 \cdot 22 =$

4)  $20 \cdot 29 =$



5)  $23 \cdot 20 =$

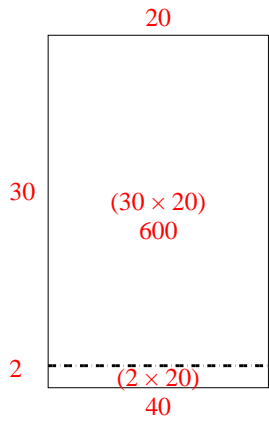
6)  $28 \cdot 20 =$



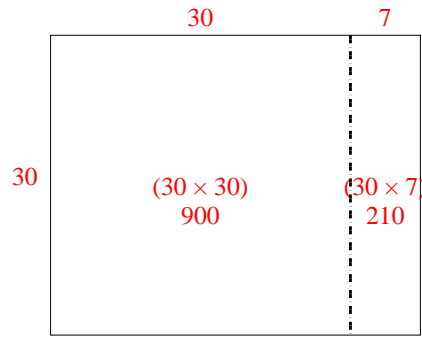


Benutze die vorgegebene Anordnung um jede Aufgabe zu lösen.

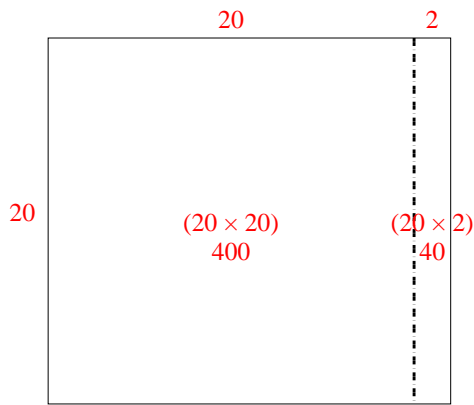
1)  $32 \cdot 20 =$



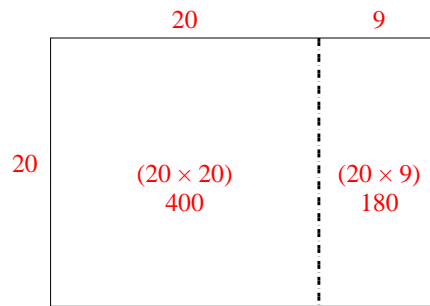
2)  $30 \cdot 37 =$



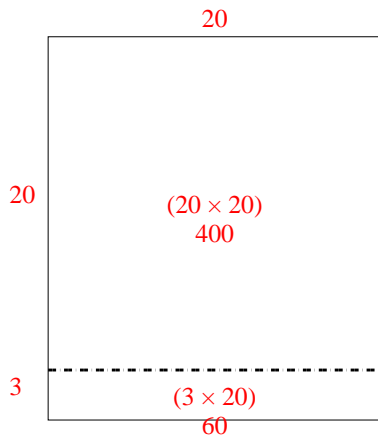
3)  $20 \cdot 22 =$



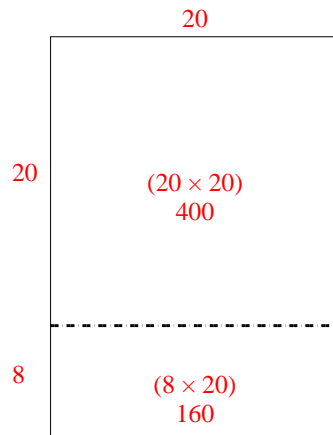
4)  $20 \cdot 29 =$



5)  $23 \cdot 20 =$



6)  $28 \cdot 20 =$



**Antworten**

1. **640**

2. **1.110**

3. **440**

4. **580**

5. **460**


6. **560**





Benutze die vorgegebene Anordnung um jede Aufgabe zu lösen.


1)  $23 \cdot 20 =$




2)  $20 \cdot 28 =$



3)  $20 \cdot 21 =$




4)  $26 \cdot 20 =$



5)  $20 \cdot 22 =$



6)  $25 \cdot 20 =$



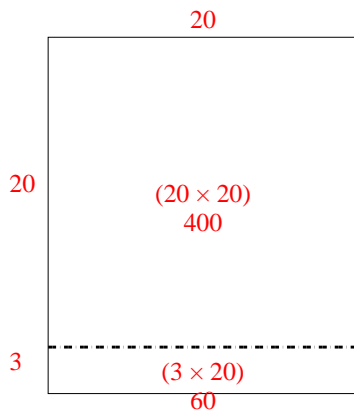
**Antworten**

- 1. \_\_\_\_\_
- 2. \_\_\_\_\_
- 3. \_\_\_\_\_
- 4. \_\_\_\_\_
- 5. \_\_\_\_\_
- 6. \_\_\_\_\_

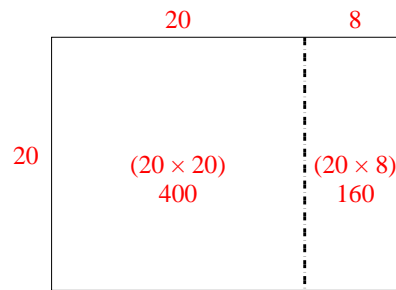


Benutze die vorgegebene Anordnung um jede Aufgabe zu lösen.

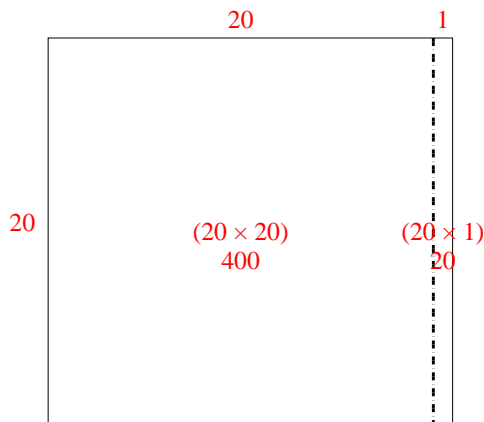
1)  $23 \cdot 20 =$



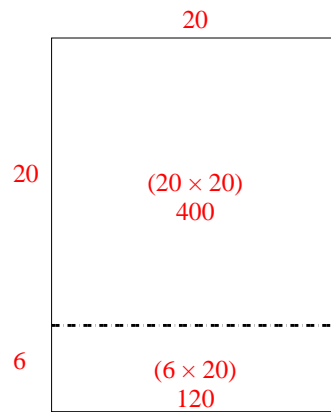
2)  $20 \cdot 28 =$



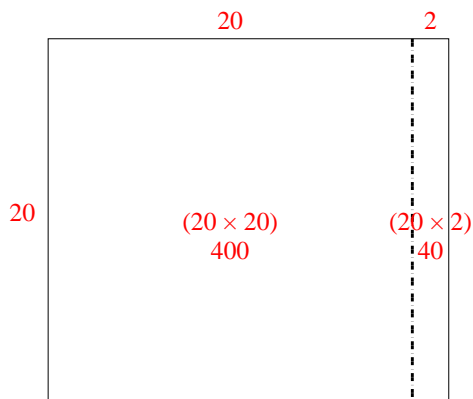
3)  $20 \cdot 21 =$



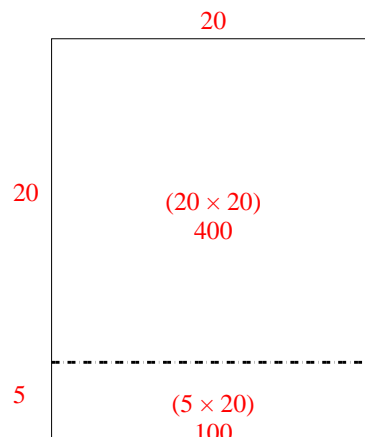
4)  $26 \cdot 20 =$



5)  $20 \cdot 22 =$



6)  $25 \cdot 20 =$



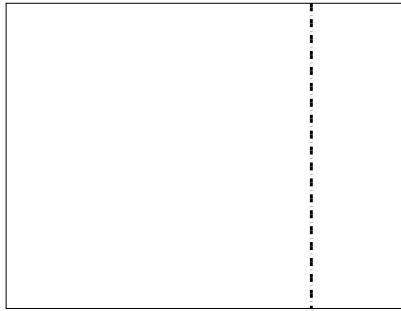
**Antworten**

1. **460**
2. **560**
3. **420**
4. **520**
5. **440**
6. **500**




Benutze die vorgegebene Anordnung um jede Aufgabe zu lösen.


1)  $20 \cdot 26 =$




2)  $21 \cdot 20 =$




3)  $20 \cdot 22 =$




4)  $20 \cdot 28 =$



5)  $20 \cdot 29 =$



6)  $20 \cdot 23 =$



**Antworten**

1. \_\_\_\_\_

2. \_\_\_\_\_

3. \_\_\_\_\_

4. \_\_\_\_\_

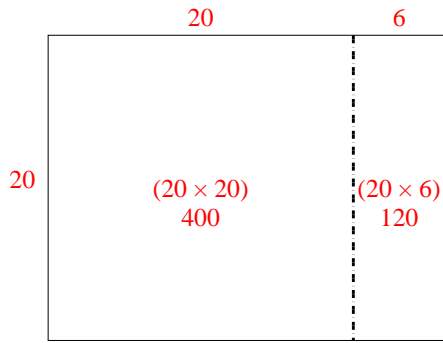
5. \_\_\_\_\_

6. \_\_\_\_\_

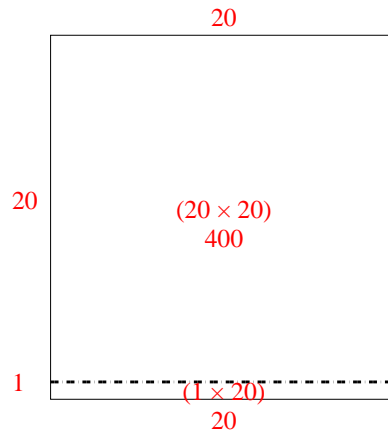


Benutze die vorgegebene Anordnung um jede Aufgabe zu lösen.

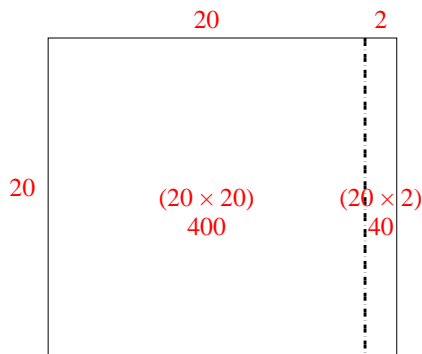
1)  $20 \cdot 26 =$



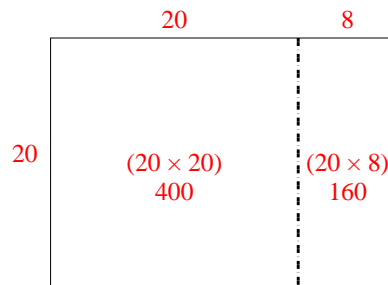
2)  $21 \cdot 20 =$



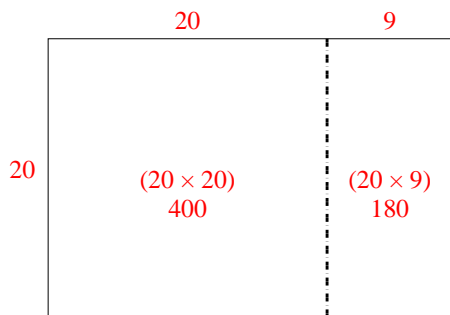
3)  $20 \cdot 22 =$



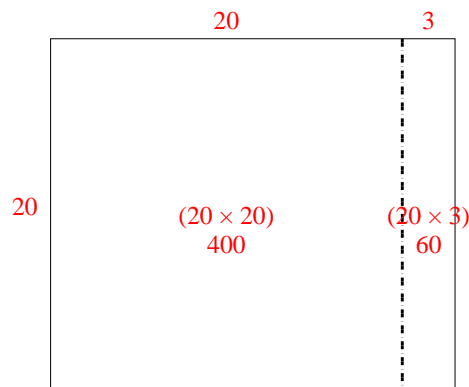
4)  $20 \cdot 28 =$



5)  $20 \cdot 29 =$



6)  $20 \cdot 23 =$



**Antworten**

1. **520**

2. **420**

3. **440**

4. **560**

5. **580**

6. **460**