



Benutze die vorgegebene Anordnung um jede Aufgabe zu lösen.

Antworten

1) $39 \cdot 30 =$

2) $28 \cdot 20 =$

1. _____

2. _____

3. _____

4. _____

5. _____

6. _____

3) $21 \cdot 20 =$

4) $27 \cdot 20 =$

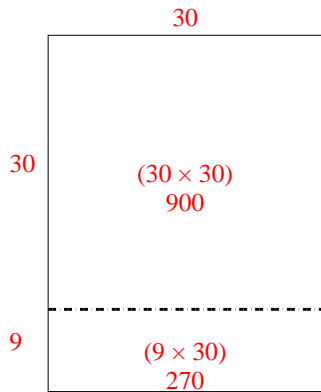
5) $20 \cdot 28 =$

6) $20 \cdot 21 =$

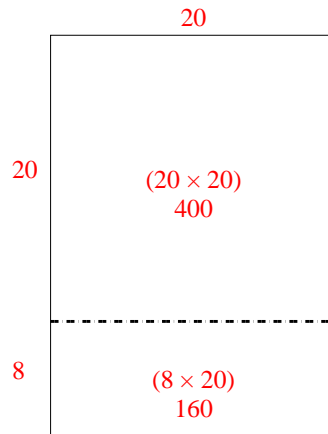


Benutze die vorgegebene Anordnung um jede Aufgabe zu lösen.

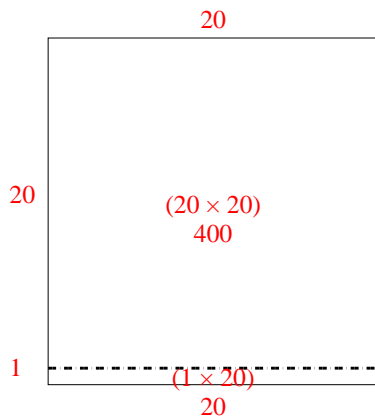
1) $39 \cdot 30 =$



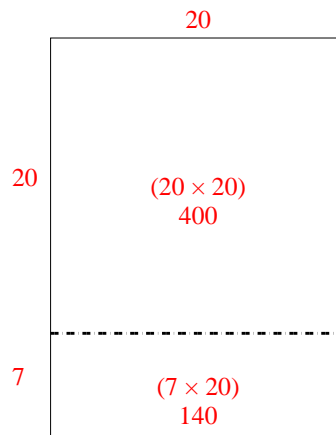
2) $28 \cdot 20 =$



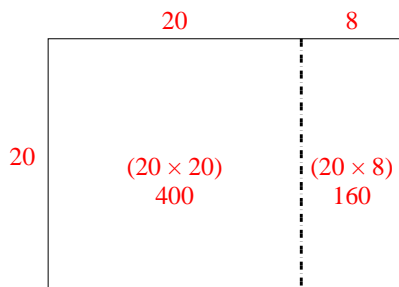
3) $21 \cdot 20 =$



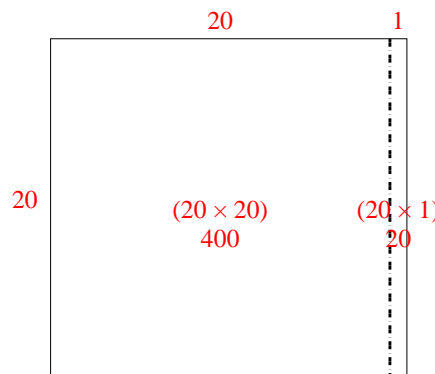
4) $27 \cdot 20 =$



5) $20 \cdot 28 =$



6) $20 \cdot 21 =$



Antworten

1. **1.170**

2. **560**

3. **420**

4. **540**


5. **560**

6. **420**




Benutze die vorgegebene Anordnung um jede Aufgabe zu lösen.


1) $21 \cdot 20 =$




2) $27 \cdot 20 =$




3) $20 \cdot 23 =$




4) $20 \cdot 27 =$



5) $20 \cdot 29 =$



6) $20 \cdot 25 =$



Antworten

1. _____

2. _____

3. _____

4. _____

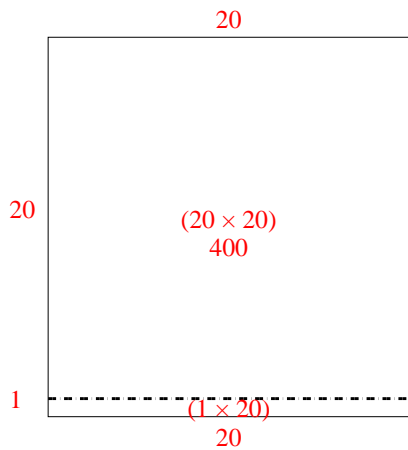
5. _____

6. _____

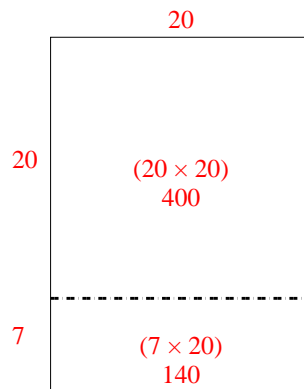


Benutze die vorgegebene Anordnung um jede Aufgabe zu lösen.

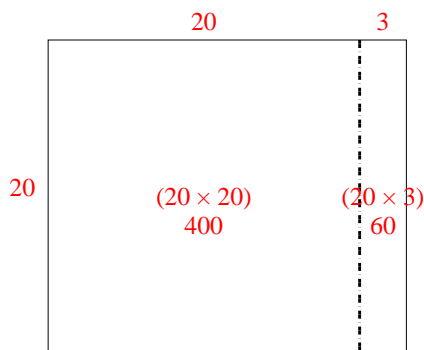
1) $21 \cdot 20 =$



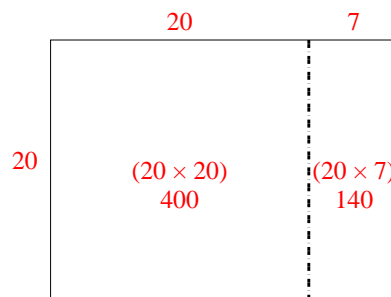
2) $27 \cdot 20 =$



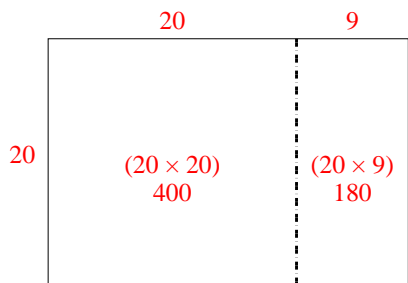
3) $20 \cdot 23 =$



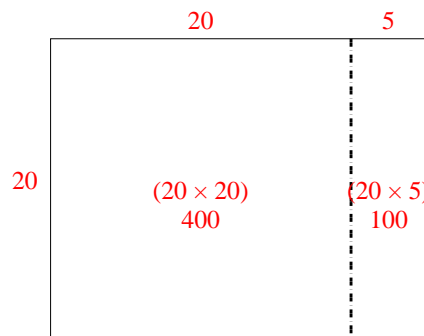
4) $20 \cdot 27 =$



5) $20 \cdot 29 =$



6) $20 \cdot 25 =$




Antworten

1. 420
2. 540
3. 460
4. 540
5. 580
6. 500




Benutze die vorgegebene Anordnung um jede Aufgabe zu lösen.


1) $26 \cdot 20 =$




2) $20 \cdot 22 =$




3) $29 \cdot 20 =$




4) $20 \cdot 29 =$



5) $25 \cdot 20 =$



6) $20 \cdot 28 =$



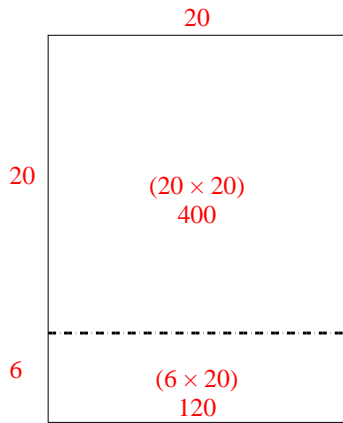
Antworten

- 1. _____
- 2. _____
- 3. _____
- 4. _____
- 5. _____
- 6. _____

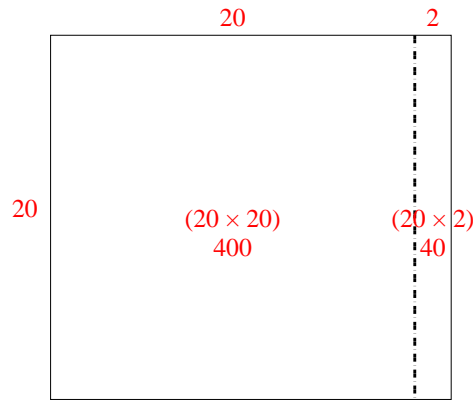


Benutze die vorgegebene Anordnung um jede Aufgabe zu lösen.

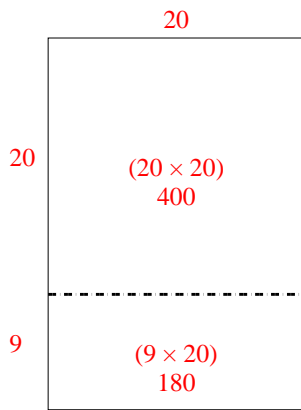
1) $26 \cdot 20 =$



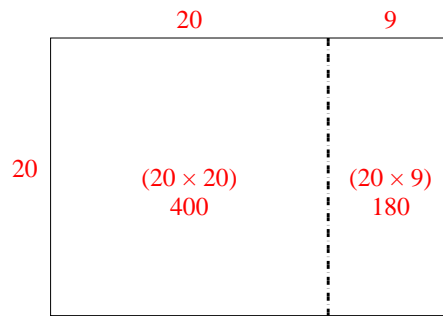
2) $20 \cdot 22 =$



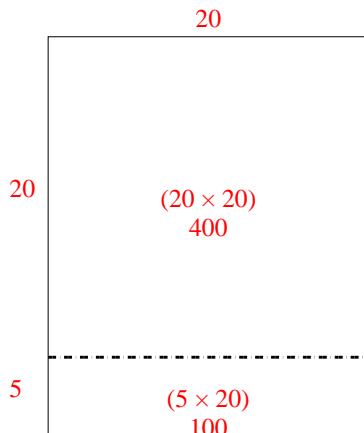
3) $29 \cdot 20 =$



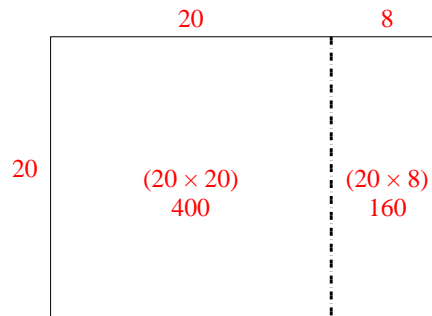
4) $20 \cdot 29 =$



5) $25 \cdot 20 =$



6) $20 \cdot 28 =$



Antworten

1. **520**

2. **440**

3. **580**

4. **580**

5. **500**


6. **560**




Benutze die vorgegebene Anordnung um jede Aufgabe zu lösen.

Antworten

1) $33 \cdot 30 =$



2) $20 \cdot 23 =$



1. _____

2. _____


3. _____

4. _____


5. _____

6. _____


3) $20 \cdot 21 =$




4) $20 \cdot 27 =$



5) $20 \cdot 26 =$



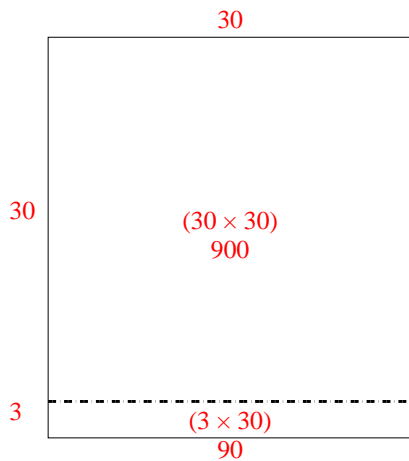
6) $29 \cdot 20 =$



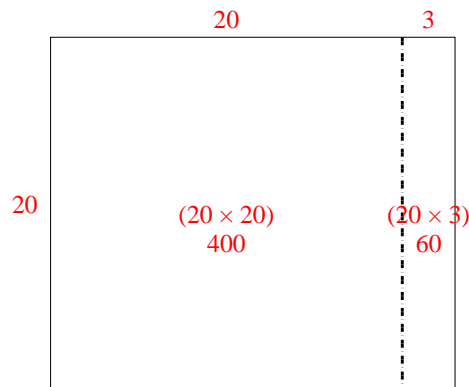


Benutze die vorgegebene Anordnung um jede Aufgabe zu lösen.

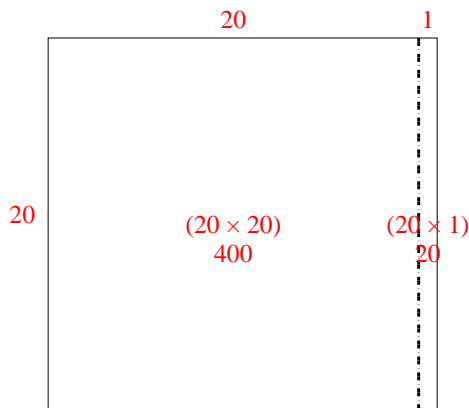
1) $33 \cdot 30 =$



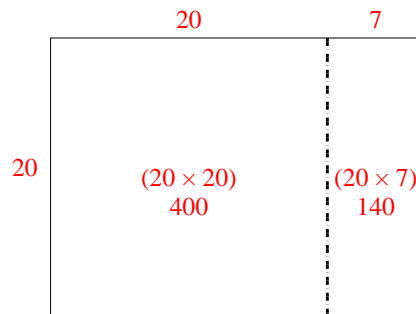
2) $20 \cdot 23 =$



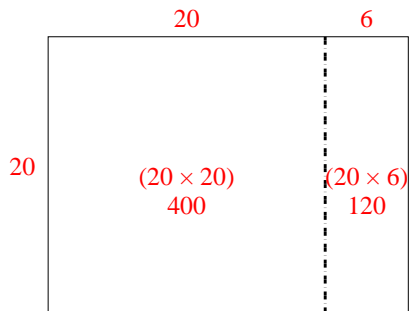
3) $20 \cdot 21 =$



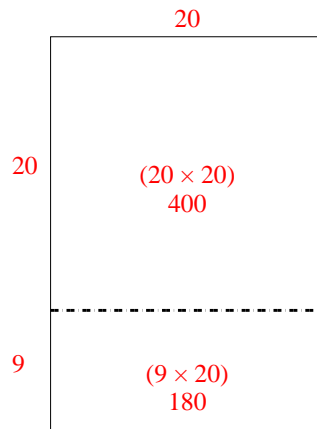
4) $20 \cdot 27 =$



5) $20 \cdot 26 =$



6) $29 \cdot 20 =$



Antworten

1. **990**

2. **460**

3. **420**

4. **540**

5. **520**

6. **580**



Benutze die vorgegebene Anordnung um jede Aufgabe zu lösen.

Antworten

1) $43 \cdot 30 =$

2) $32 \cdot 30 =$

1. _____

2. _____

3. _____

4. _____

5. _____

6. _____

3) $20 \cdot 23 =$

4) $25 \cdot 20 =$

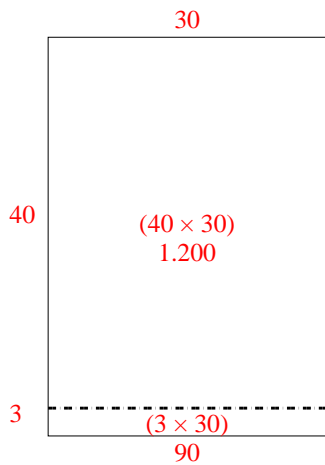
5) $20 \cdot 24 =$

6) $22 \cdot 20 =$

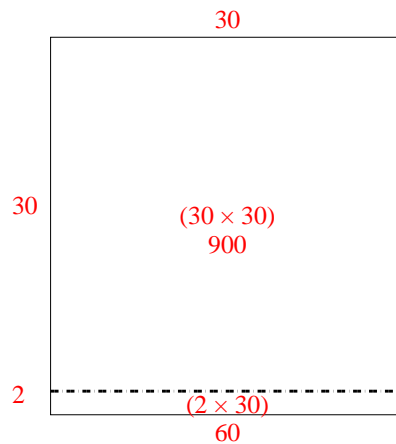


Benutze die vorgegebene Anordnung um jede Aufgabe zu lösen.

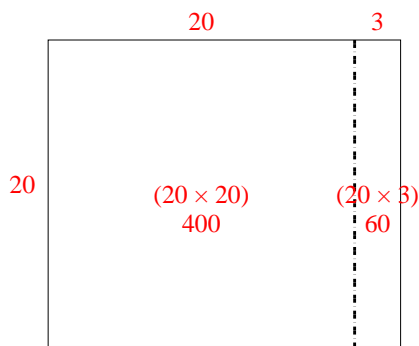
1) $43 \cdot 30 =$



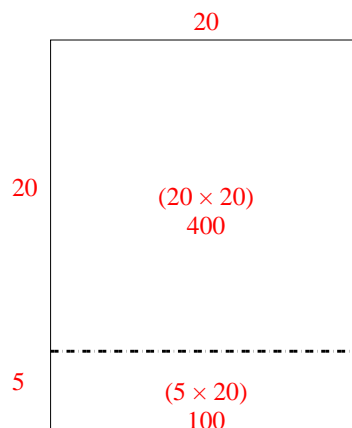
2) $32 \cdot 30 =$



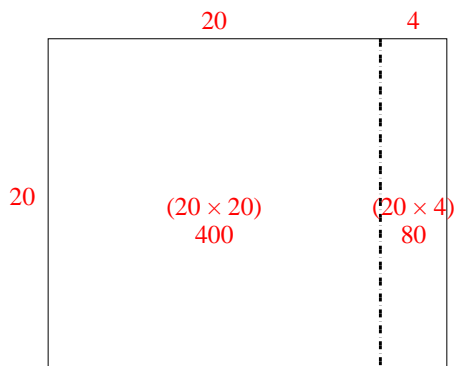
3) $20 \cdot 23 =$



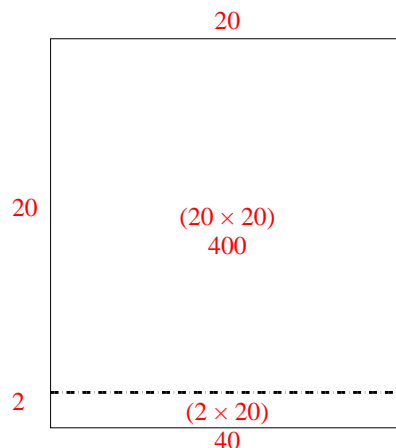
4) $25 \cdot 20 =$



5) $20 \cdot 24 =$



6) $22 \cdot 20 =$




Antworten

1. 1.290
2. 960
3. 460
4. 500
5. 480
6. 440




Benutze die vorgegebene Anordnung um jede Aufgabe zu lösen.


1) $20 \cdot 23 =$




2) $28 \cdot 20 =$




3) $24 \cdot 20 =$




4) $26 \cdot 20 =$



5) $20 \cdot 25 =$



6) $20 \cdot 24 =$



Antworten

1. _____

2. _____

3. _____

4. _____

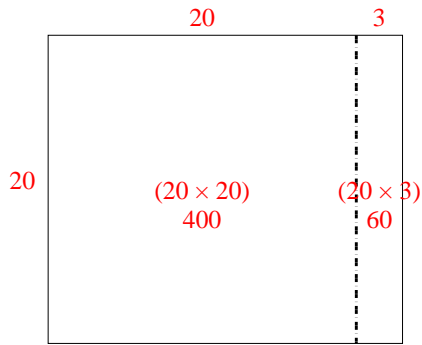
5. _____

6. _____

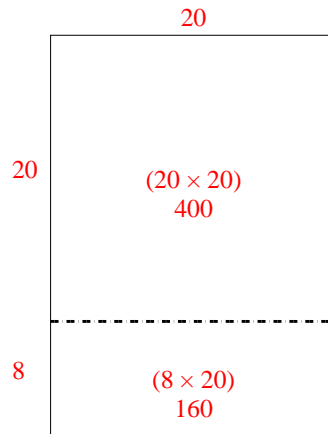


Benutze die vorgegebene Anordnung um jede Aufgabe zu lösen.

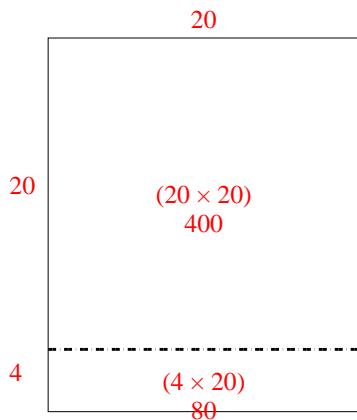
1) $20 \cdot 23 =$



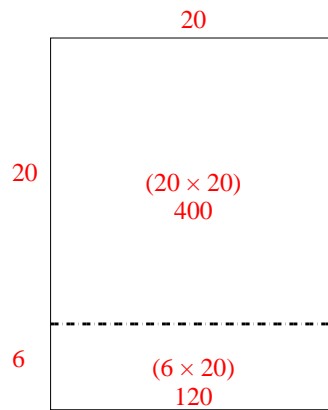
2) $28 \cdot 20 =$



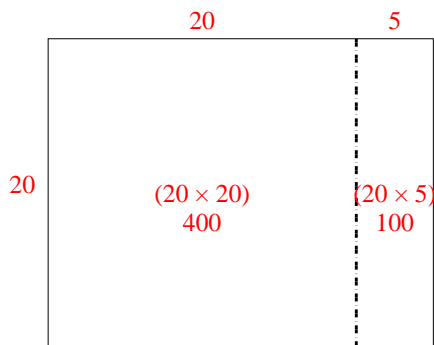
3) $24 \cdot 20 =$



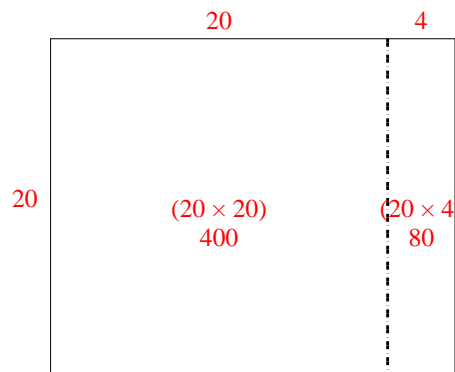
4) $26 \cdot 20 =$



5) $20 \cdot 25 =$



6) $20 \cdot 24 =$



Antworten

1. **460**

2. **560**

3. **480**

4. **520**

5. **500**

6. **480**



Benutze die vorgegebene Anordnung um jede Aufgabe zu lösen.

1) $30 \cdot 32 =$

2) $20 \cdot 23 =$

3) $25 \cdot 20 =$

4) $26 \cdot 20 =$

5) $22 \cdot 20 =$

6) $20 \cdot 21 =$

Antworten

1. _____

2. _____

3. _____

4. _____

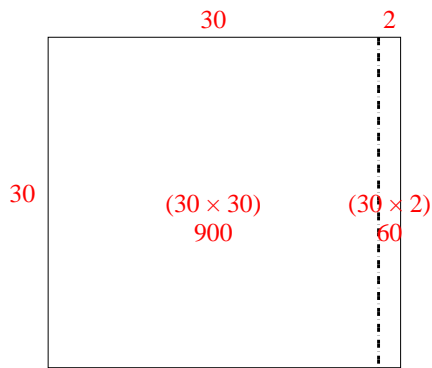
5. _____

6. _____

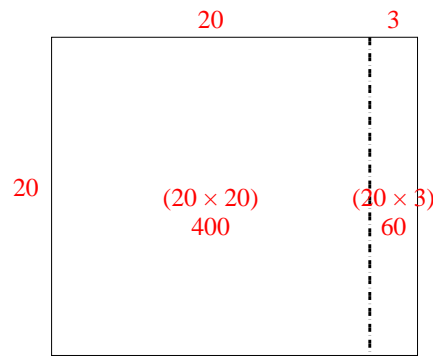


Benutze die vorgegebene Anordnung um jede Aufgabe zu lösen.

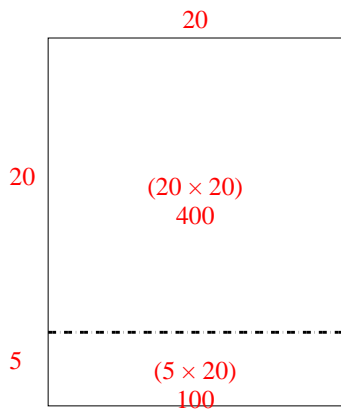
1) $30 \cdot 32 =$



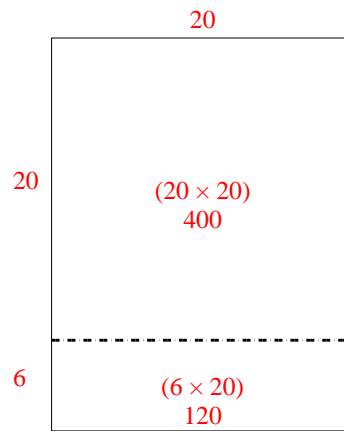
2) $20 \cdot 23 =$



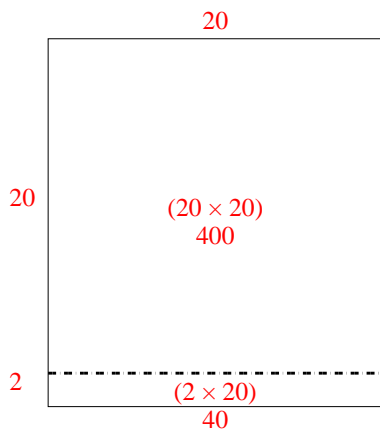
3) $25 \cdot 20 =$



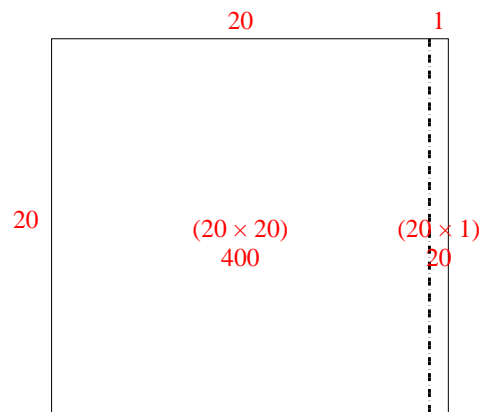
4) $26 \cdot 20 =$



5) $22 \cdot 20 =$



6) $20 \cdot 21 =$



Antworten

1. **960**

2. **460**

3. **500**

4. **520**

5. **440**


6. **420**




Benutze die vorgegebene Anordnung um jede Aufgabe zu lösen.

Antworten

1) $32 \cdot 20 =$



2) $30 \cdot 37 =$



1. _____

2. _____


3. _____

4. _____


5. _____

6. _____


3) $20 \cdot 22 =$




4) $20 \cdot 29 =$



5) $23 \cdot 20 =$



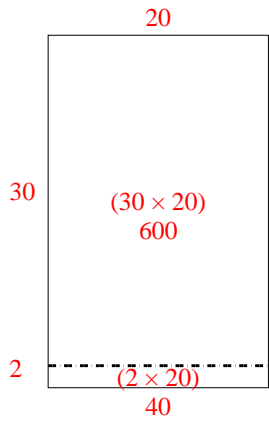
6) $28 \cdot 20 =$



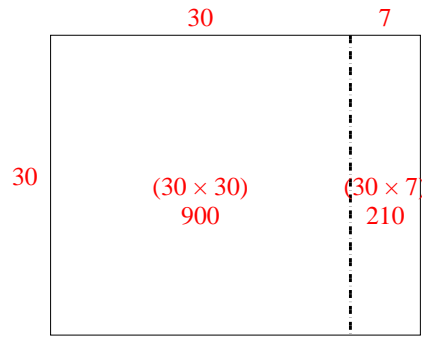


Benutze die vorgegebene Anordnung um jede Aufgabe zu lösen.

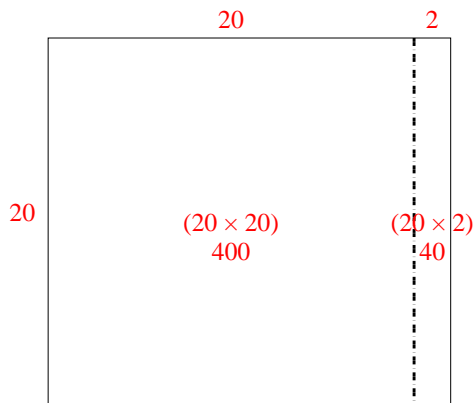
1) $32 \cdot 20 =$



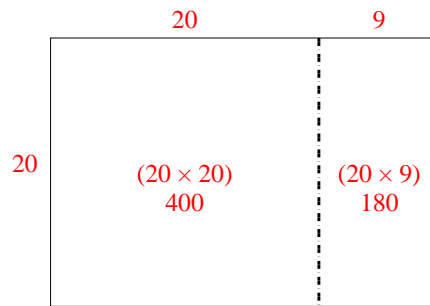
2) $30 \cdot 37 =$



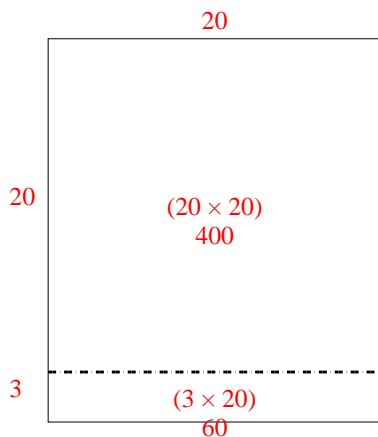
3) $20 \cdot 22 =$



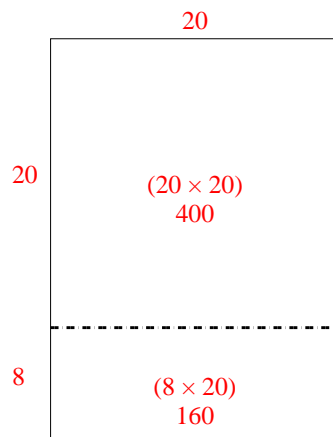
4) $20 \cdot 29 =$



5) $23 \cdot 20 =$



6) $28 \cdot 20 =$



Antworten

1. **640**

2. **1.110**

3. **440**

4. **580**


5. **460**

6. **560**




Benutze die vorgegebene Anordnung um jede Aufgabe zu lösen.


1) $23 \cdot 20 =$




2) $20 \cdot 28 =$



3) $20 \cdot 21 =$




4) $26 \cdot 20 =$



5) $20 \cdot 22 =$



6) $25 \cdot 20 =$



Antworten

1. _____

2. _____

3. _____

4. _____

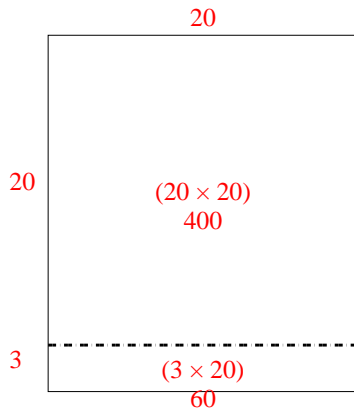
5. _____

6. _____

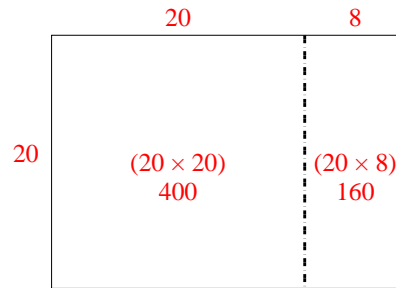


Benutze die vorgegebene Anordnung um jede Aufgabe zu lösen.

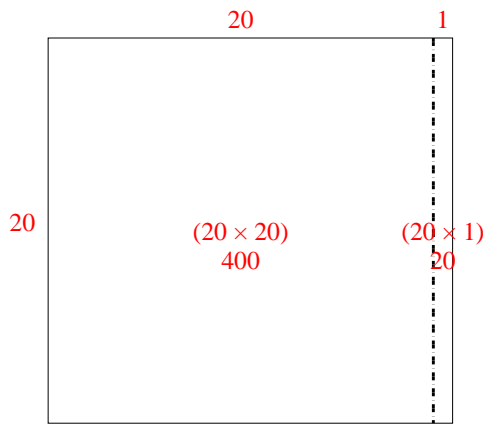
1) $23 \cdot 20 =$



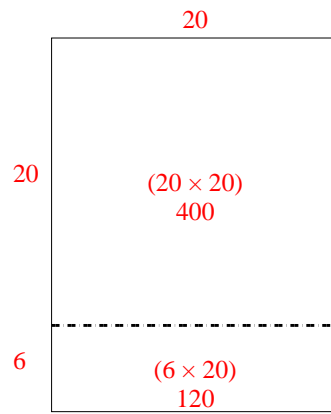
2) $20 \cdot 28 =$



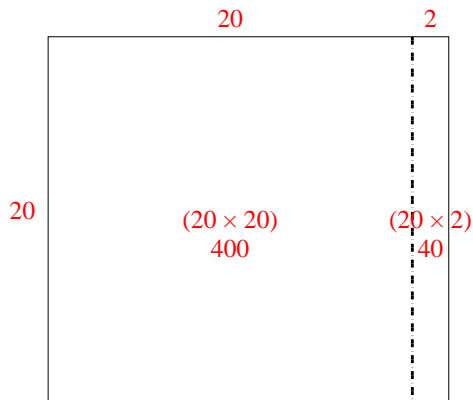
3) $20 \cdot 21 =$



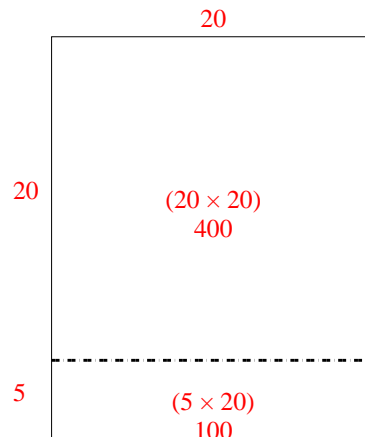
4) $26 \cdot 20 =$



5) $20 \cdot 22 =$



6) $25 \cdot 20 =$




Antworten

1. 460
2. 560
3. 420
4. 520
5. 440
6. 500




Benutze die vorgegebene Anordnung um jede Aufgabe zu lösen.


1) $20 \cdot 26 =$




2) $21 \cdot 20 =$




3) $20 \cdot 22 =$




4) $20 \cdot 28 =$



5) $20 \cdot 29 =$



6) $20 \cdot 23 =$



Antworten

1. _____

2. _____

3. _____

4. _____

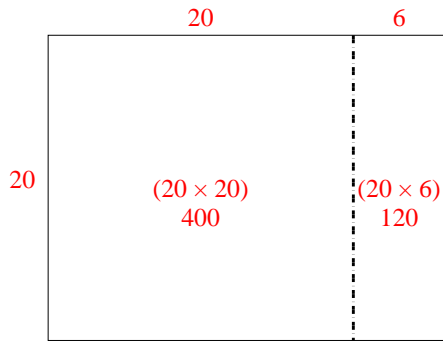
5. _____

6. _____

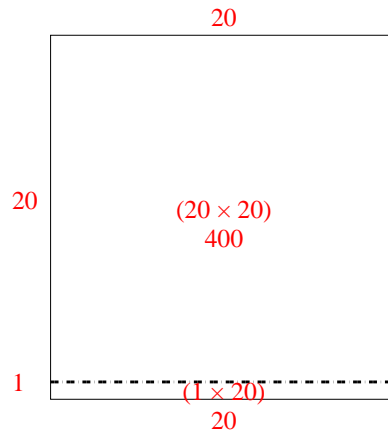


Benutze die vorgegebene Anordnung um jede Aufgabe zu lösen.

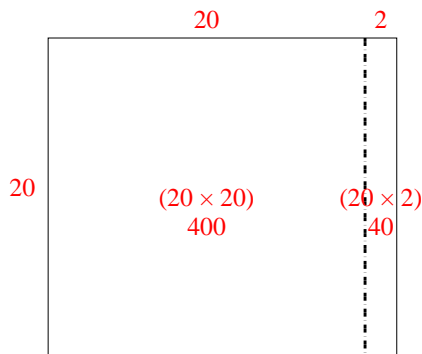
1) $20 \cdot 26 =$



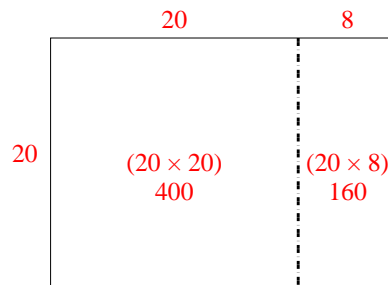
2) $21 \cdot 20 =$



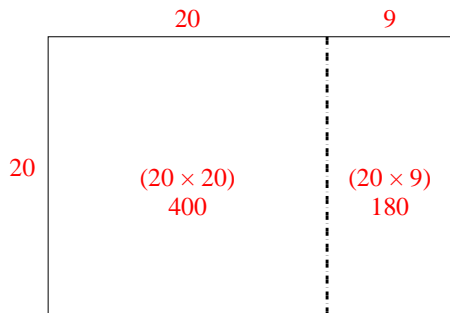
3) $20 \cdot 22 =$



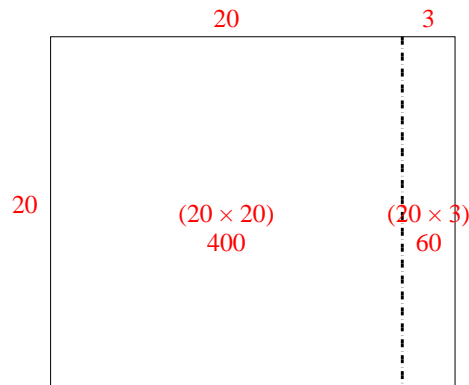
4) $20 \cdot 28 =$



5) $20 \cdot 29 =$



6) $20 \cdot 23 =$



Antworten

1. **520**

2. **420**

3. **440**

4. **560**

5. **580**

6. **460**