





Benutze die vorgegebene Anordnung um jede Aufgabe zu lösen.


1) $23 \cdot 20 =$




2) $20 \cdot 28 =$




3) $20 \cdot 21 =$




4) $26 \cdot 20 =$



5) $20 \cdot 22 =$



6) $25 \cdot 20 =$



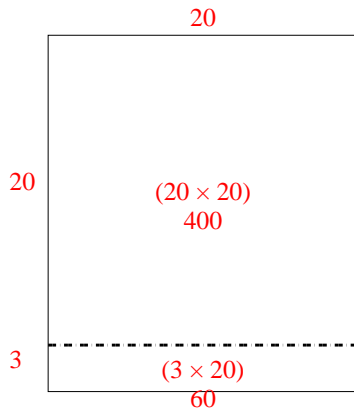
Antworten

- 1. _____
- 2. _____
- 3. _____
- 4. _____
- 5. _____
- 6. _____

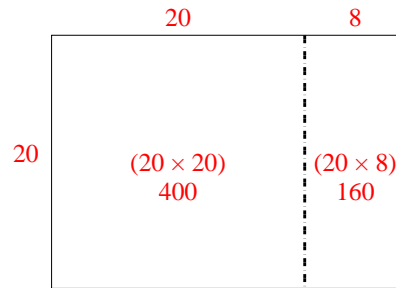


Benutze die vorgegebene Anordnung um jede Aufgabe zu lösen.

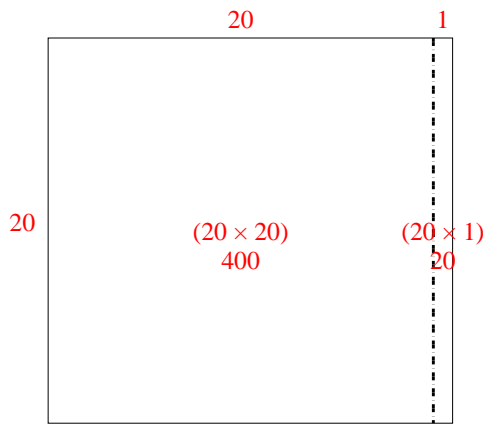
1) $23 \cdot 20 =$



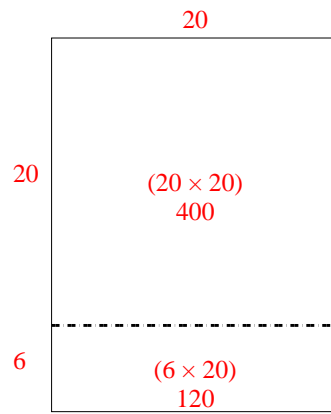
2) $20 \cdot 28 =$



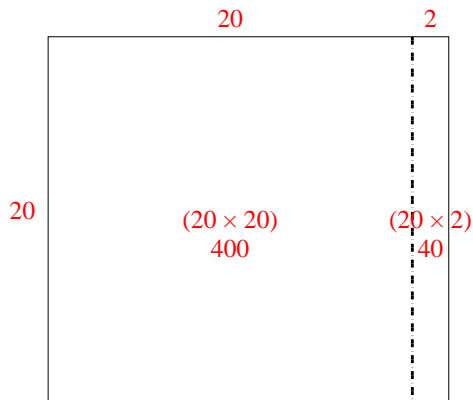
3) $20 \cdot 21 =$



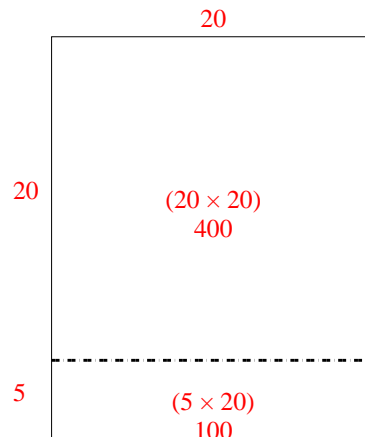
4) $26 \cdot 20 =$



5) $20 \cdot 22 =$



6) $25 \cdot 20 =$



Antworten

1. 460
2. 560
3. 420
4. 520
5. 440
6. 500