



Benutze die vorgegebene Anordnung um jede Aufgabe zu lösen.

1) $30 \cdot 32 =$

2) $20 \cdot 23 =$

3) $25 \cdot 20 =$

4) $26 \cdot 20 =$

5) $22 \cdot 20 =$

6) $20 \cdot 21 =$

Antworten

1. _____

2. _____

3. _____

4. _____

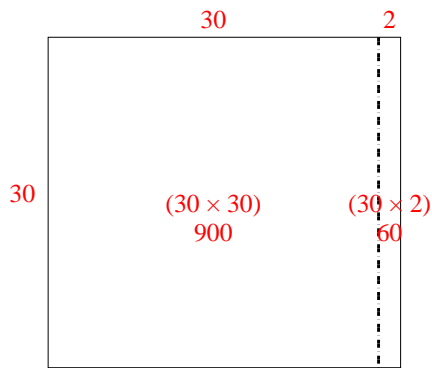
5. _____

6. _____

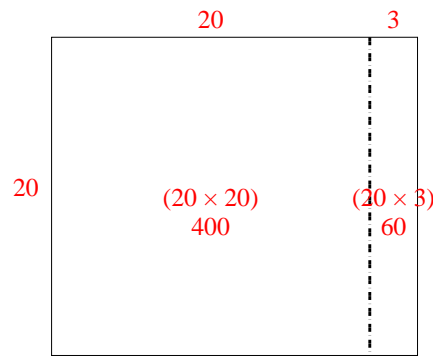


Benutze die vorgegebene Anordnung um jede Aufgabe zu lösen.

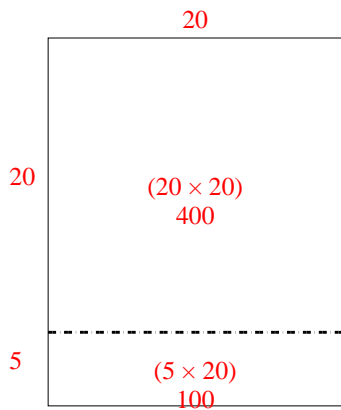
1) $30 \cdot 32 =$



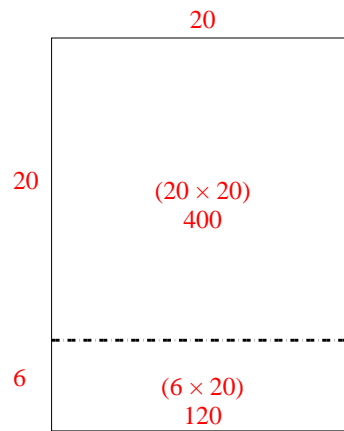
2) $20 \cdot 23 =$



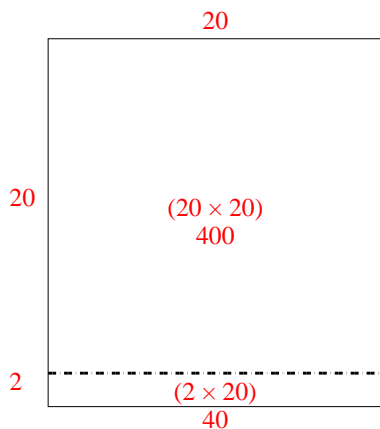
3) $25 \cdot 20 =$



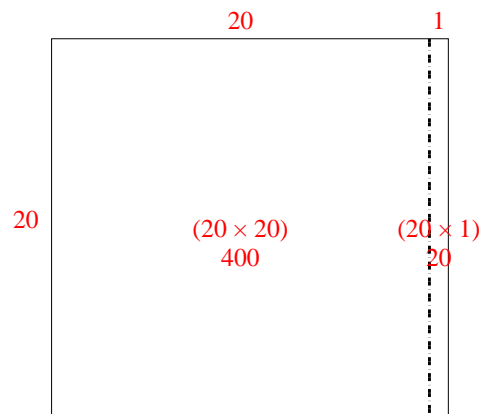
4) $26 \cdot 20 =$



5) $22 \cdot 20 =$



6) $20 \cdot 21 =$



Antworten

1. **960**

2. **460**

3. **500**

4. **520**

5. **440**

6. **420**