



Benutze die vorgegebene Anordnung um jede Aufgabe zu lösen.

Antworten

1) $43 \cdot 30 =$

2) $32 \cdot 30 =$

1. _____

2. _____

3. _____

4. _____

5. _____

6. _____

3) $20 \cdot 23 =$

4) $25 \cdot 20 =$

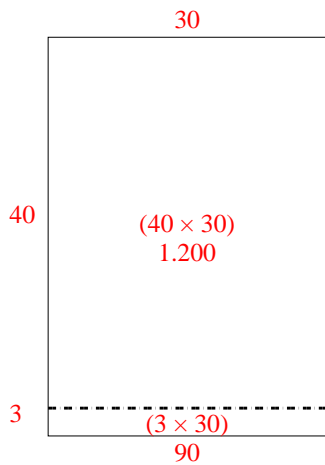
5) $20 \cdot 24 =$

6) $22 \cdot 20 =$

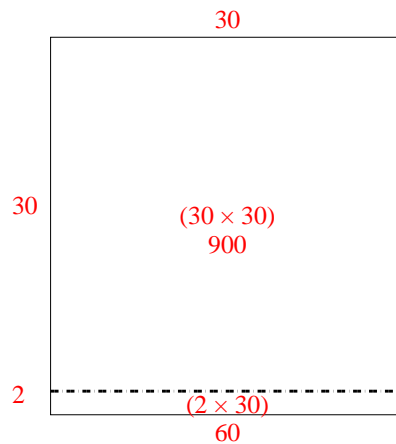


Benutze die vorgegebene Anordnung um jede Aufgabe zu lösen.

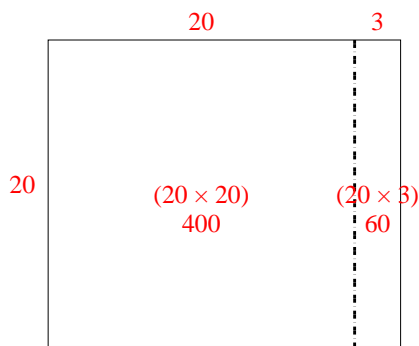
1) $43 \cdot 30 =$



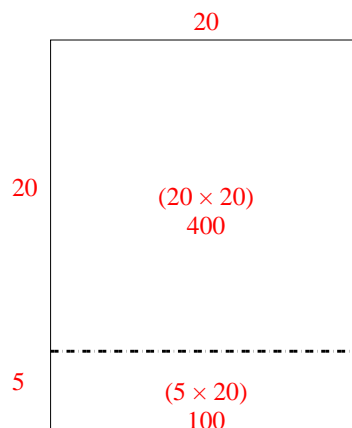
2) $32 \cdot 30 =$



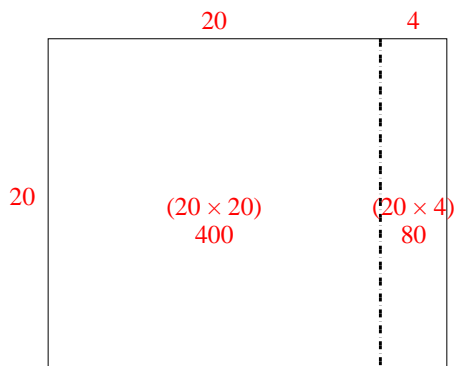
3) $20 \cdot 23 =$



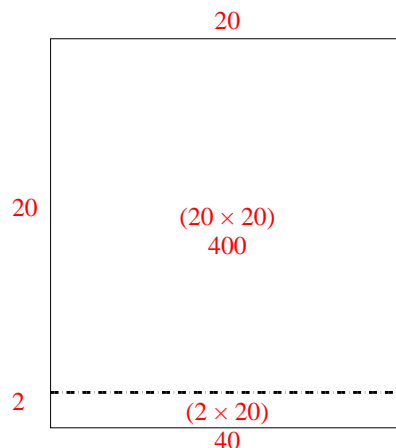
4) $25 \cdot 20 =$



5) $20 \cdot 24 =$



6) $22 \cdot 20 =$



Antworten

- 1. **1.290**
- 2. **960**
- 3. **460**
- 4. **500**
- 5. **480**
- 6. **440**