





Benutze die vorgegebene Anordnung um jede Aufgabe zu lösen.

Antworten

1) $33 \cdot 30 =$



2) $20 \cdot 23 =$



1. _____

2. _____


3. _____

4. _____


5. _____

6. _____


3) $20 \cdot 21 =$




4) $20 \cdot 27 =$



5) $20 \cdot 26 =$



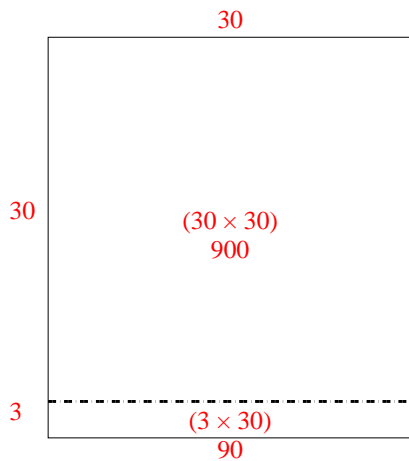
6) $29 \cdot 20 =$



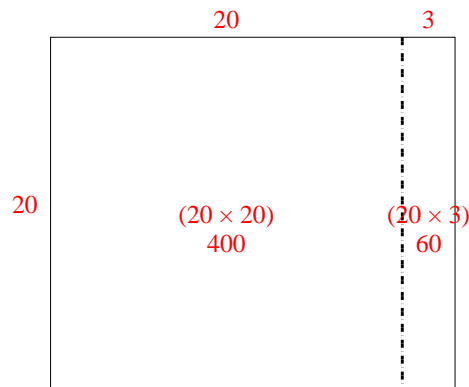


Benutze die vorgegebene Anordnung um jede Aufgabe zu lösen.

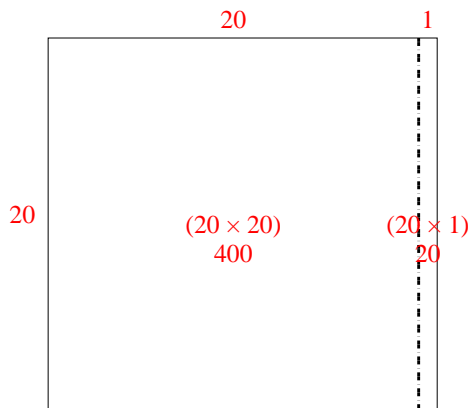
1) $33 \cdot 30 =$



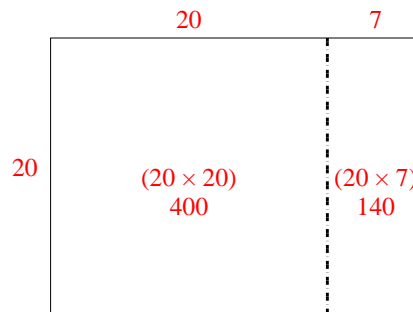
2) $20 \cdot 23 =$



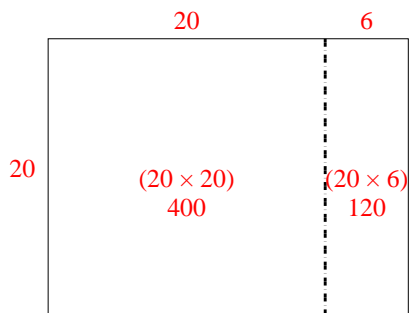
3) $20 \cdot 21 =$



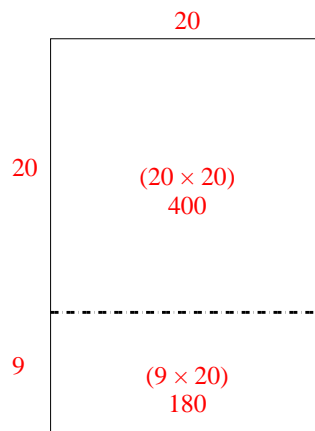
4) $20 \cdot 27 =$



5) $20 \cdot 26 =$



6) $29 \cdot 20 =$



Antworten

1. **990**
2. **460**
3. **420**
4. **540**
5. **520**
6. **580**