





Benutze die vorgegebene Anordnung um jede Aufgabe zu lösen.


1)  $21 \cdot 20 =$




2)  $27 \cdot 20 =$




3)  $20 \cdot 23 =$




4)  $20 \cdot 27 =$



5)  $20 \cdot 29 =$



6)  $20 \cdot 25 =$



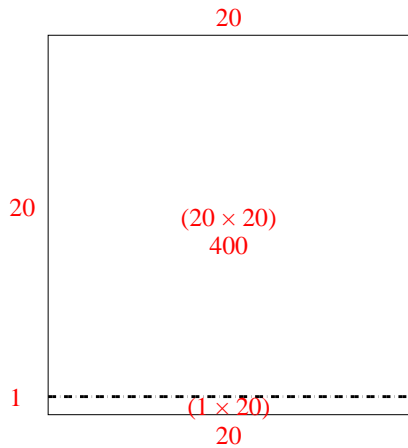
**Antworten**

- 1. \_\_\_\_\_
- 2. \_\_\_\_\_
- 3. \_\_\_\_\_
- 4. \_\_\_\_\_
- 5. \_\_\_\_\_
- 6. \_\_\_\_\_

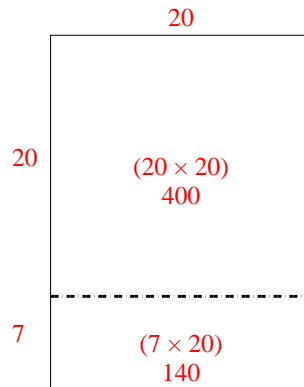


Benutze die vorgegebene Anordnung um jede Aufgabe zu lösen.

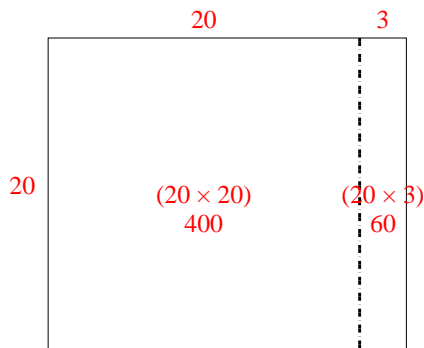
1)  $21 \cdot 20 =$



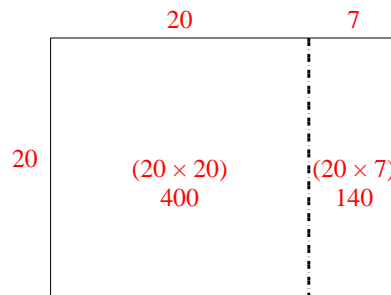
2)  $27 \cdot 20 =$



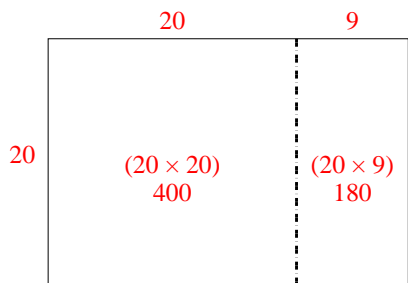
3)  $20 \cdot 23 =$



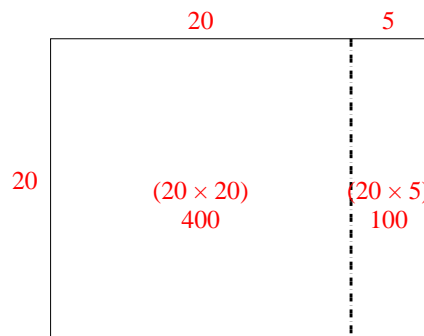
4)  $20 \cdot 27 =$



5)  $20 \cdot 29 =$



6)  $20 \cdot 25 =$



**Antworten**

1. **420**

2. **540**

3. **460**

4. **540**

5. **580**

6. **500**