





Benutze die vorgegebene Anordnung um jede Aufgabe zu lösen.


1)  $21 \cdot 20 =$




2)  $27 \cdot 20 =$




3)  $20 \cdot 23 =$




4)  $20 \cdot 27 =$



5)  $20 \cdot 29 =$



6)  $20 \cdot 25 =$



**Antworten**

1. \_\_\_\_\_

2. \_\_\_\_\_

3. \_\_\_\_\_

4. \_\_\_\_\_

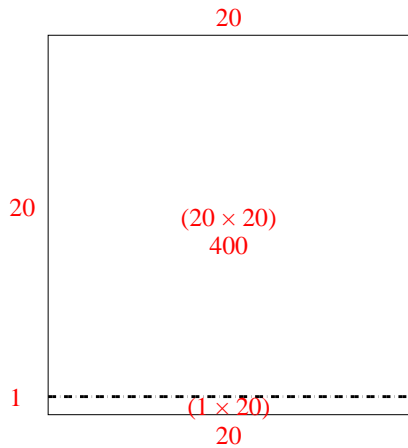
5. \_\_\_\_\_

6. \_\_\_\_\_

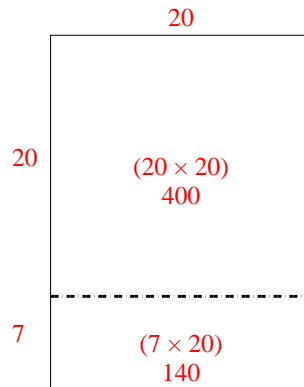


Benutze die vorgegebene Anordnung um jede Aufgabe zu lösen.

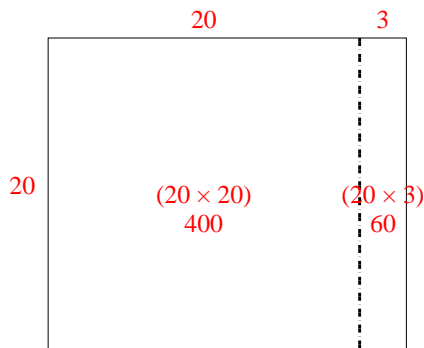
1)  $21 \cdot 20 =$



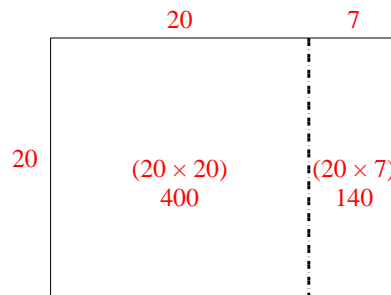
2)  $27 \cdot 20 =$



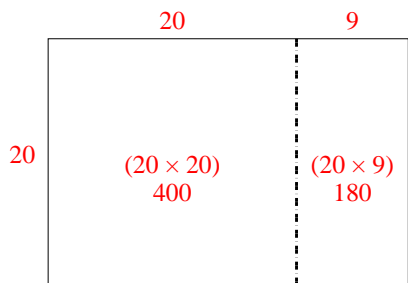
3)  $20 \cdot 23 =$



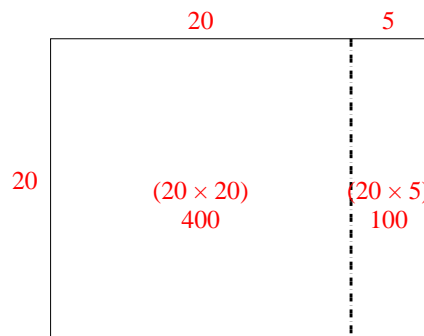
4)  $20 \cdot 27 =$



5)  $20 \cdot 29 =$



6)  $20 \cdot 25 =$



**Antworten**

1. 420
2. 540
3. 460
4. 540
5. 580
6. 500