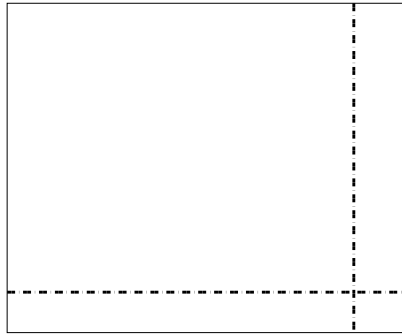





Benutze die vorgegebene Anordnung um jede Aufgabe zu lösen.

Antworten

1) $57 \cdot 69 =$



2) $37 \cdot 22 =$



1. _____

2. _____


3. _____

4. _____


5. _____

6. _____


3) $35 \cdot 48 =$



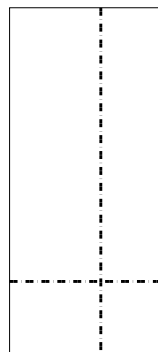
4) $47 \cdot 32 =$



5) $38 \cdot 49 =$



6) $38 \cdot 17 =$

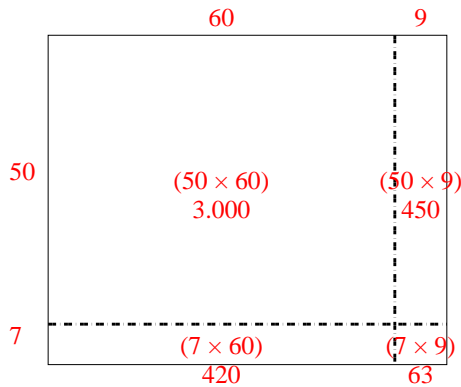




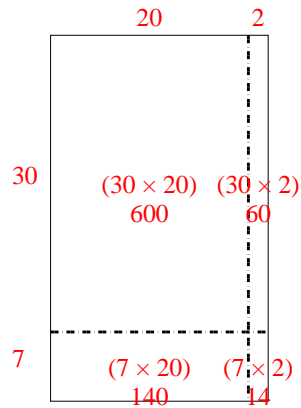
Benutze die vorgegebene Anordnung um jede Aufgabe zu lösen.

Antworten

1) $57 \cdot 69 =$



2) $37 \cdot 22 =$



1. **3.933**

2. **814**

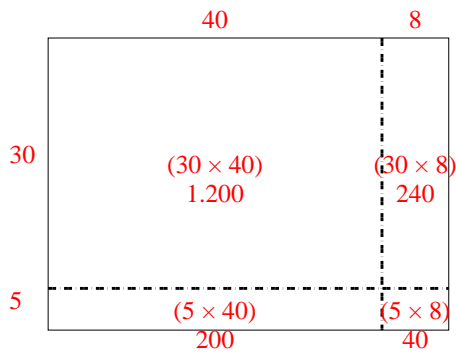
3. **1.680**

4. **1.504**

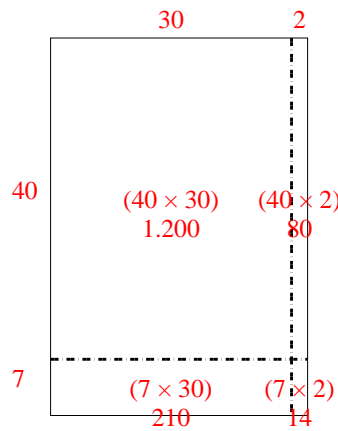
5. **1.862**

6. **646**

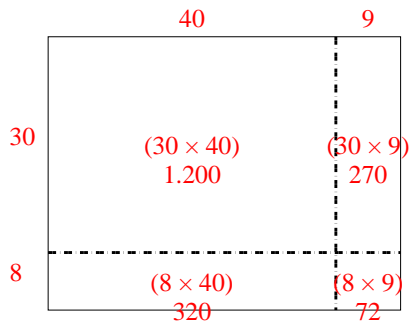
3) $35 \cdot 48 =$



4) $47 \cdot 32 =$



5) $38 \cdot 49 =$



6) $38 \cdot 17 =$

