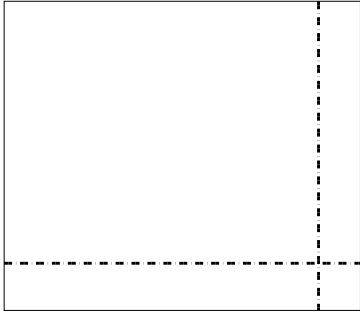


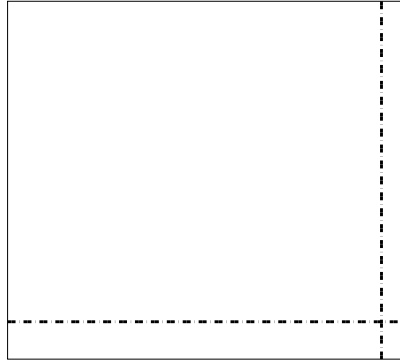


Benutze die vorgegebene Anordnung um jede Aufgabe zu lösen.


1)  $59 \cdot 68 =$



2)  $67 \cdot 75 =$




3)  $53 \cdot 36 =$




4)  $42 \cdot 55 =$



5)  $43 \cdot 66 =$



6)  $44 \cdot 28 =$



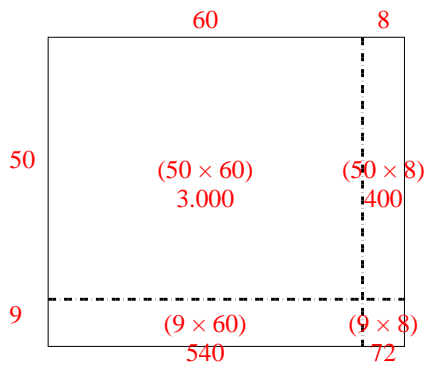
**Antworten**

- 1. \_\_\_\_\_
- 2. \_\_\_\_\_
- 3. \_\_\_\_\_
- 4. \_\_\_\_\_
- 5. \_\_\_\_\_
- 6. \_\_\_\_\_

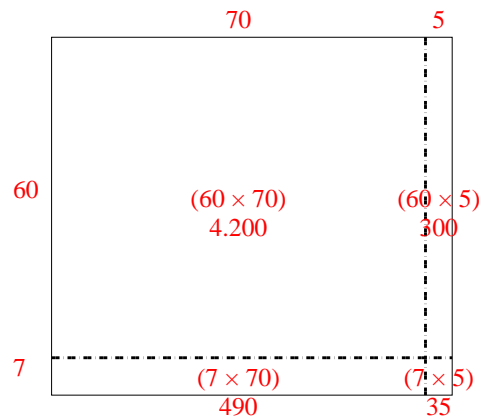


Benutze die vorgegebene Anordnung um jede Aufgabe zu lösen.

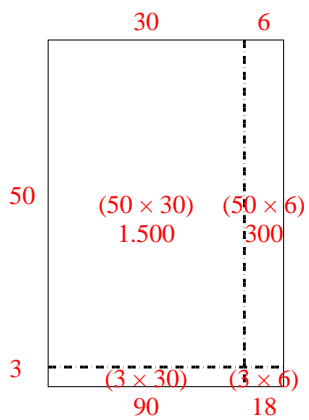
1)  $59 \cdot 68 =$



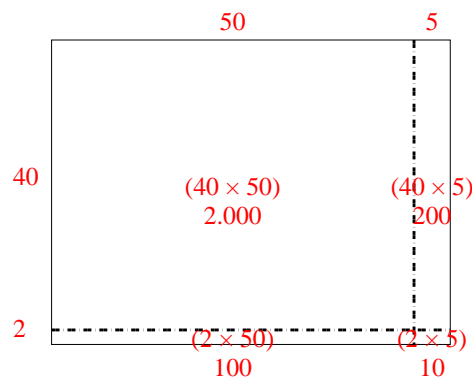
2)  $67 \cdot 75 =$



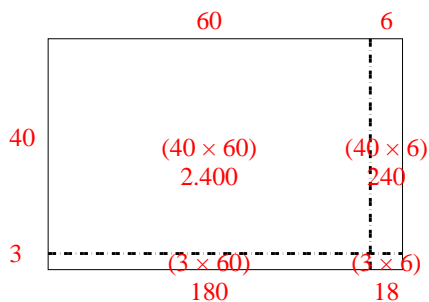
3)  $53 \cdot 36 =$



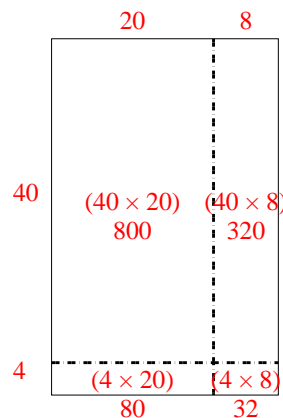
4)  $42 \cdot 55 =$



5)  $43 \cdot 66 =$



6)  $44 \cdot 28 =$


**Antworten**1. **4.012**2. **5.025**3. **1.908**4. **2.310**5. **2.838**6. **1.232**




Benutze die vorgegebene Anordnung um jede Aufgabe zu lösen.

**Antworten**

1)  $63 \cdot 69 =$



2)  $66 \cdot 53 =$



1. \_\_\_\_\_

2. \_\_\_\_\_

3. \_\_\_\_\_

4. \_\_\_\_\_


5. \_\_\_\_\_

6. \_\_\_\_\_


3)  $42 \cdot 53 =$




4)  $53 \cdot 72 =$



5)  $62 \cdot 75 =$



6)  $74 \cdot 88 =$

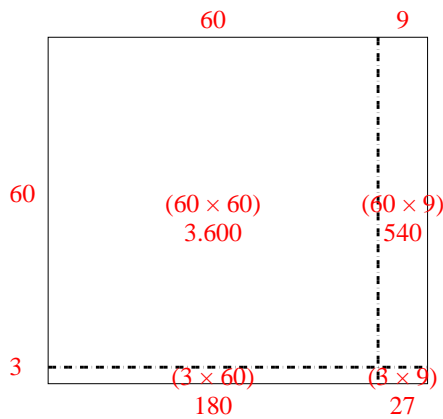




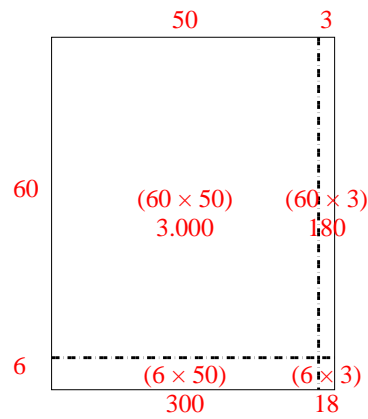
Benutze die vorgegebene Anordnung um jede Aufgabe zu lösen.

**Antworten**

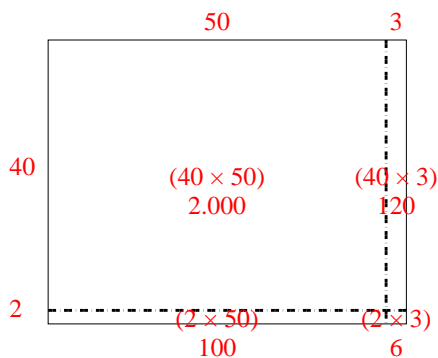
1)  $63 \cdot 69 =$



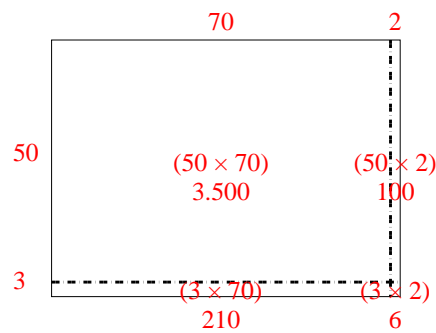
2)  $66 \cdot 53 =$

1. **4.347**2. **3.498**3. **2.226**4. **3.816**5. **4.650**6. **6.512**

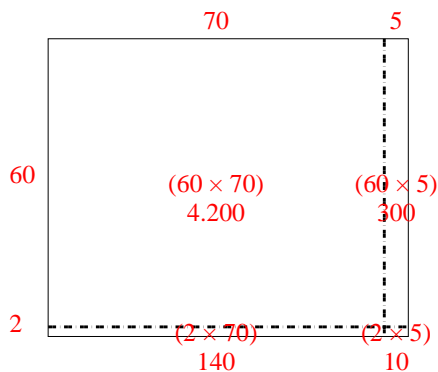
3)  $42 \cdot 53 =$



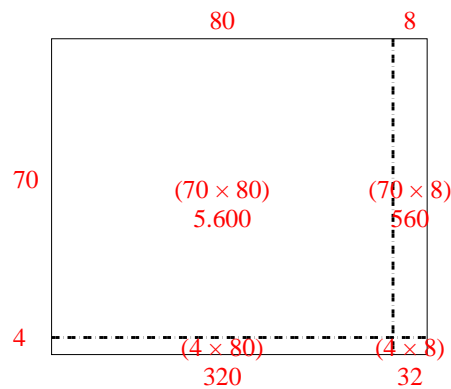
4)  $53 \cdot 72 =$



5)  $62 \cdot 75 =$



6)  $74 \cdot 88 =$





Benutze die vorgegebene Anordnung um jede Aufgabe zu lösen.

**Antworten**

1)  $52 \cdot 58 =$

2)  $36 \cdot 33 =$

1. \_\_\_\_\_



2. \_\_\_\_\_

3. \_\_\_\_\_

4. \_\_\_\_\_



5. \_\_\_\_\_

6. \_\_\_\_\_




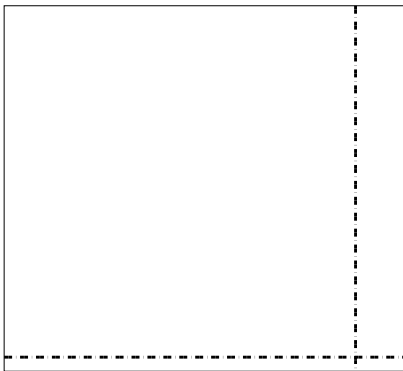
3)  $33 \cdot 46 =$

4)  $45 \cdot 68 =$



5)  $52 \cdot 57 =$

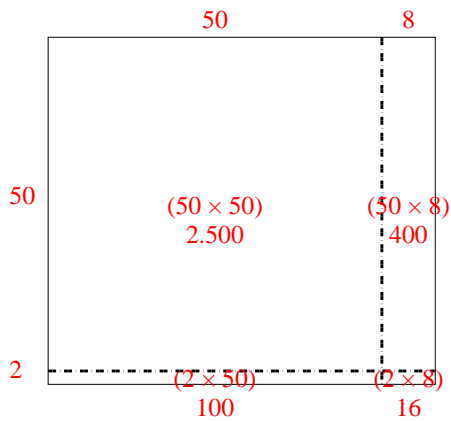
6)  $42 \cdot 37 =$



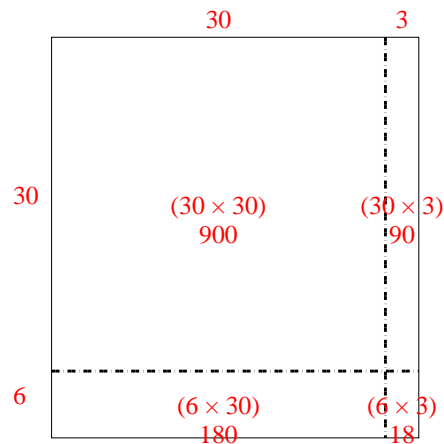


Benutze die vorgegebene Anordnung um jede Aufgabe zu lösen.

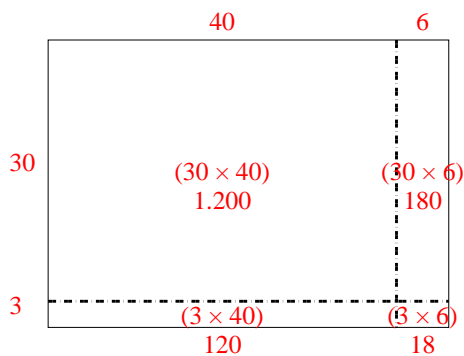
1)  $52 \cdot 58 =$



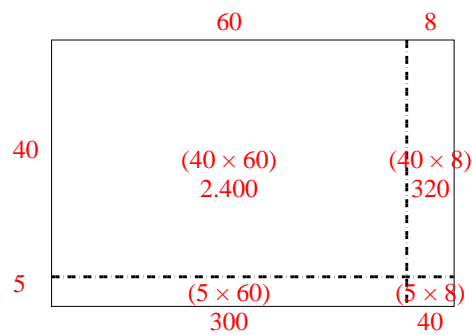
2)  $36 \cdot 33 =$



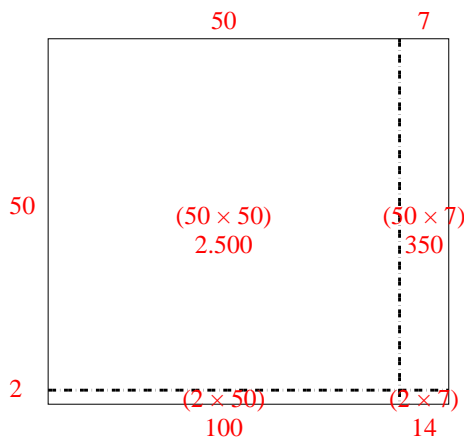
3)  $33 \cdot 46 =$



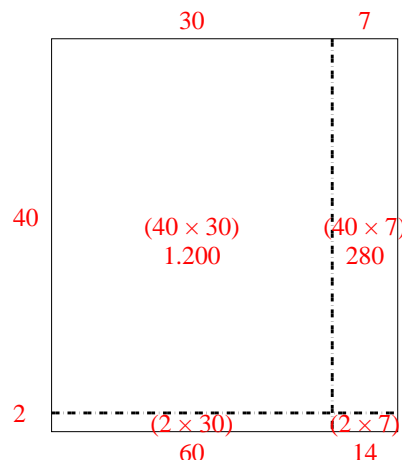
4)  $45 \cdot 68 =$



5)  $52 \cdot 57 =$




6)  $42 \cdot 37 =$

**Antworten**1. **3.016**2. **1.188**3. **1.518**4. **3.060**5. **2.964**6. **1.554**




Benutze die vorgegebene Anordnung um jede Aufgabe zu lösen.

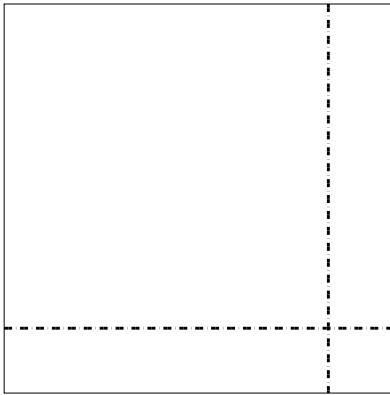
1)  $43 \cdot 28 =$



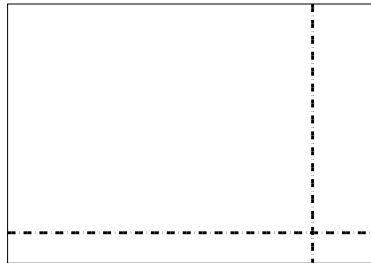
2)  $37 \cdot 18 =$




3)  $36 \cdot 36 =$




4)  $34 \cdot 49 =$



5)  $46 \cdot 54 =$



6)  $44 \cdot 52 =$



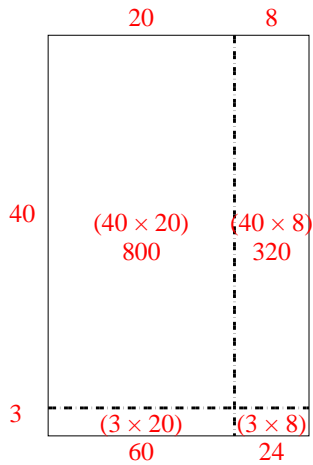
**Antworten**

- 1. \_\_\_\_\_
- 2. \_\_\_\_\_
- 3. \_\_\_\_\_
- 4. \_\_\_\_\_
- 5. \_\_\_\_\_
- 6. \_\_\_\_\_

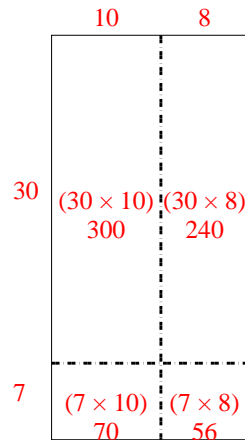


Benutze die vorgegebene Anordnung um jede Aufgabe zu lösen.

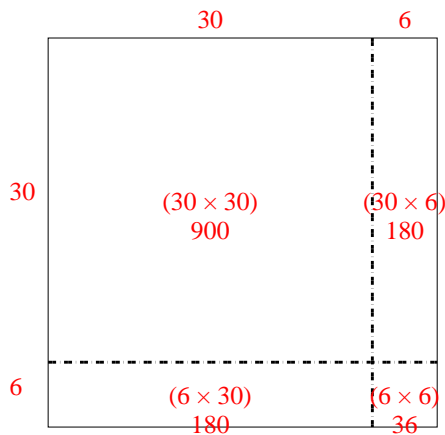
1)  $43 \cdot 28 =$



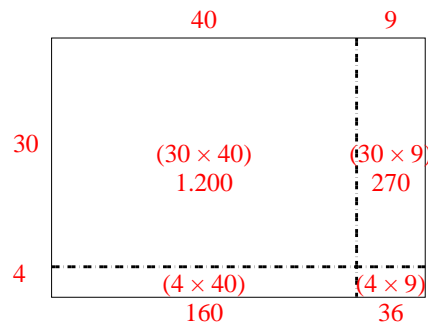
2)  $37 \cdot 18 =$



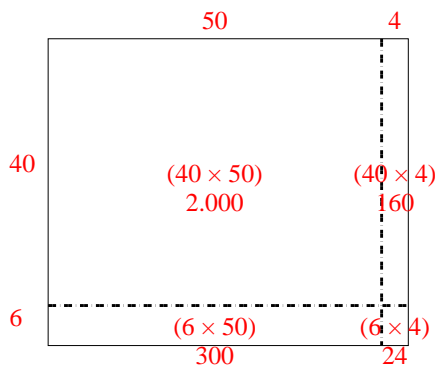
3)  $36 \cdot 36 =$



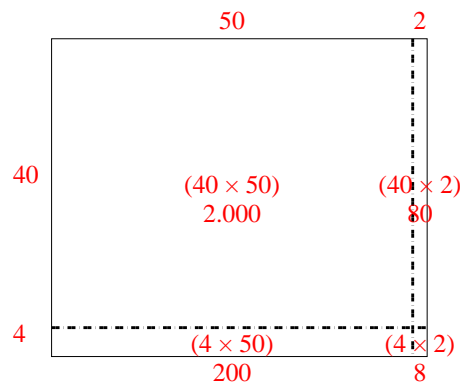
4)  $34 \cdot 49 =$



5)  $46 \cdot 54 =$



6)  $44 \cdot 52 =$


**Antworten**1. **1.204**2. **666**3. **1.296**4. **1.666**5. **2.484**6. **2.288**






Benutze die vorgegebene Anordnung um jede Aufgabe zu lösen.


1)  $62 \cdot 69 =$



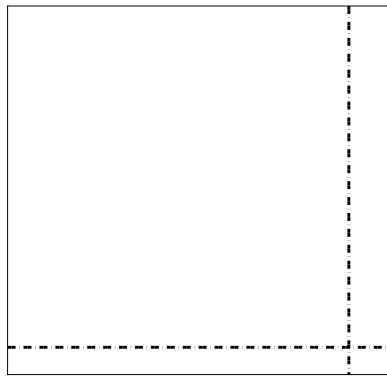
2)  $53 \cdot 39 =$



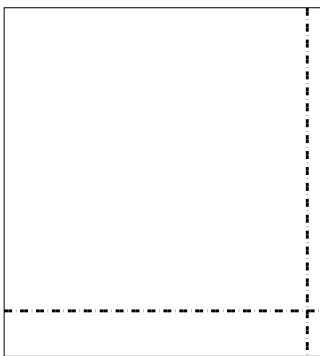
3)  $57 \cdot 66 =$




4)  $54 \cdot 57 =$



5)  $46 \cdot 42 =$



6)  $34 \cdot 27 =$



**Antworten**

1. \_\_\_\_\_

2. \_\_\_\_\_

3. \_\_\_\_\_

4. \_\_\_\_\_

5. \_\_\_\_\_

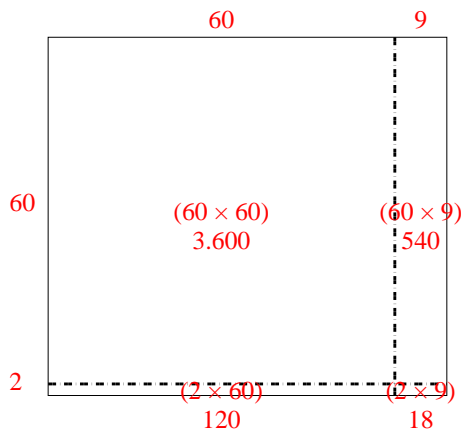
6. \_\_\_\_\_



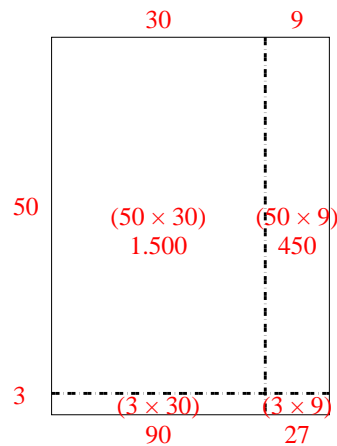
Benutze die vorgegebene Anordnung um jede Aufgabe zu lösen.

**Antworten**

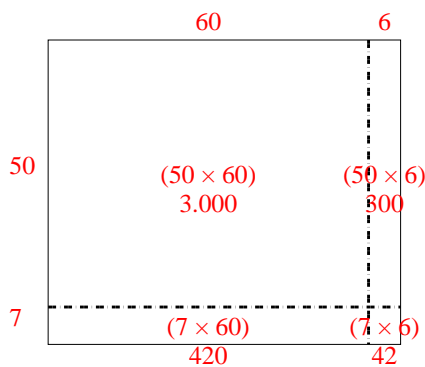
1)  $62 \cdot 69 =$



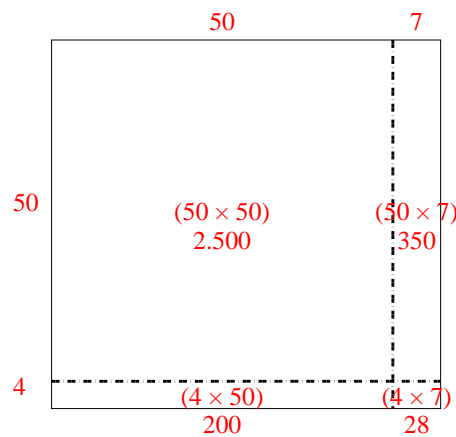
2)  $53 \cdot 39 =$

1. **4.278**2. **2.067**3. **3.762**4. **3.078**5. **1.932**6. **918**

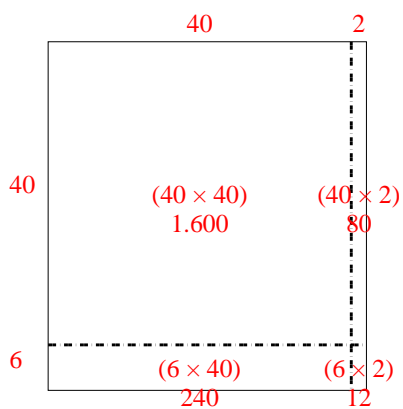
3)  $57 \cdot 66 =$



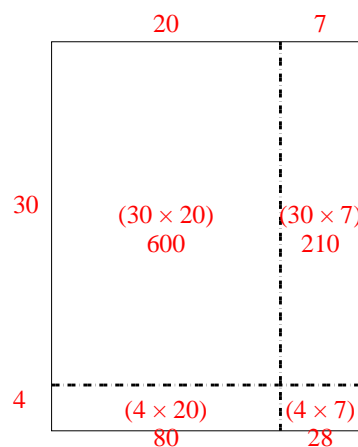
4)  $54 \cdot 57 =$



5)  $46 \cdot 42 =$



6)  $34 \cdot 27 =$





Benutze die vorgegebene Anordnung um jede Aufgabe zu lösen.

**Antworten**

1)  $38 \cdot 22 =$

2)  $36 \cdot 44 =$

1. \_\_\_\_\_



2. \_\_\_\_\_

3. \_\_\_\_\_

4. \_\_\_\_\_



5. \_\_\_\_\_

6. \_\_\_\_\_



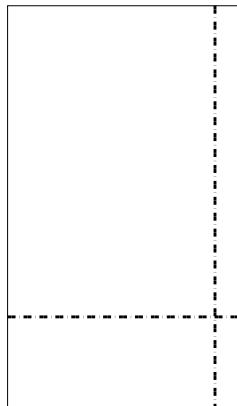

3)  $48 \cdot 45 =$

4)  $49 \cdot 54 =$



5)  $43 \cdot 29 =$

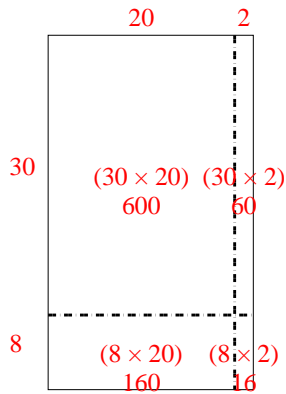
6)  $39 \cdot 23 =$



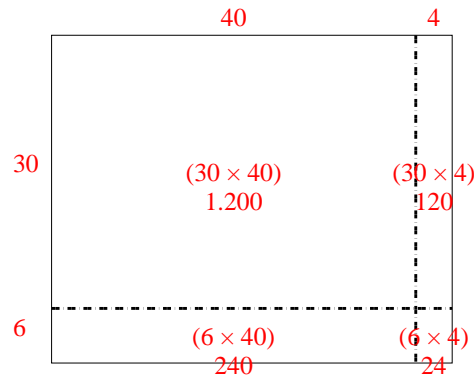


Benutze die vorgegebene Anordnung um jede Aufgabe zu lösen.

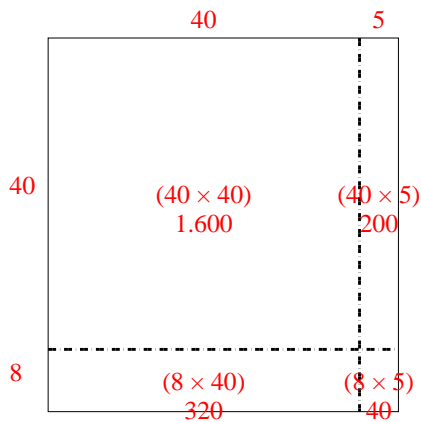
1)  $38 \cdot 22 =$



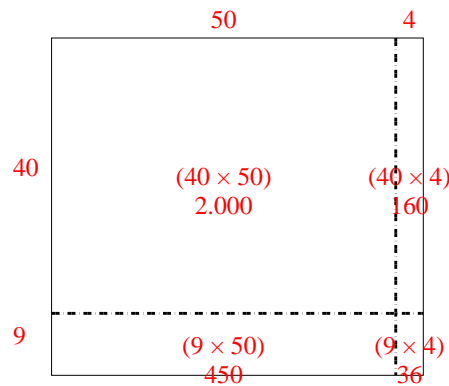
2)  $36 \cdot 44 =$



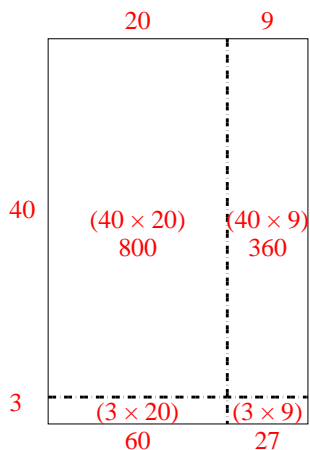
3)  $48 \cdot 45 =$



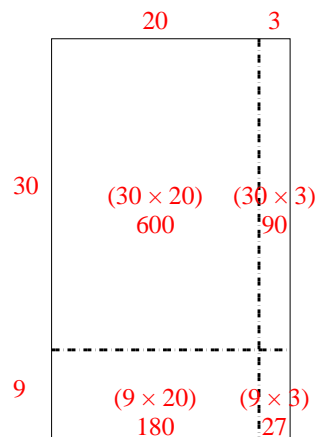
4)  $49 \cdot 54 =$



5)  $43 \cdot 29 =$



6)  $39 \cdot 23 =$

**Antworten**1. **836**2. **1.584**3. **2.160**4. **2.646**5. **1.247**6. **897**



Benutze die vorgegebene Anordnung um jede Aufgabe zu lösen.

**Antworten**

1)  $36 \cdot 55 =$

2)  $42 \cdot 26 =$

1. \_\_\_\_\_



2. \_\_\_\_\_

3. \_\_\_\_\_

4. \_\_\_\_\_


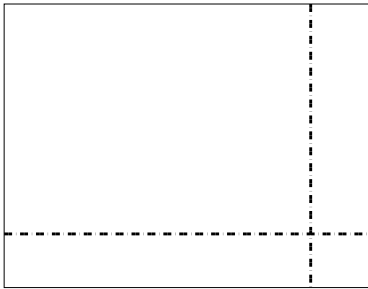
5. \_\_\_\_\_

6. \_\_\_\_\_





3)  $37 \cdot 48 =$

4)  $44 \cdot 59 =$



5)  $46 \cdot 39 =$

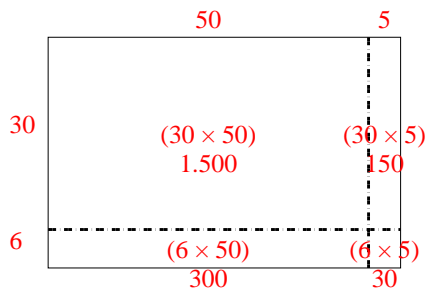
6)  $47 \cdot 59 =$



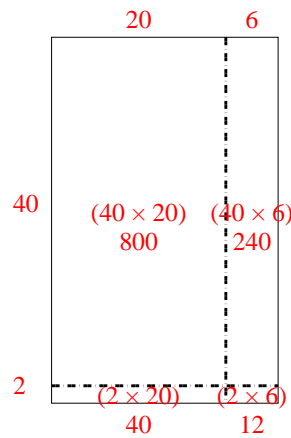


Benutze die vorgegebene Anordnung um jede Aufgabe zu lösen.

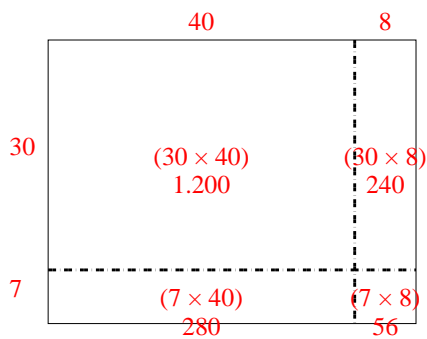
1)  $36 \cdot 55 =$



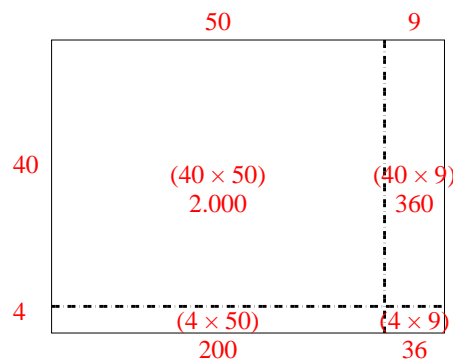
2)  $42 \cdot 26 =$



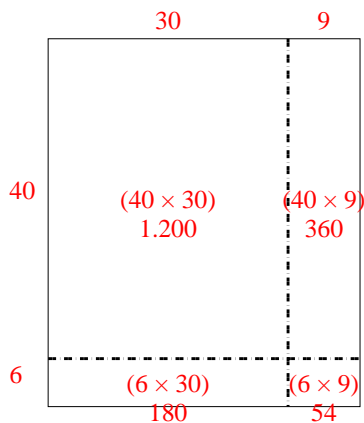
3)  $37 \cdot 48 =$



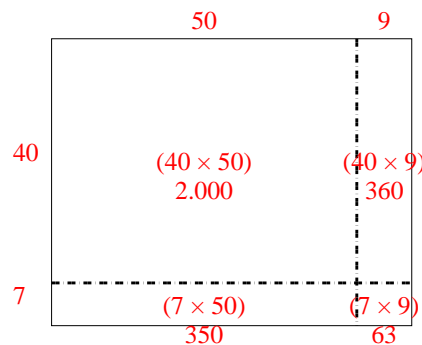
4)  $44 \cdot 59 =$



5)  $46 \cdot 39 =$



6)  $47 \cdot 59 =$

**Antworten**1. **1.980**2. **1.092**3. **1.776**4. **2.596**5. **1.794**6. **2.773**



Benutze die vorgegebene Anordnung um jede Aufgabe zu lösen.

**Antworten**

1)  $48 \cdot 23 =$

2)  $45 \cdot 44 =$

1. \_\_\_\_\_



2. \_\_\_\_\_

3. \_\_\_\_\_

4. \_\_\_\_\_


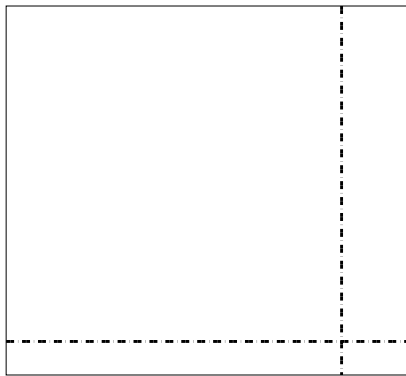
5. \_\_\_\_\_

6. \_\_\_\_\_




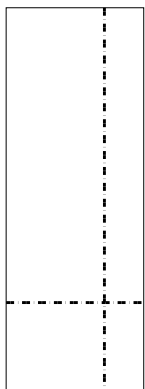
3)  $33 \cdot 36 =$

4)  $37 \cdot 24 =$



5)  $39 \cdot 14 =$

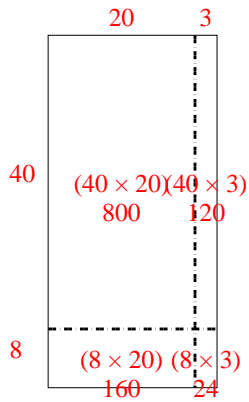
6)  $35 \cdot 12 =$



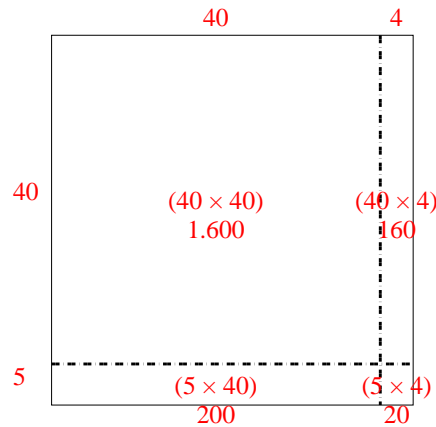


Benutze die vorgegebene Anordnung um jede Aufgabe zu lösen.

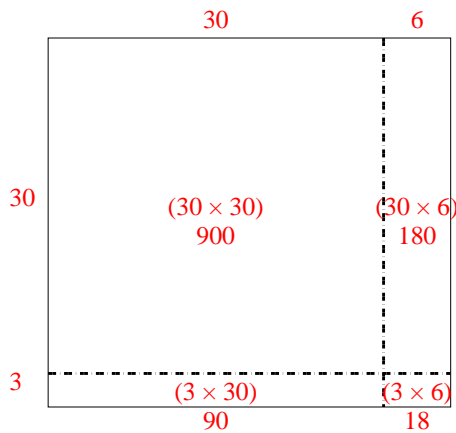
1)  $48 \cdot 23 =$



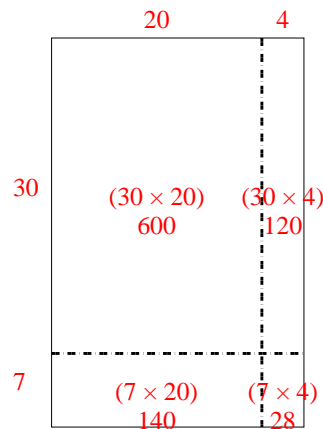
2)  $45 \cdot 44 =$



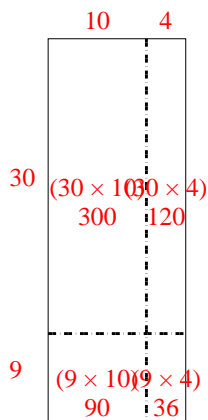
3)  $33 \cdot 36 =$



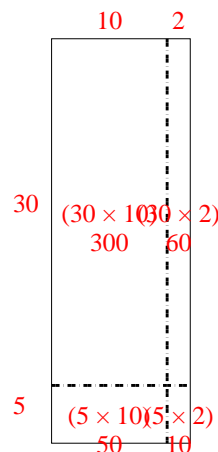
4)  $37 \cdot 24 =$



5)  $39 \cdot 14 =$



6)  $35 \cdot 12 =$


**Antworten**1. **1.104**2. **1.980**3. **1.188**4. **888**5. **546**6. **420**






Benutze die vorgegebene Anordnung um jede Aufgabe zu lösen.


1)  $43 \cdot 36 =$




2)  $37 \cdot 43 =$




3)  $33 \cdot 22 =$




4)  $34 \cdot 45 =$



5)  $39 \cdot 46 =$



6)  $36 \cdot 35 =$

**Antworten**

1. \_\_\_\_\_

2. \_\_\_\_\_

3. \_\_\_\_\_

4. \_\_\_\_\_

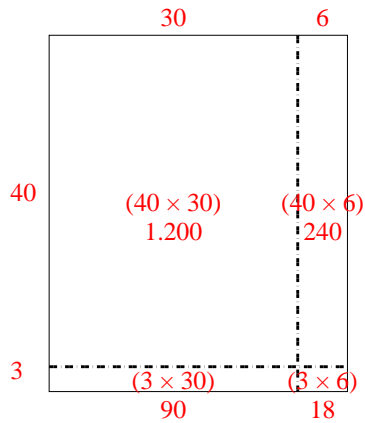
5. \_\_\_\_\_

6. \_\_\_\_\_

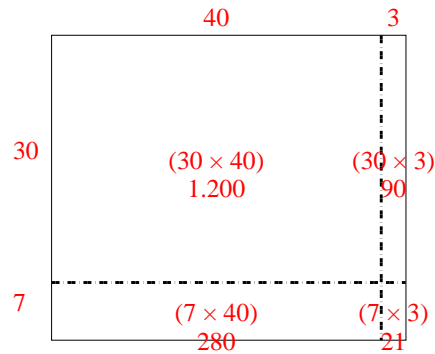


Benutze die vorgegebene Anordnung um jede Aufgabe zu lösen.

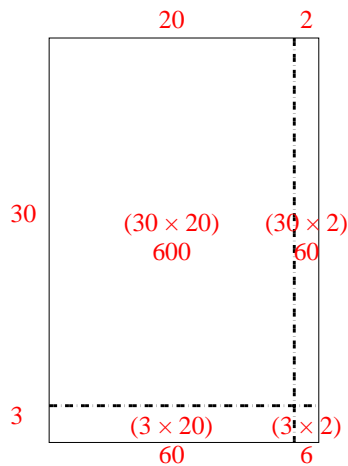
1)  $43 \cdot 36 =$



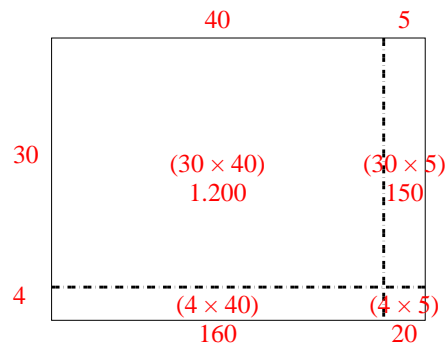
2)  $37 \cdot 43 =$



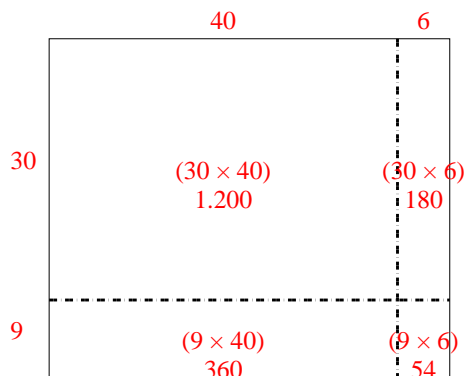
3)  $33 \cdot 22 =$



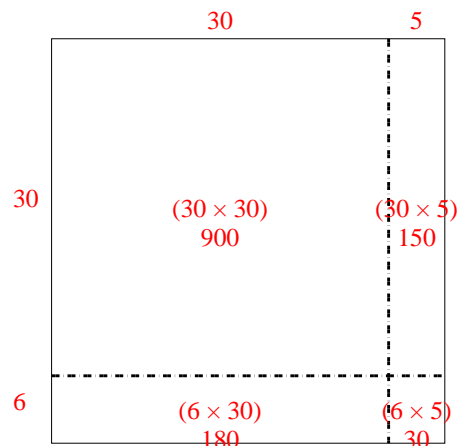
4)  $34 \cdot 45 =$



5)  $39 \cdot 46 =$




6)  $36 \cdot 35 =$

**Antworten**1. **1.548**2. **1.591**3. **726**4. **1.530**5. **1.794**6. **1.260**




Benutze die vorgegebene Anordnung um jede Aufgabe zu lösen.


1)  $45 \cdot 59 =$




2)  $49 \cdot 59 =$




3)  $39 \cdot 16 =$




4)  $37 \cdot 13 =$



5)  $37 \cdot 48 =$



6)  $37 \cdot 14 =$



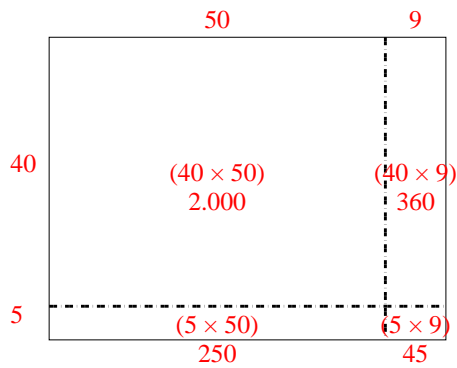
**Antworten**

- 1. \_\_\_\_\_
- 2. \_\_\_\_\_
- 3. \_\_\_\_\_
- 4. \_\_\_\_\_
- 5. \_\_\_\_\_
- 6. \_\_\_\_\_

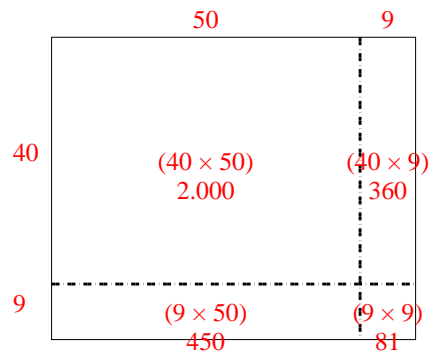


Benutze die vorgegebene Anordnung um jede Aufgabe zu lösen.

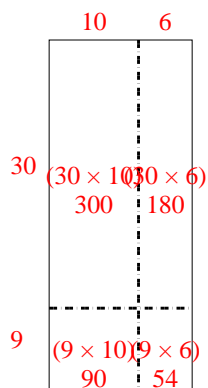
1)  $45 \cdot 59 =$



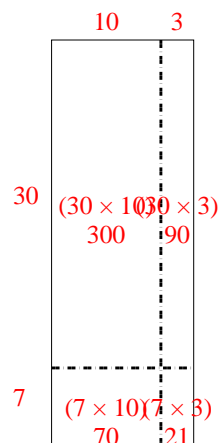
2)  $49 \cdot 59 =$



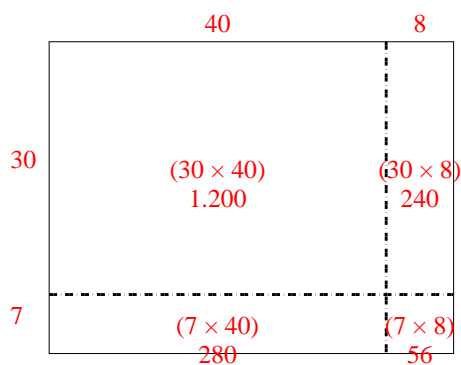
3)  $39 \cdot 16 =$



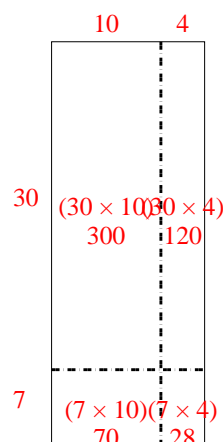
4)  $37 \cdot 13 =$



5)  $37 \cdot 48 =$



6)  $37 \cdot 14 =$

**Antworten**1. **2.655**2. **2.891**3. **624**4. **481**5. **1.776**6. **518**