





Benutze die vorgegebene Anordnung um jede Aufgabe zu lösen.


1) $43 \cdot 36 =$




2) $37 \cdot 43 =$




3) $33 \cdot 22 =$




4) $34 \cdot 45 =$



5) $39 \cdot 46 =$



6) $36 \cdot 35 =$

**Antworten**

1. _____

2. _____

3. _____

4. _____

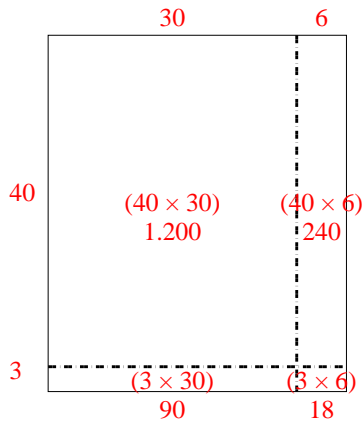
5. _____

6. _____

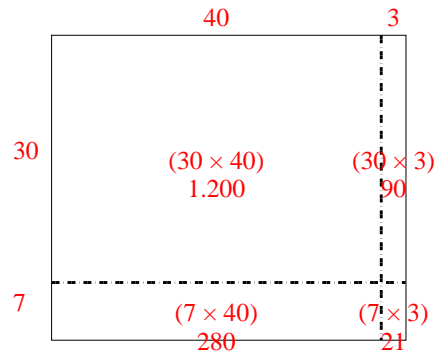


Benutze die vorgegebene Anordnung um jede Aufgabe zu lösen.

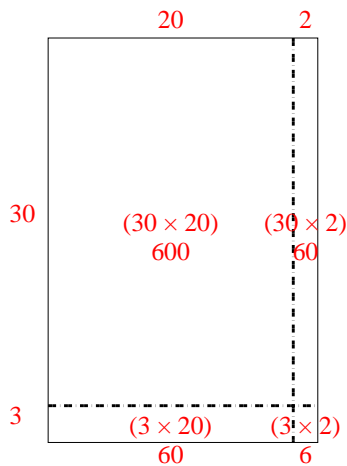
1) $43 \cdot 36 =$



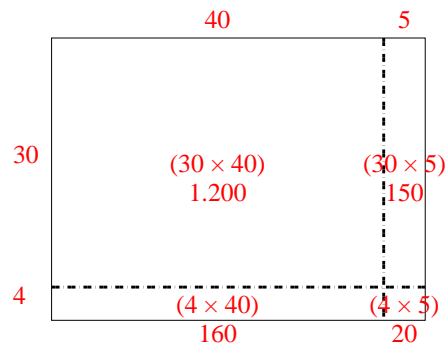
2) $37 \cdot 43 =$



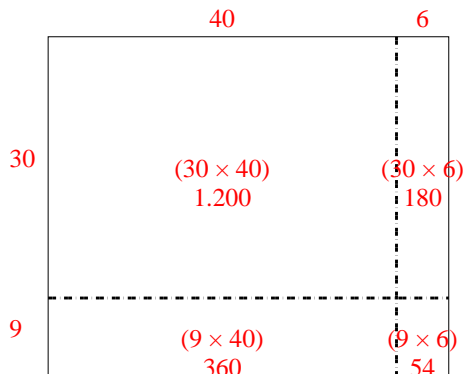
3) $33 \cdot 22 =$



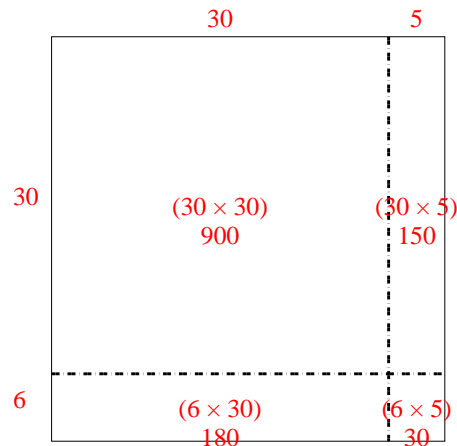
4) $34 \cdot 45 =$



5) $39 \cdot 46 =$



6) $36 \cdot 35 =$

**Antworten**1. **1.548**2. **1.591**3. **726**4. **1.530**5. **1.794**6. **1.260**