





Benutze die vorgegebene Anordnung um jede Aufgabe zu lösen.

Antworten

1) $48 \cdot 23 =$



2) $45 \cdot 44 =$



1. _____

2. _____

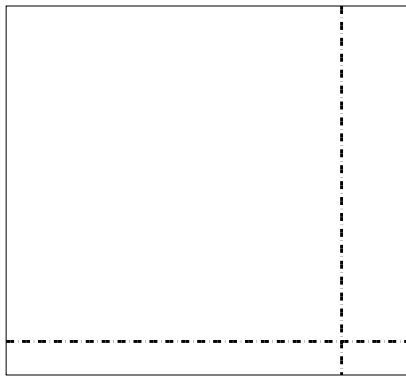
3. _____

4. _____


5. _____

6. _____

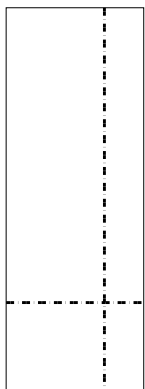
3) $33 \cdot 36 =$




4) $37 \cdot 24 =$



5) $39 \cdot 14 =$



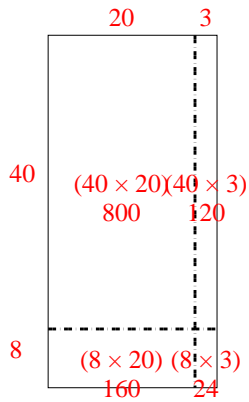
6) $35 \cdot 12 =$



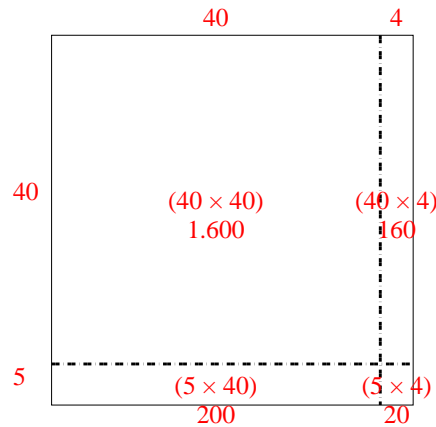


Benutze die vorgegebene Anordnung um jede Aufgabe zu lösen.

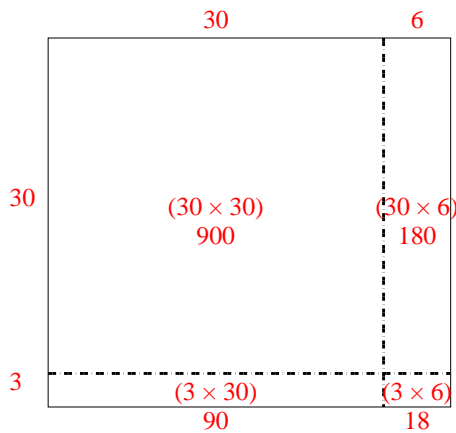
1) $48 \cdot 23 =$



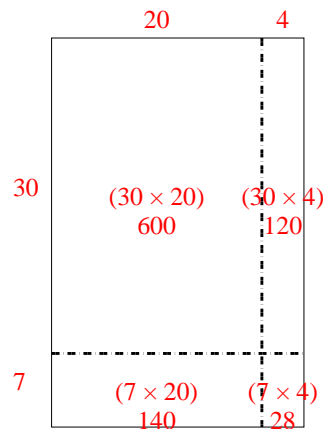
2) $45 \cdot 44 =$



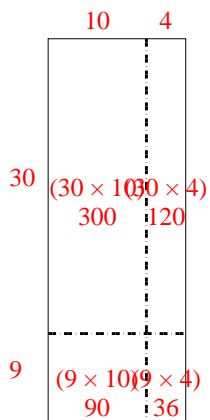
3) $33 \cdot 36 =$



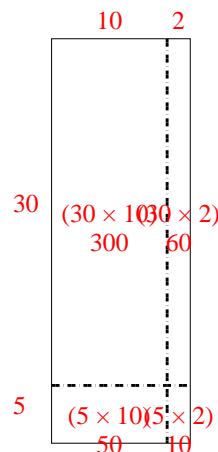
4) $37 \cdot 24 =$



5) $39 \cdot 14 =$



6) $35 \cdot 12 =$

**Antworten**1. **1.104**2. **1.980**3. **1.188**4. **888**5. **546**6. **420**