





Benutze die vorgegebene Anordnung um jede Aufgabe zu lösen.

Antworten

1) $36 \cdot 55 =$



2) $42 \cdot 26 =$



1. _____

2. _____


3. _____

4. _____


5. _____

6. _____


3) $37 \cdot 48 =$




4) $44 \cdot 59 =$



5) $46 \cdot 39 =$



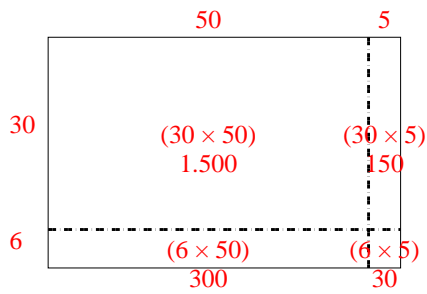
6) $47 \cdot 59 =$



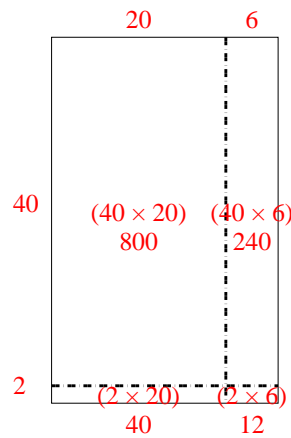


Benutze die vorgegebene Anordnung um jede Aufgabe zu lösen.

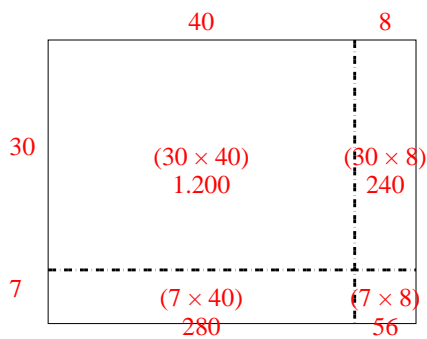
1) $36 \cdot 55 =$



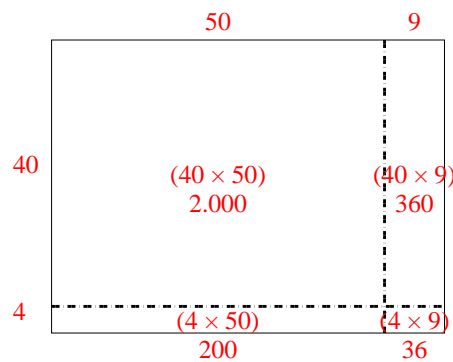
2) $42 \cdot 26 =$



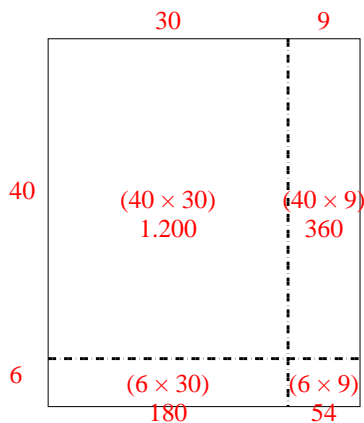
3) $37 \cdot 48 =$



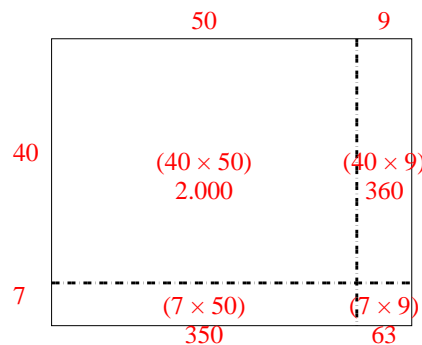
4) $44 \cdot 59 =$



5) $46 \cdot 39 =$



6) $47 \cdot 59 =$

**Antworten**1. **1.980**2. **1.092**3. **1.776**4. **2.596**5. **1.794**6. **2.773**