



Benutze die vorgegebene Anordnung um jede Aufgabe zu lösen.

**Antworten**

1)  $62 \cdot 69 =$

2)  $53 \cdot 39 =$

1. \_\_\_\_\_


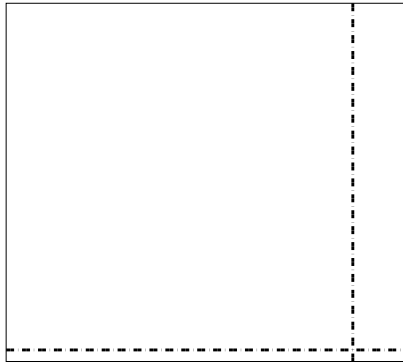
2. \_\_\_\_\_

3. \_\_\_\_\_

4. \_\_\_\_\_

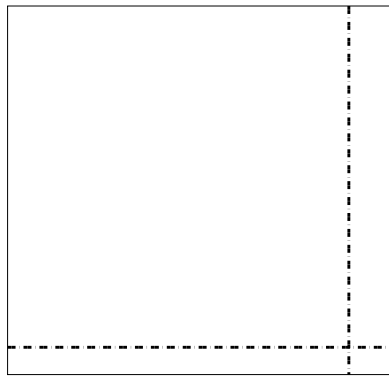
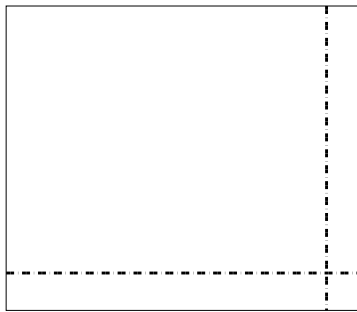
5. \_\_\_\_\_

6. \_\_\_\_\_





3)  $57 \cdot 66 =$

4)  $54 \cdot 57 =$



5)  $46 \cdot 42 =$

6)  $34 \cdot 27 =$

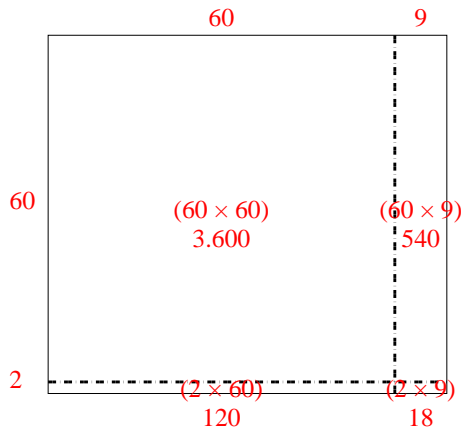




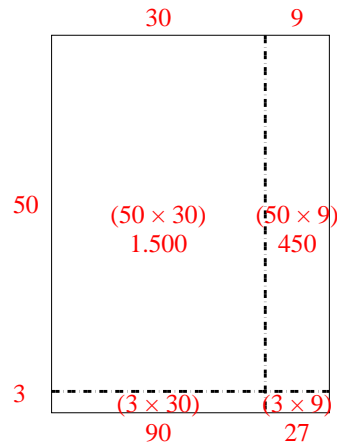
Benutze die vorgegebene Anordnung um jede Aufgabe zu lösen.

**Antworten**

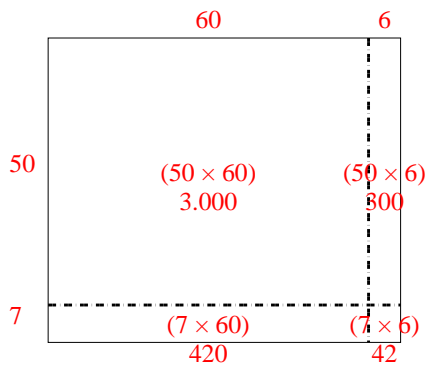
1)  $62 \cdot 69 =$



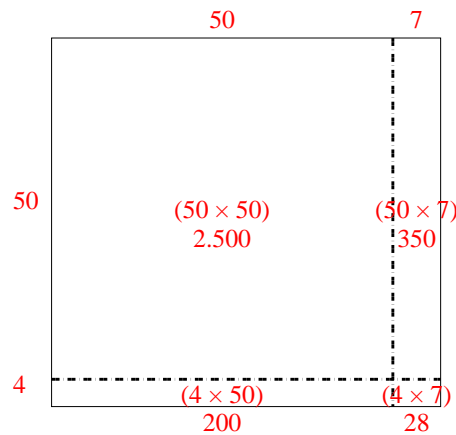
2)  $53 \cdot 39 =$

1. **4.278**2. **2.067**3. **3.762**4. **3.078**5. **1.932**6. **918**

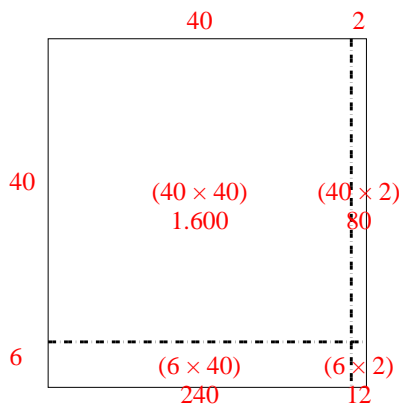
3)  $57 \cdot 66 =$



4)  $54 \cdot 57 =$



5)  $46 \cdot 42 =$



6)  $34 \cdot 27 =$

