





Benutze die vorgegebene Anordnung um jede Aufgabe zu lösen.

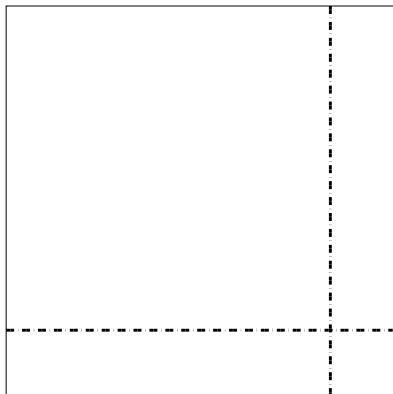
1)  $43 \cdot 28 =$



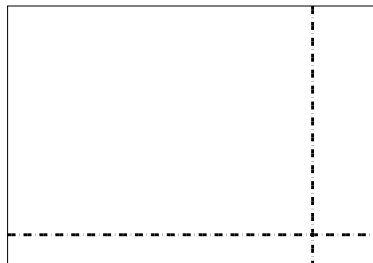
2)  $37 \cdot 18 =$




3)  $36 \cdot 36 =$




4)  $34 \cdot 49 =$



5)  $46 \cdot 54 =$



6)  $44 \cdot 52 =$

**Antworten**

1. \_\_\_\_\_

2. \_\_\_\_\_

3. \_\_\_\_\_

4. \_\_\_\_\_

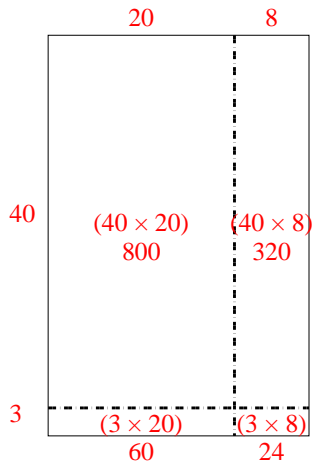
5. \_\_\_\_\_

6. \_\_\_\_\_

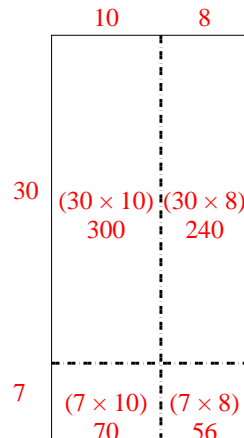


Benutze die vorgegebene Anordnung um jede Aufgabe zu lösen.

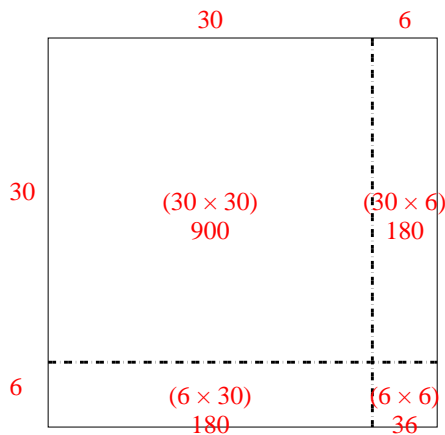
1)  $43 \cdot 28 =$



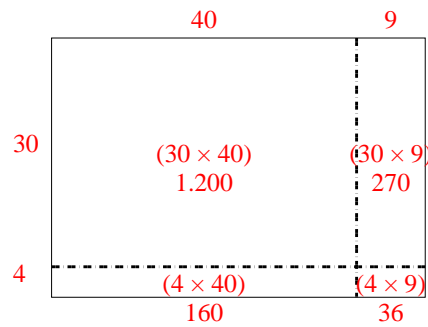
2)  $37 \cdot 18 =$



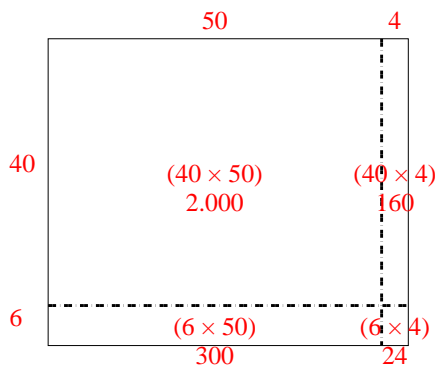
3)  $36 \cdot 36 =$



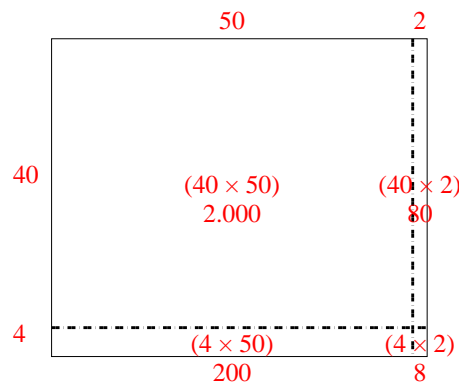
4)  $34 \cdot 49 =$



5)  $46 \cdot 54 =$



6)  $44 \cdot 52 =$

**Antworten**1. **1.204**2. **666**3. **1.296**4. **1.666**5. **2.484**6. **2.288**