



Benutze die vorgegebene Anordnung um jede Aufgabe zu lösen.

**Antworten**

1)  $52 \cdot 58 =$

2)  $36 \cdot 33 =$

1. \_\_\_\_\_



2. \_\_\_\_\_

3. \_\_\_\_\_

4. \_\_\_\_\_



5. \_\_\_\_\_

6. \_\_\_\_\_




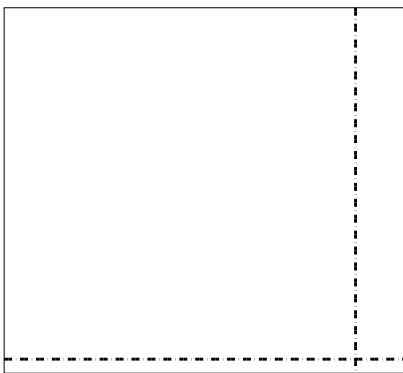
3)  $33 \cdot 46 =$

4)  $45 \cdot 68 =$



5)  $52 \cdot 57 =$

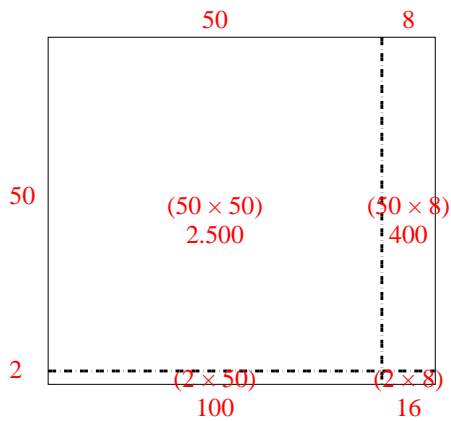
6)  $42 \cdot 37 =$



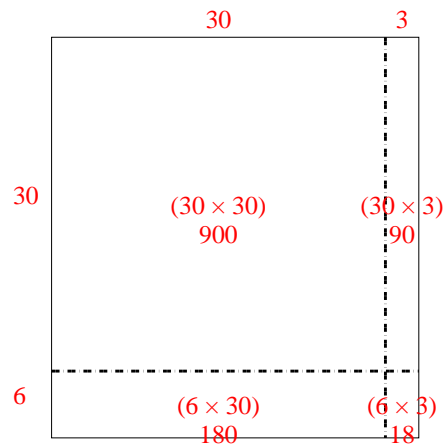


Benutze die vorgegebene Anordnung um jede Aufgabe zu lösen.

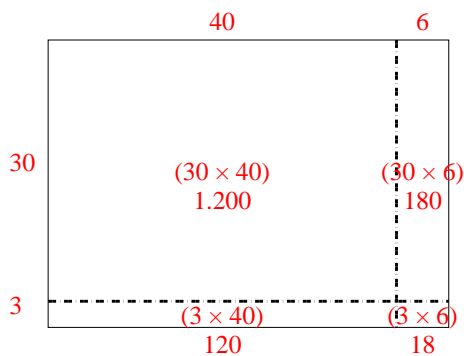
1)  $52 \cdot 58 =$



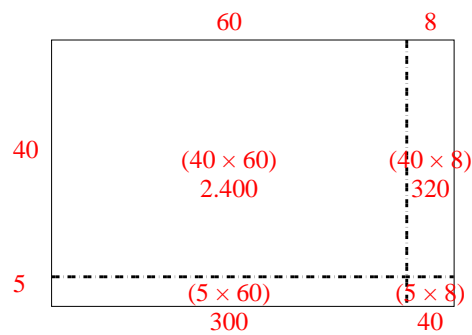
2)  $36 \cdot 33 =$



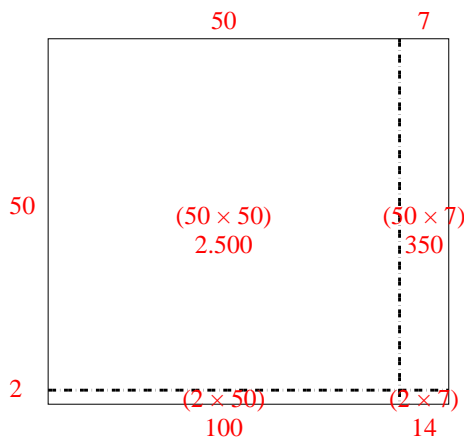
3)  $33 \cdot 46 =$



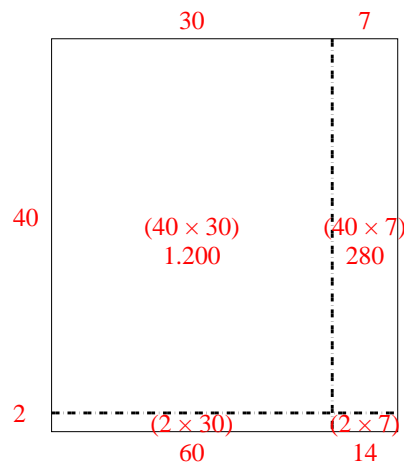
4)  $45 \cdot 68 =$



5)  $52 \cdot 57 =$



6)  $42 \cdot 37 =$

**Antworten**1. **3.016**2. **1.188**3. **1.518**4. **3.060**5. **2.964**6. **1.554**