





Benutze die vorgegebene Anordnung um jede Aufgabe zu lösen.

Antworten

1) $63 \cdot 69 =$



2) $66 \cdot 53 =$



1. _____

2. _____


3. _____

4. _____


5. _____

6. _____


3) $42 \cdot 53 =$




4) $53 \cdot 72 =$



5) $62 \cdot 75 =$



6) $74 \cdot 88 =$

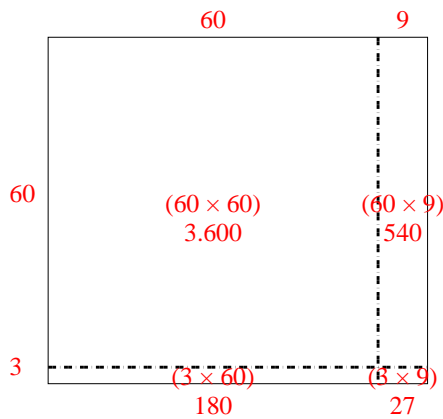




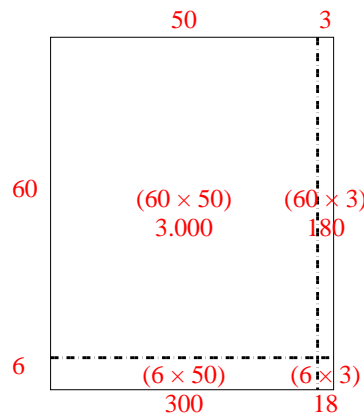
Benutze die vorgegebene Anordnung um jede Aufgabe zu lösen.

Antworten

1) $63 \cdot 69 =$



2) $66 \cdot 53 =$



1. **4.347**

2. **3.498**

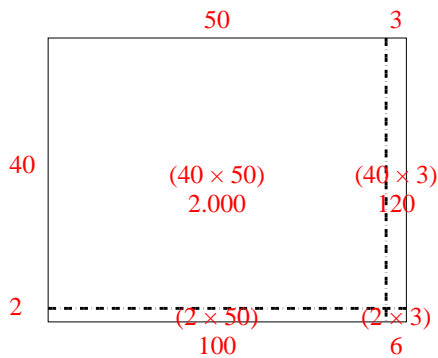
3. **2.226**

4. **3.816**

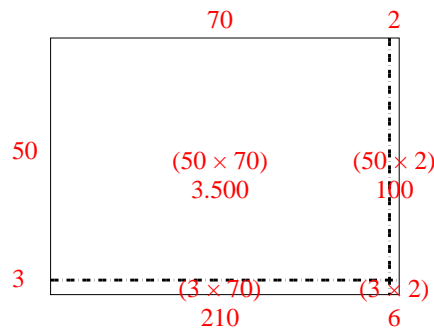
5. **4.650**

6. **6.512**

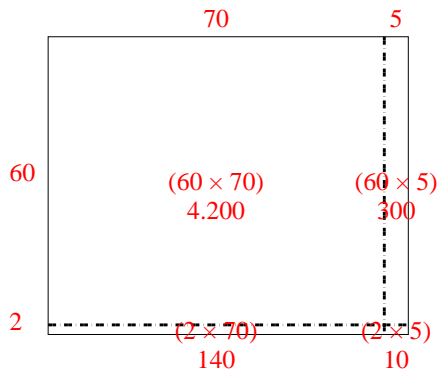
3) $42 \cdot 53 =$



4) $53 \cdot 72 =$



5) $62 \cdot 75 =$



6) $74 \cdot 88 =$

