





Benutze die vorgegebene Anordnung um jede Aufgabe zu lösen.


1) $45 \cdot 59 =$




2) $49 \cdot 59 =$




3) $39 \cdot 16 =$




4) $37 \cdot 13 =$



5) $37 \cdot 48 =$



6) $37 \cdot 14 =$



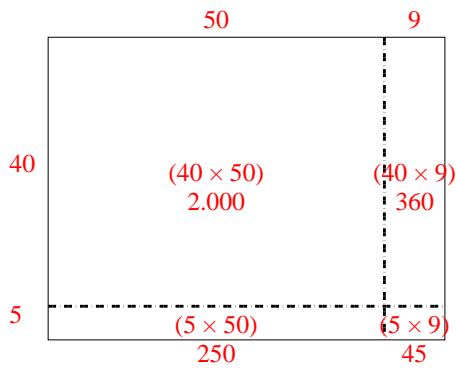
Antworten

- 1. _____
- 2. _____
- 3. _____
- 4. _____
- 5. _____
- 6. _____

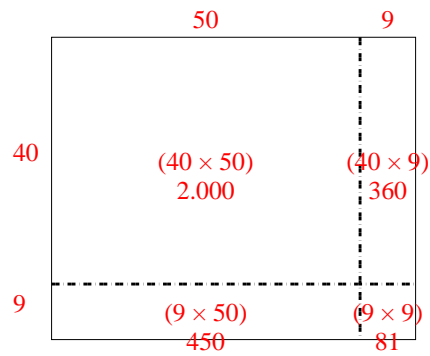


Benutze die vorgegebene Anordnung um jede Aufgabe zu lösen.

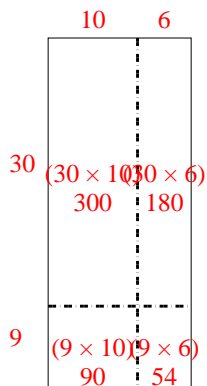
1) $45 \cdot 59 =$



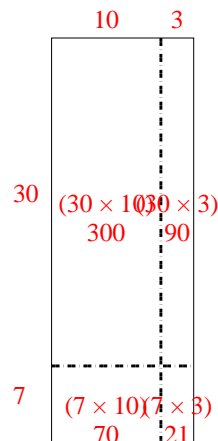
2) $49 \cdot 59 =$



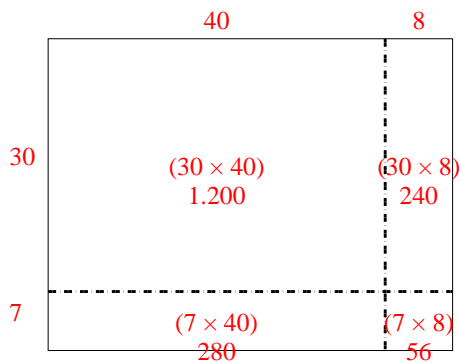
3) $39 \cdot 16 =$



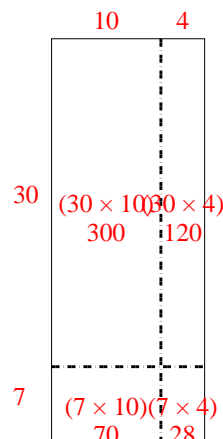
4) $37 \cdot 13 =$



5) $37 \cdot 48 =$



6) $37 \cdot 14 =$

**Antworten**1. **2.655**2. **2.891**3. **624**4. **481**5. **1.776**6. **518**