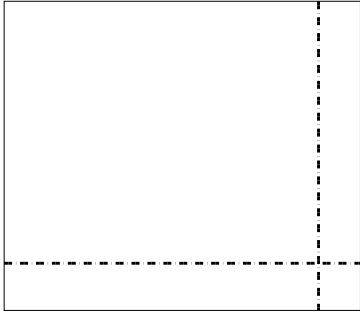


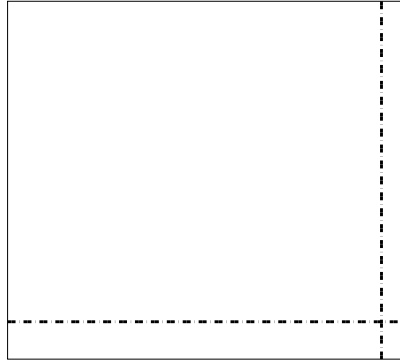


Benutze die vorgegebene Anordnung um jede Aufgabe zu lösen.


1)  $59 \cdot 68 =$



2)  $67 \cdot 75 =$




3)  $53 \cdot 36 =$




4)  $42 \cdot 55 =$



5)  $43 \cdot 66 =$



6)  $44 \cdot 28 =$



**Antworten**

1. \_\_\_\_\_

2. \_\_\_\_\_

3. \_\_\_\_\_

4. \_\_\_\_\_

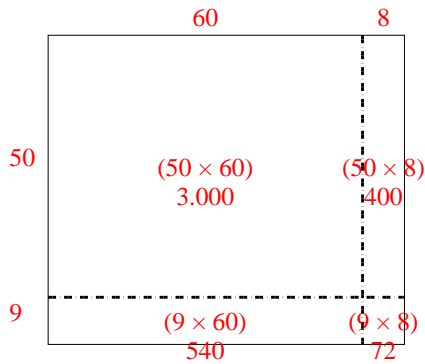
5. \_\_\_\_\_

6. \_\_\_\_\_

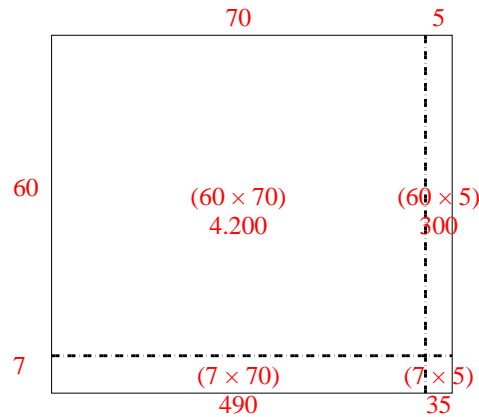


Benutze die vorgegebene Anordnung um jede Aufgabe zu lösen.

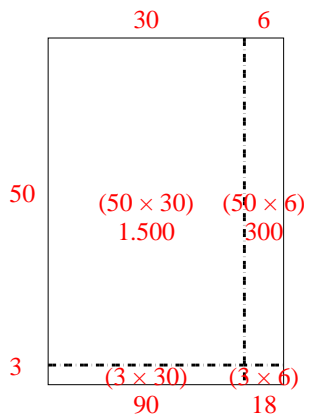
1)  $59 \cdot 68 =$



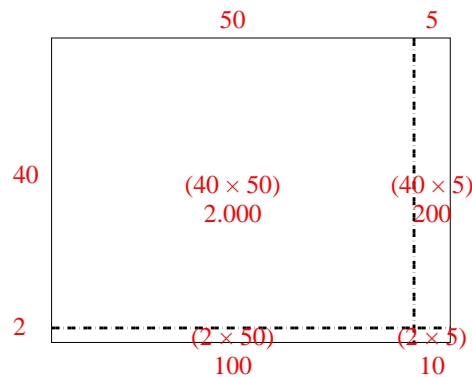
2)  $67 \cdot 75 =$



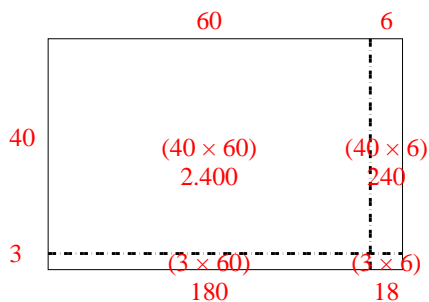
3)  $53 \cdot 36 =$



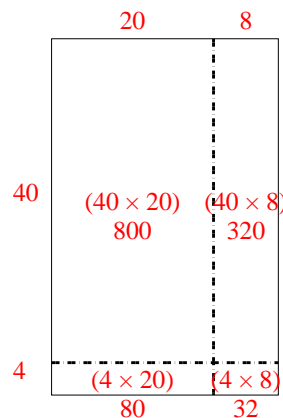
4)  $42 \cdot 55 =$



5)  $43 \cdot 66 =$



6)  $44 \cdot 28 =$

**Antworten**1. **4.012**2. **5.025**3. **1.908**4. **2.310**5. **2.838**6. **1.232**