


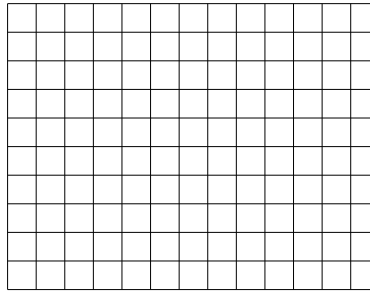


Benutze die vorgegebenen Anordnungen um jede Aufgabe zu lösen.


1) $20 \cdot 25 =$




2) $10 \cdot 13 =$




3) $17 \cdot 10 =$




4) $11 \cdot 10 =$



5) $10 \cdot 11 =$



6) $10 \cdot 15 =$



Antworten

1. _____

2. _____

3. _____

4. _____

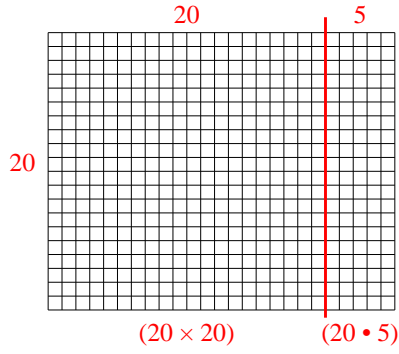
5. _____

6. _____

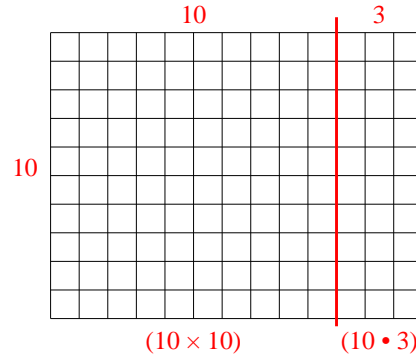


Benutze die vorgegebenen Anordnungen um jede Aufgabe zu lösen.

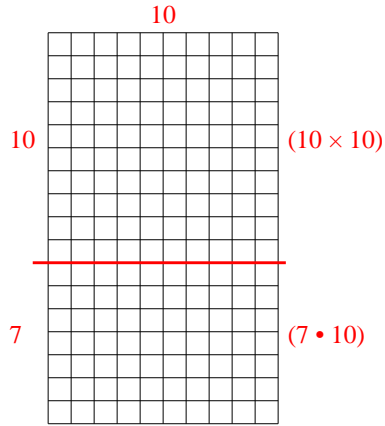
1) $20 \cdot 25 =$



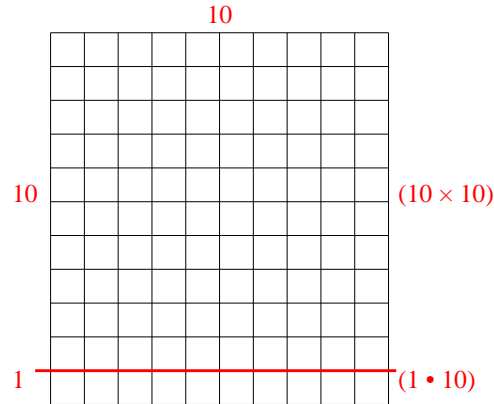
2) $10 \cdot 13 =$



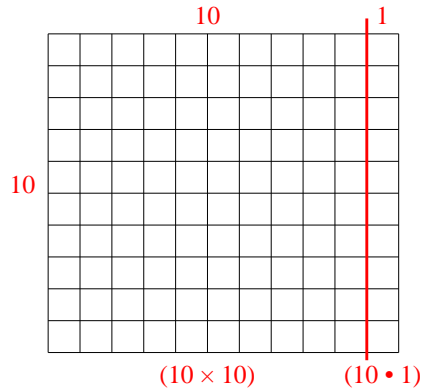
3) $17 \cdot 10 =$



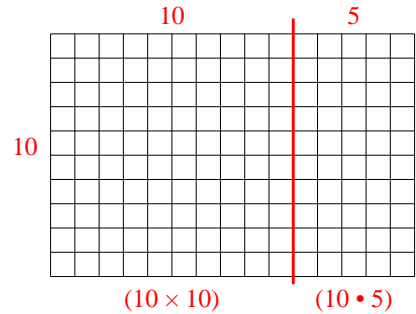
4) $11 \cdot 10 =$



5) $10 \cdot 11 =$



6) $10 \cdot 15 =$



Antworten

1. **500**

2. **130**

3. **170**

4. **110**

5. **110**

6. **150**