





Benutze die vorgegebenen Anordnungen um jede Aufgabe zu lösen.


1) $38 \cdot 10 =$




2) $10 \cdot 12 =$




3) $10 \cdot 18 =$




4) $18 \cdot 10 =$



5) $13 \cdot 10 =$



6) $16 \cdot 10 =$



Antworten

1. _____

2. _____

3. _____

4. _____

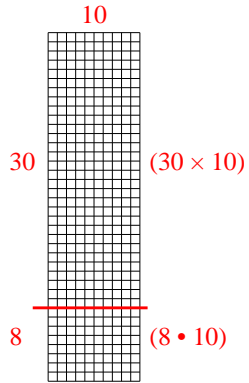
5. _____

6. _____

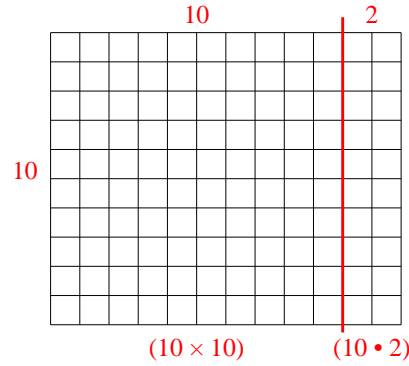


Benutze die vorgegebenen Anordnungen um jede Aufgabe zu lösen.

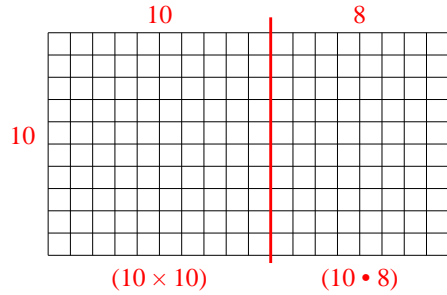
1) $38 \cdot 10 =$



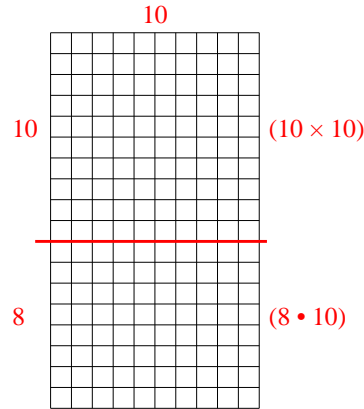
2) $10 \cdot 12 =$



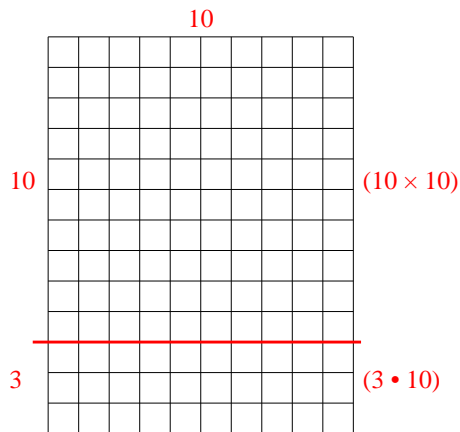
3) $10 \cdot 18 =$



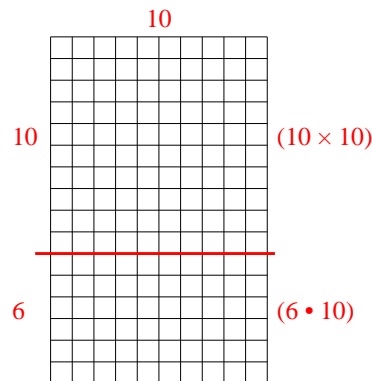
4) $18 \cdot 10 =$



5) $13 \cdot 10 =$



6) $16 \cdot 10 =$



Antworten

1. 380
2. 120
3. 180
4. 180
5. 130
6. 160