





Benutze die vorgegebenen Anordnungen um jede Aufgabe zu lösen.


1) $29 \cdot 20 =$




2) $18 \cdot 10 =$




3) $11 \cdot 10 =$




4) $17 \cdot 10 =$



5) $10 \cdot 18 =$



6) $10 \cdot 11 =$



Antworten

1. _____

2. _____

3. _____

4. _____

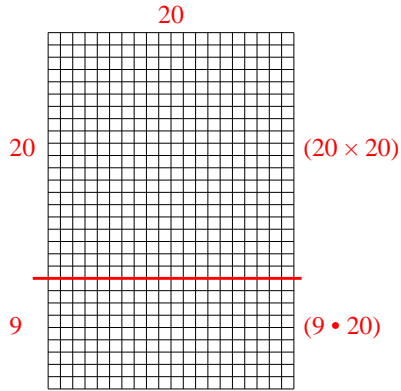
5. _____

6. _____

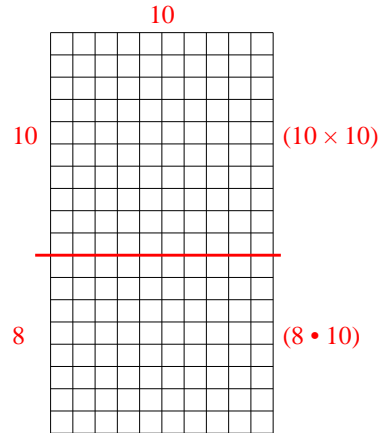


Benutze die vorgegebenen Anordnungen um jede Aufgabe zu lösen.

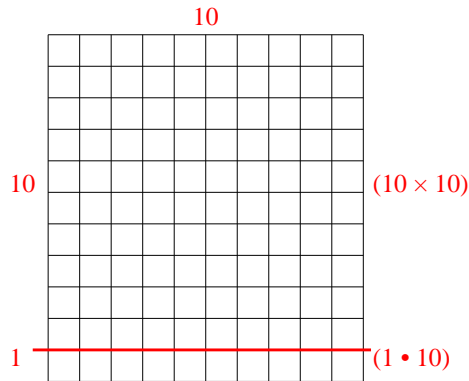
1) $29 \cdot 20 =$



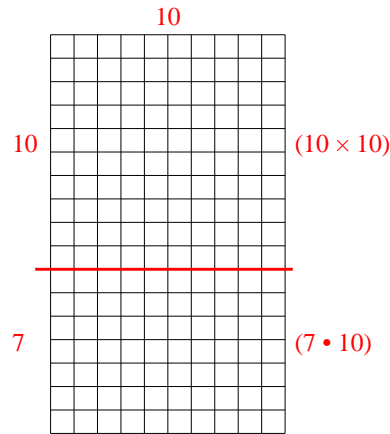
2) $18 \cdot 10 =$



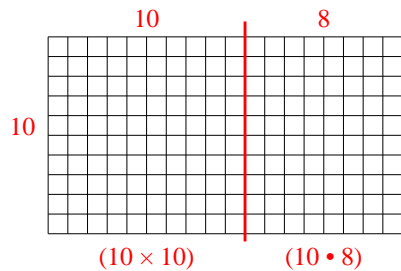
3) $11 \cdot 10 =$



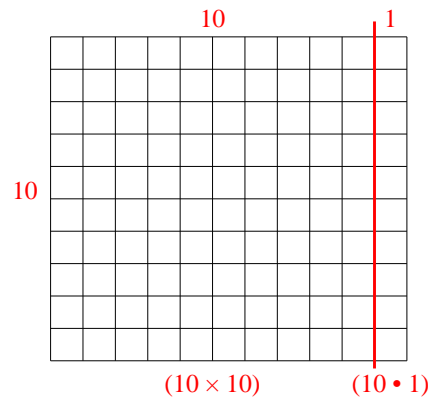
4) $17 \cdot 10 =$



5) $10 \cdot 18 =$



6) $10 \cdot 11 =$



Antworten

1. 580

2. 180

3. 110

4. 170


5. 180

6. 110




Benutze die vorgegebenen Anordnungen um jede Aufgabe zu lösen.


1) $11 \cdot 10 =$




2) $17 \cdot 10 =$




3) $10 \cdot 13 =$




4) $10 \cdot 17 =$



5) $10 \cdot 19 =$



6) $10 \cdot 15 =$



Antworten

1. _____

2. _____

3. _____

4. _____

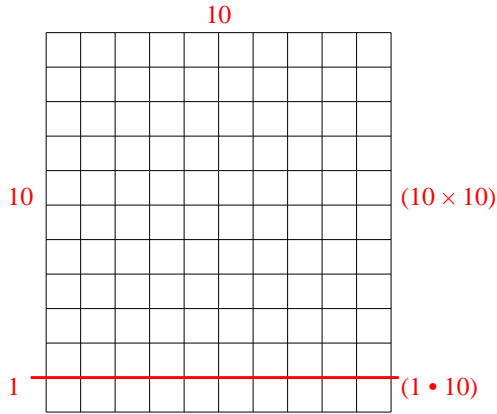
5. _____

6. _____

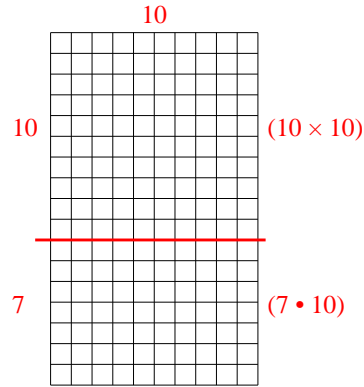


Benutze die vorgegebenen Anordnungen um jede Aufgabe zu lösen.

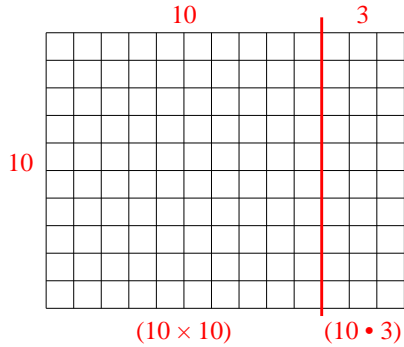
1) $11 \cdot 10 =$



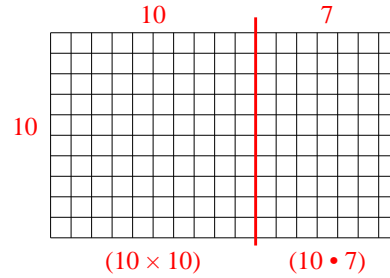
2) $17 \cdot 10 =$



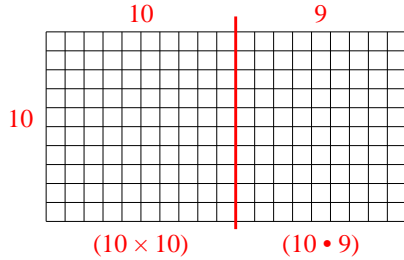
3) $10 \cdot 13 =$



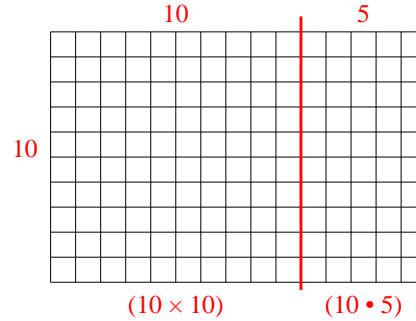
4) $10 \cdot 17 =$



5) $10 \cdot 19 =$



6) $10 \cdot 15 =$



Antworten

1. **110**

2. **170**

3. **130**

4. **170**


5. **190**

6. **150**




Benutze die vorgegebenen Anordnungen um jede Aufgabe zu lösen.


1) $16 \cdot 10 =$




2) $10 \cdot 12 =$




3) $19 \cdot 10 =$




4) $10 \cdot 19 =$



5) $15 \cdot 10 =$



6) $10 \cdot 18 =$



Antworten

1. _____

2. _____

3. _____

4. _____

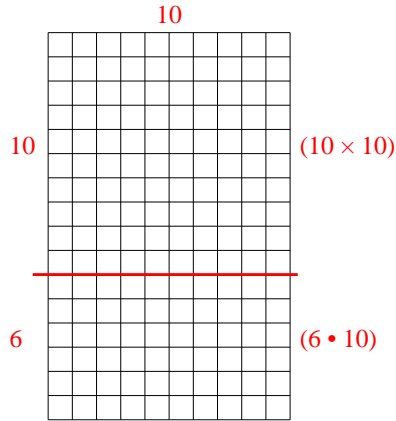
5. _____

6. _____

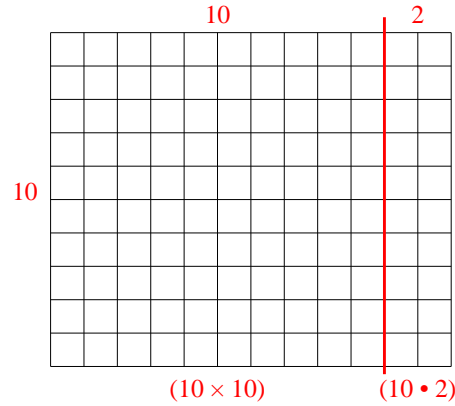


Benutze die vorgegebenen Anordnungen um jede Aufgabe zu lösen.

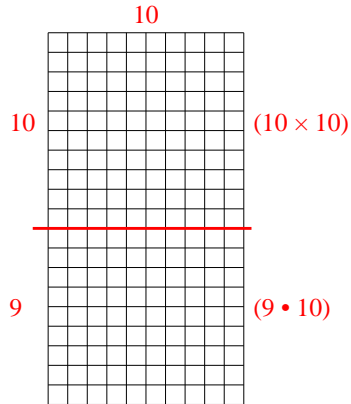
1) $16 \cdot 10 =$



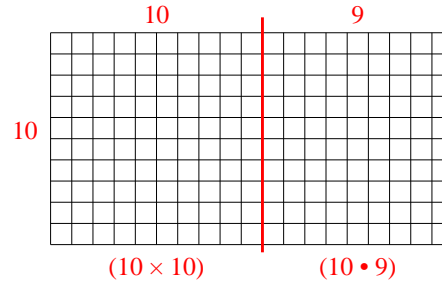
2) $10 \cdot 12 =$



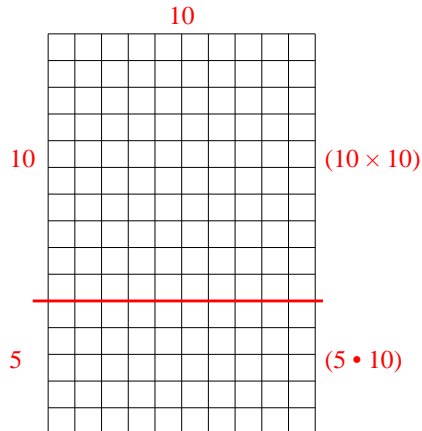
3) $19 \cdot 10 =$



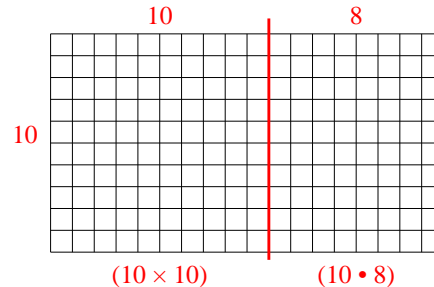
4) $10 \cdot 19 =$



5) $15 \cdot 10 =$



6) $10 \cdot 18 =$



Antworten

1. 160

2. 120

3. 190

4. 190


5. 150

6. 180

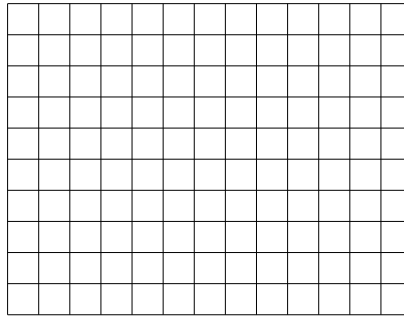


Benutze die vorgegebenen Anordnungen um jede Aufgabe zu lösen.


1) $23 \cdot 20 =$




2) $10 \cdot 13 =$




3) $10 \cdot 11 =$




4) $10 \cdot 17 =$



5) $10 \cdot 16 =$



6) $19 \cdot 10 =$



Antworten

1. _____

2. _____

3. _____

4. _____

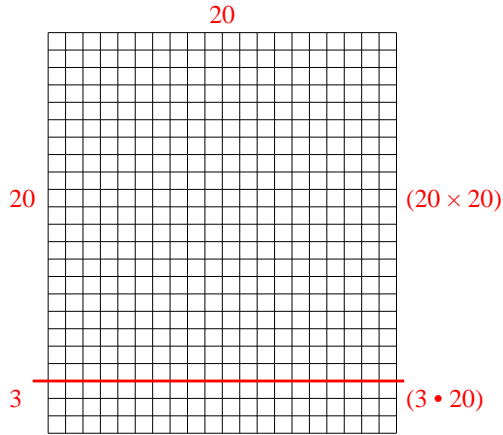
5. _____

6. _____

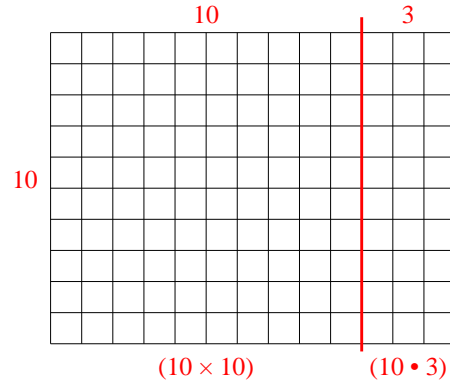


Benutze die vorgegebenen Anordnungen um jede Aufgabe zu lösen.

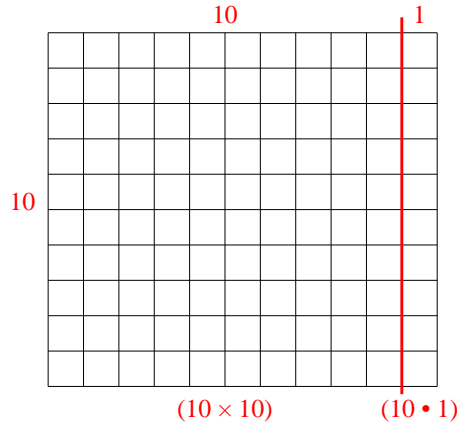
1) $23 \cdot 20 =$



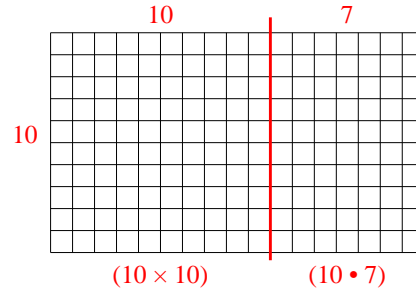
2) $10 \cdot 13 =$



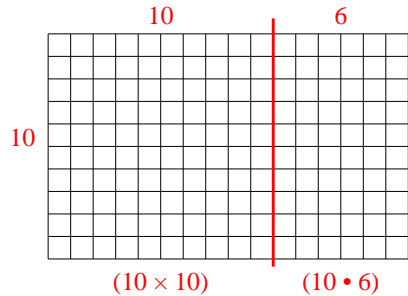
3) $10 \cdot 11 =$



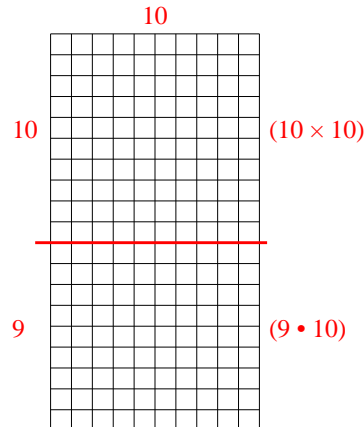
4) $10 \cdot 17 =$



5) $10 \cdot 16 =$



6) $19 \cdot 10 =$



Antworten

1. **460**

2. **130**

3. **110**

4. **170**


5. **160**

6. **190**




Benutze die vorgegebenen Anordnungen um jede Aufgabe zu lösen.


1) $33 \cdot 20 =$




2) $22 \cdot 20 =$




3) $10 \cdot 13 =$




4) $15 \cdot 10 =$



5) $10 \cdot 14 =$



6) $12 \cdot 10 =$



Antworten

1. _____

2. _____

3. _____

4. _____

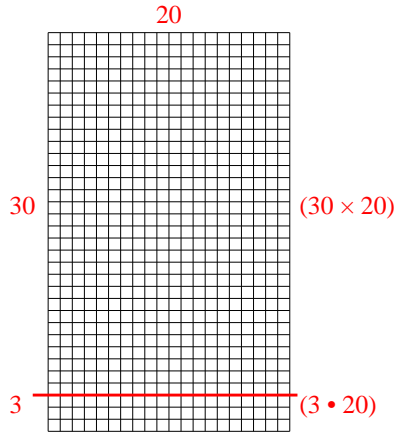
5. _____

6. _____

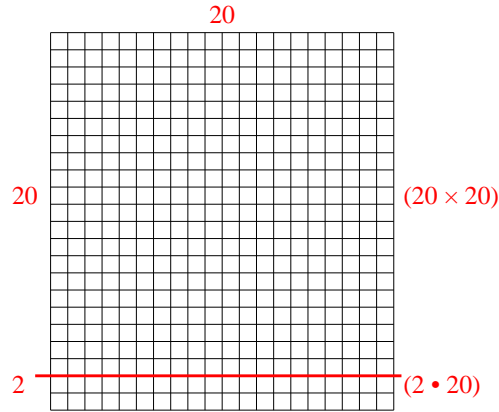


Benutze die vorgegebenen Anordnungen um jede Aufgabe zu lösen.

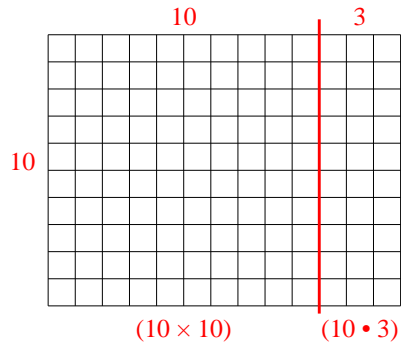
1) $33 \cdot 20 =$



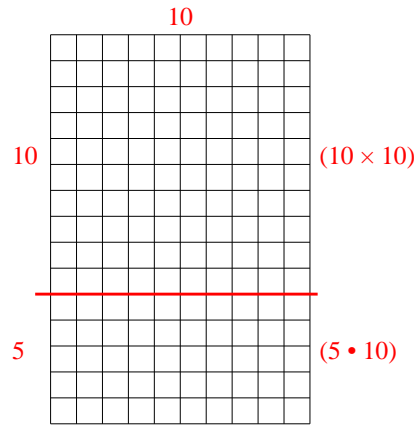
2) $22 \cdot 20 =$



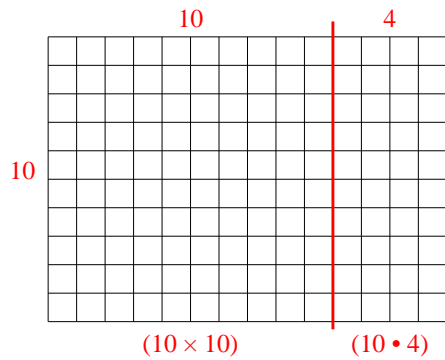
3) $10 \cdot 13 =$



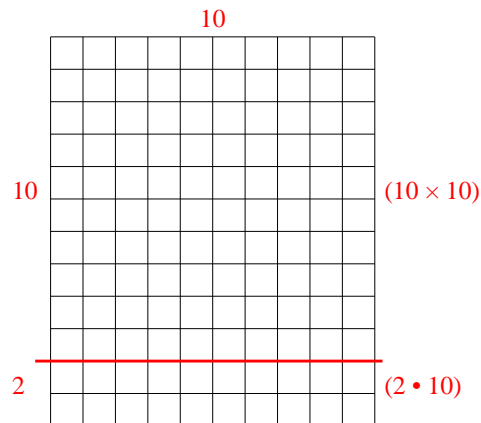
4) $15 \cdot 10 =$



5) $10 \cdot 14 =$



6) $12 \cdot 10 =$



Antworten

1. 660

2. 440

3. 130

4. 150


5. 140

6. 120




Benutze die vorgegebenen Anordnungen um jede Aufgabe zu lösen.


1) $10 \cdot 13 =$




2) $18 \cdot 10 =$




3) $14 \cdot 10 =$




4) $16 \cdot 10 =$



5) $10 \cdot 15 =$



6) $10 \cdot 14 =$



Antworten

1. _____

2. _____

3. _____

4. _____

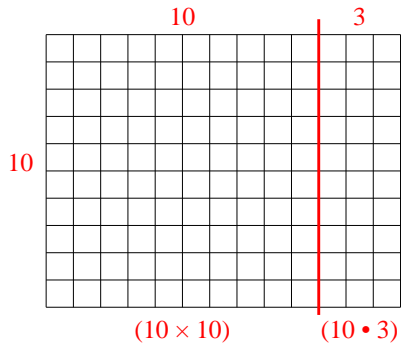
5. _____

6. _____

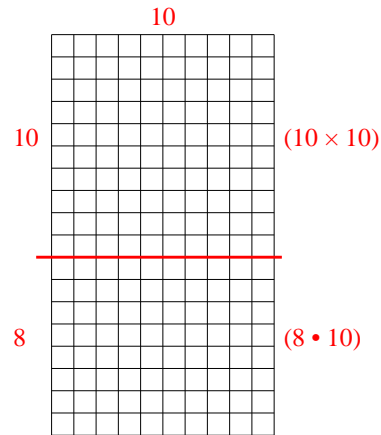


Benutze die vorgegebenen Anordnungen um jede Aufgabe zu lösen.

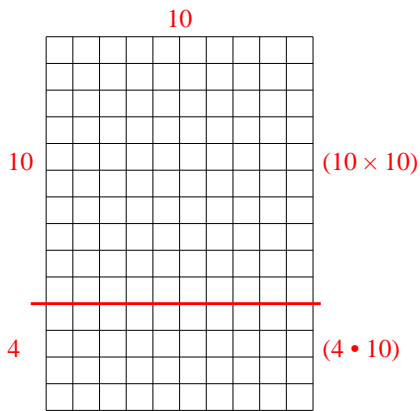
1) $10 \cdot 13 =$



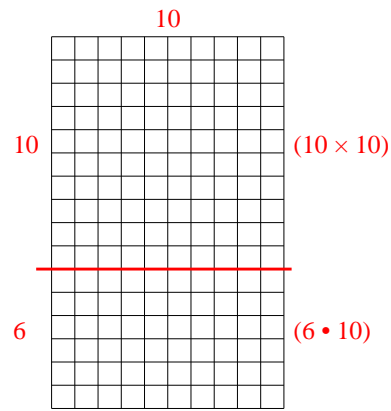
2) $18 \cdot 10 =$



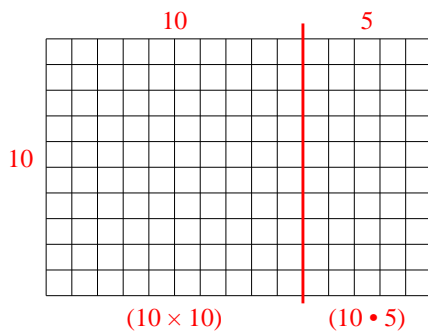
3) $14 \cdot 10 =$



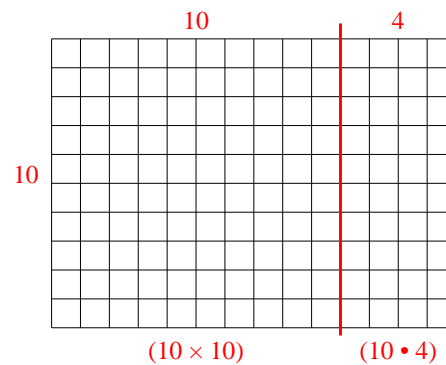
4) $16 \cdot 10 =$



5) $10 \cdot 15 =$



6) $10 \cdot 14 =$


Antworten1. 1302. 1803. 1404. 1605. 1506. 140



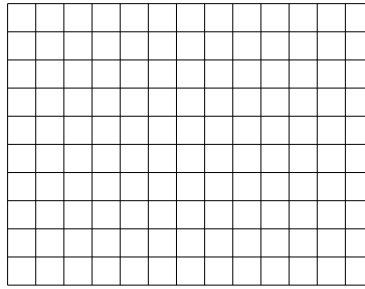
Benutze die vorgegebenen Anordnungen um jede Aufgabe zu lösen.

Antworten

1) $20 \cdot 22 =$



2) $10 \cdot 13 =$



1. _____

2. _____


3. _____

4. _____


5. _____

6. _____


3) $15 \cdot 10 =$




4) $16 \cdot 10 =$



5) $12 \cdot 10 =$



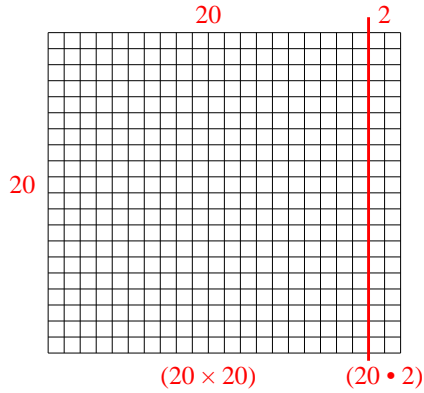
6) $10 \cdot 11 =$



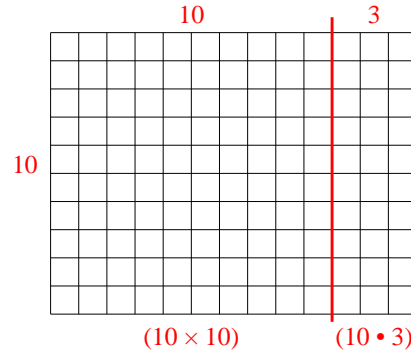


Benutze die vorgegebenen Anordnungen um jede Aufgabe zu lösen.

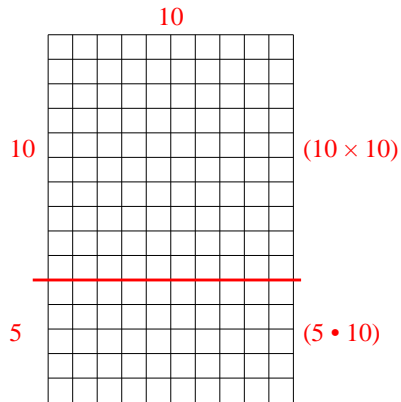
1) $20 \cdot 22 =$



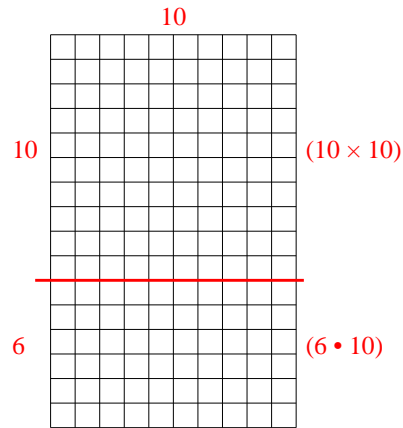
2) $10 \cdot 13 =$



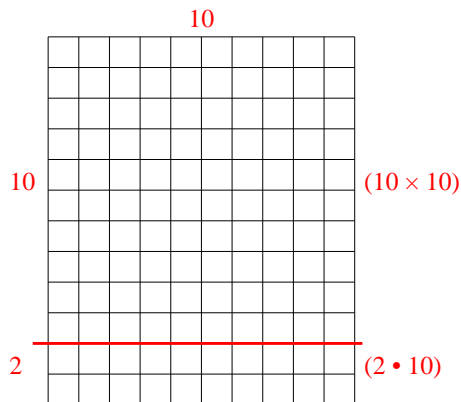
3) $15 \cdot 10 =$



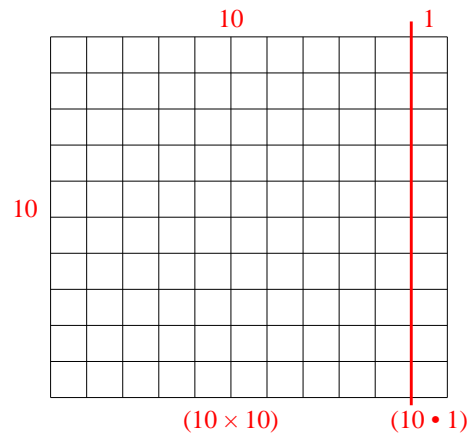
4) $16 \cdot 10 =$



5) $12 \cdot 10 =$



6) $10 \cdot 11 =$



Antworten

1. **440**

2. **130**

3. **150**

4. **160**


5. **120**

6. **110**




Benutze die vorgegebenen Anordnungen um jede Aufgabe zu lösen.


1) $22 \cdot 10 =$




2) $20 \cdot 27 =$




3) $10 \cdot 12 =$




4) $10 \cdot 19 =$



5) $13 \cdot 10 =$



6) $18 \cdot 10 =$



Antworten

1. _____

2. _____

3. _____

4. _____

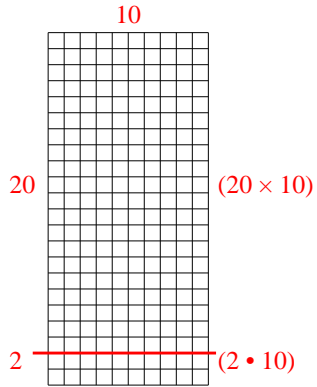
5. _____

6. _____

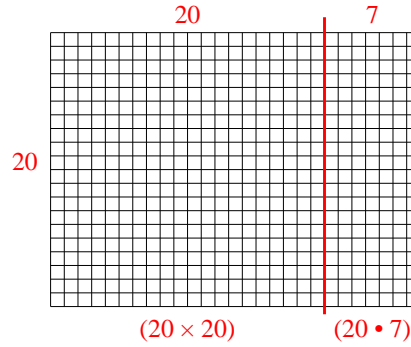


Benutze die vorgegebenen Anordnungen um jede Aufgabe zu lösen.

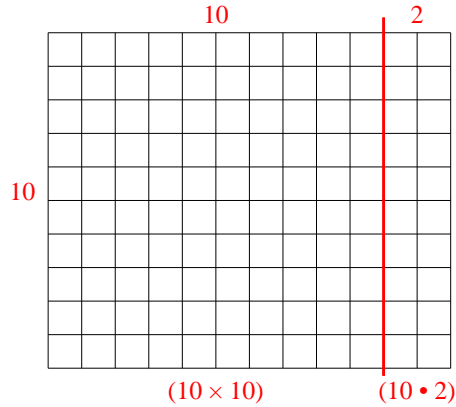
1) $22 \cdot 10 =$



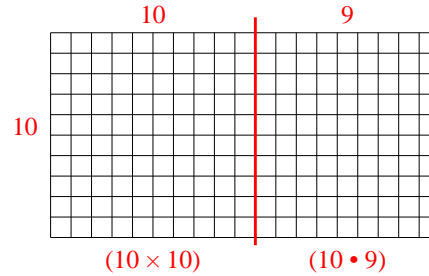
2) $20 \cdot 27 =$



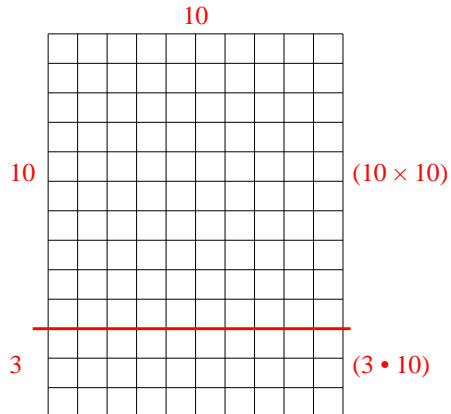
3) $10 \cdot 12 =$



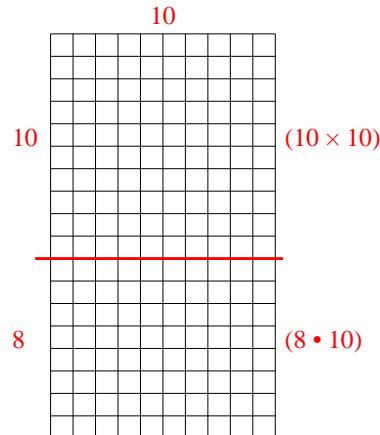
4) $10 \cdot 19 =$



5) $13 \cdot 10 =$



6) $18 \cdot 10 =$



Antworten

1. 220

2. 540

3. 120

4. 190


5. 130

6. 180




Benutze die vorgegebenen Anordnungen um jede Aufgabe zu lösen.


1) $13 \cdot 10 =$




2) $10 \cdot 18 =$




3) $10 \cdot 11 =$




4) $16 \cdot 10 =$



5) $10 \cdot 12 =$



6) $15 \cdot 10 =$



Antworten

1. _____

2. _____

3. _____

4. _____

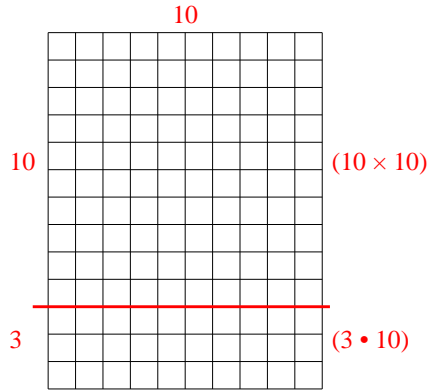
5. _____

6. _____

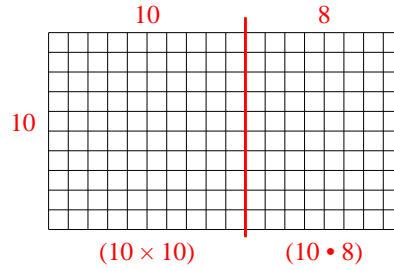


Benutze die vorgegebenen Anordnungen um jede Aufgabe zu lösen.

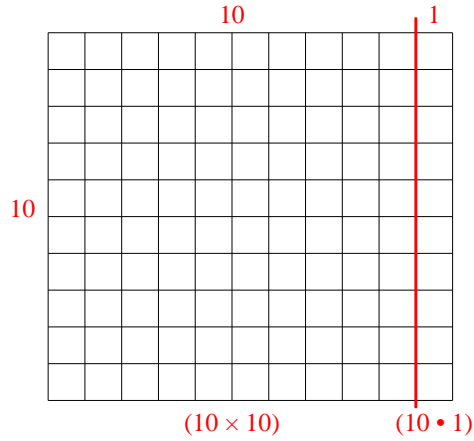
1) $13 \cdot 10 =$



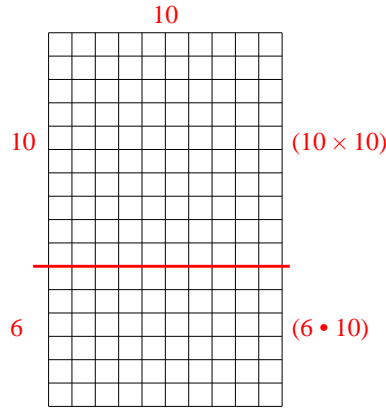
2) $10 \cdot 18 =$



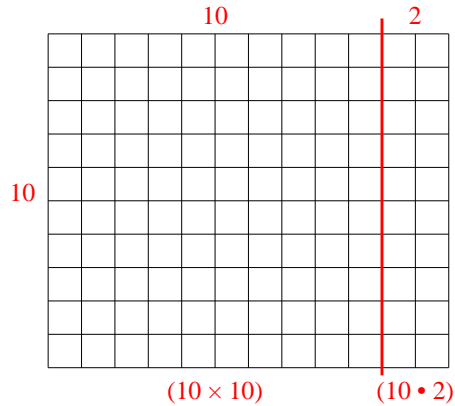
3) $10 \cdot 11 =$



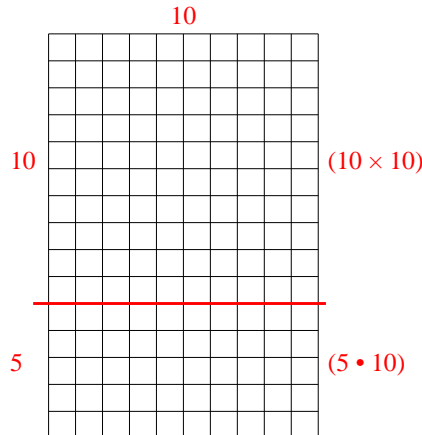
4) $16 \cdot 10 =$



5) $10 \cdot 12 =$



6) $15 \cdot 10 =$



Antworten

1. 130

2. 180

3. 110

4. 160

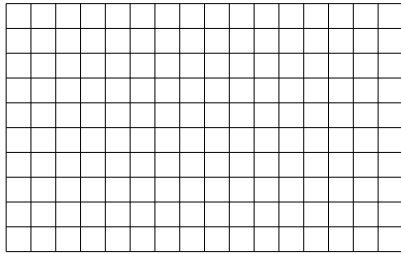
5. 120

6. 150




Benutze die vorgegebenen Anordnungen um jede Aufgabe zu lösen.


1) $10 \cdot 16 =$




2) $11 \cdot 10 =$




3) $10 \cdot 12 =$




4) $10 \cdot 18 =$



5) $10 \cdot 19 =$



6) $10 \cdot 13 =$



Antworten

1. _____

2. _____

3. _____

4. _____

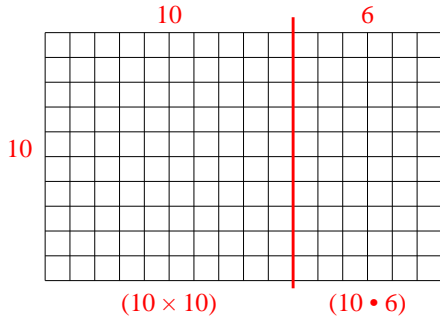
5. _____

6. _____

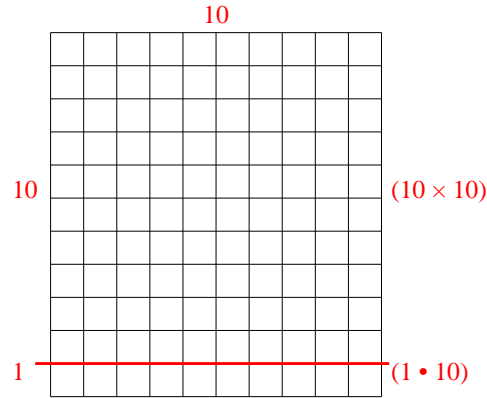


Benutze die vorgegebenen Anordnungen um jede Aufgabe zu lösen.

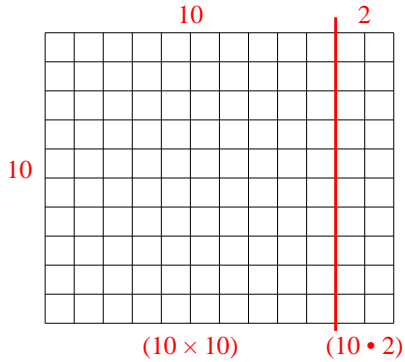
1) $10 \cdot 16 =$



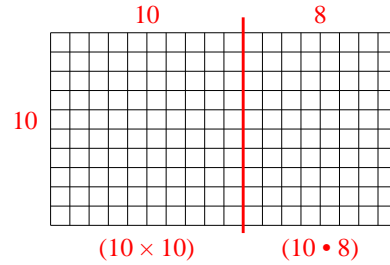
2) $11 \cdot 10 =$



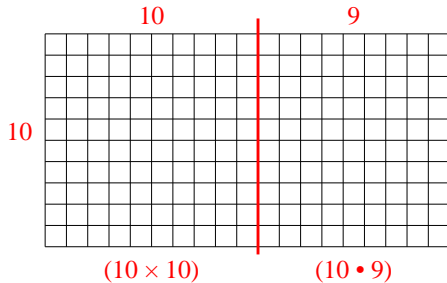
3) $10 \cdot 12 =$



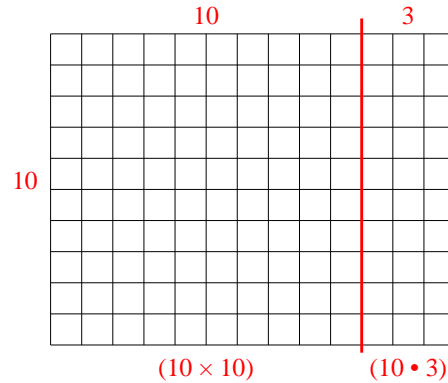
4) $10 \cdot 18 =$



5) $10 \cdot 19 =$



6) $10 \cdot 13 =$



Antworten

1. **160**

2. **110**

3. **120**

4. **180**

5. **190**

6. **130**