





Benutze die vorgegebenen Anordnungen um jede Aufgabe zu lösen.


1)  $13 \cdot 10 =$




2)  $10 \cdot 18 =$




3)  $10 \cdot 11 =$




4)  $16 \cdot 10 =$



5)  $10 \cdot 12 =$



6)  $15 \cdot 10 =$



**Antworten**

1. \_\_\_\_\_

2. \_\_\_\_\_

3. \_\_\_\_\_

4. \_\_\_\_\_

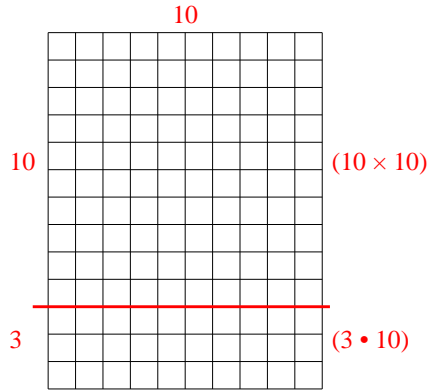
5. \_\_\_\_\_

6. \_\_\_\_\_

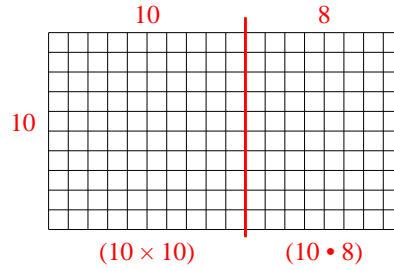


Benutze die vorgegebenen Anordnungen um jede Aufgabe zu lösen.

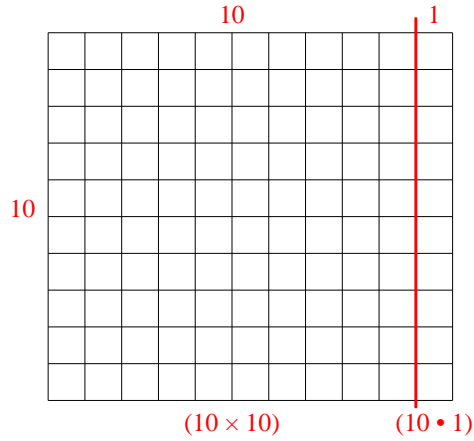
1)  $13 \cdot 10 =$



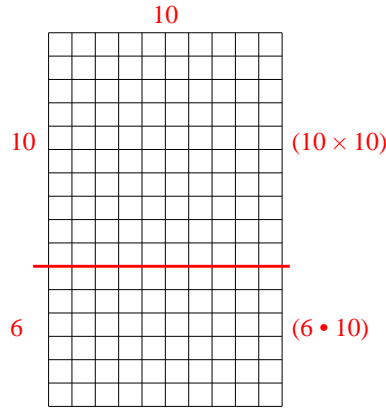
2)  $10 \cdot 18 =$



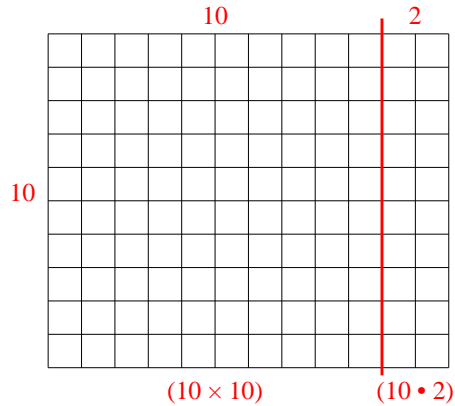
3)  $10 \cdot 11 =$



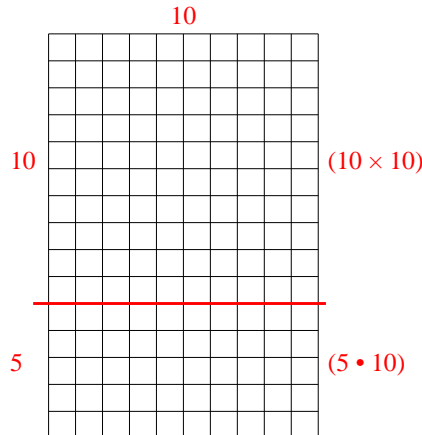
4)  $16 \cdot 10 =$



5)  $10 \cdot 12 =$



6)  $15 \cdot 10 =$



**Antworten**

1. **130**

2. **180**

3. **110**

4. **160**

5. **120**

6. **150**