





Benutze die vorgegebenen Anordnungen um jede Aufgabe zu lösen.


1)  $22 \cdot 10 =$




2)  $20 \cdot 27 =$




3)  $10 \cdot 12 =$




4)  $10 \cdot 19 =$



5)  $13 \cdot 10 =$



6)  $18 \cdot 10 =$



**Antworten**

1. \_\_\_\_\_

2. \_\_\_\_\_

3. \_\_\_\_\_

4. \_\_\_\_\_

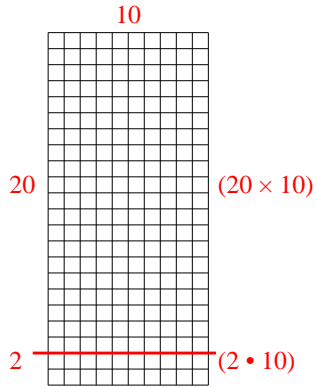
5. \_\_\_\_\_

6. \_\_\_\_\_

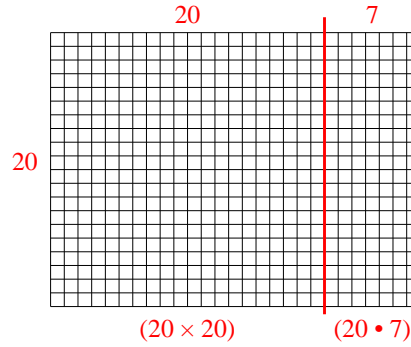


Benutze die vorgegebenen Anordnungen um jede Aufgabe zu lösen.

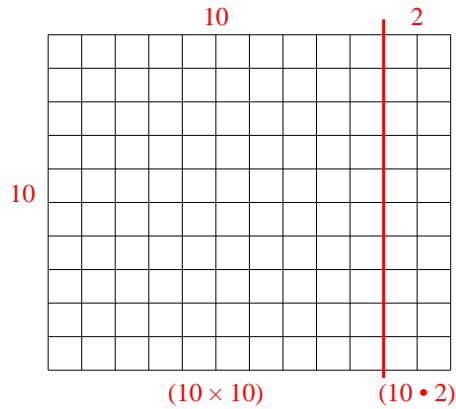
1)  $22 \cdot 10 =$



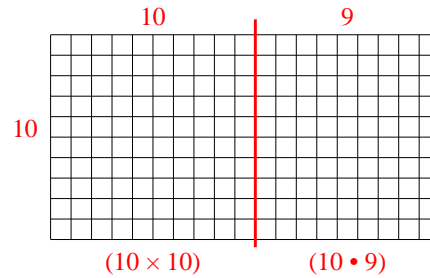
2)  $20 \cdot 27 =$



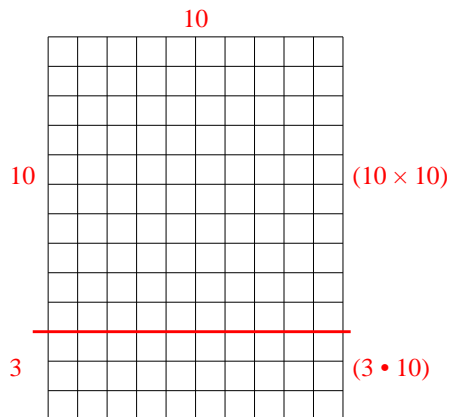
3)  $10 \cdot 12 =$



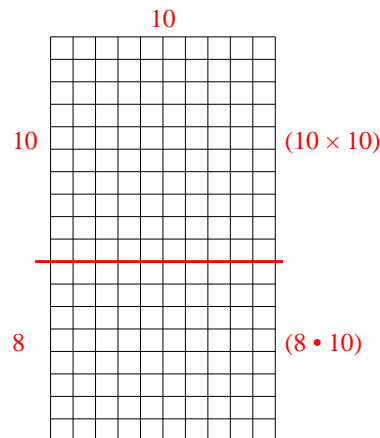
4)  $10 \cdot 19 =$



5)  $13 \cdot 10 =$



6)  $18 \cdot 10 =$



Antworten

1. 220

2. 540

3. 120

4. 190

5. 130

6. 180