





Benutze die vorgegebenen Anordnungen um jede Aufgabe zu lösen.

Antworten

1) $20 \cdot 22 =$



2) $10 \cdot 13 =$



1. _____

2. _____


3. _____

4. _____


5. _____

6. _____


3) $15 \cdot 10 =$




4) $16 \cdot 10 =$



5) $12 \cdot 10 =$



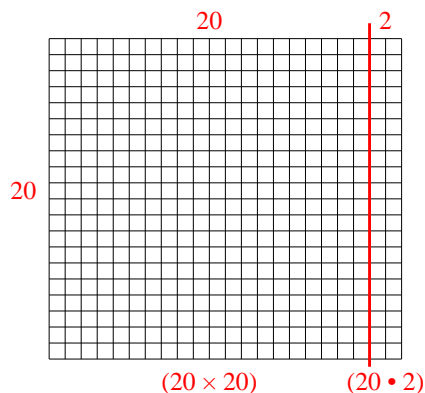
6) $10 \cdot 11 =$



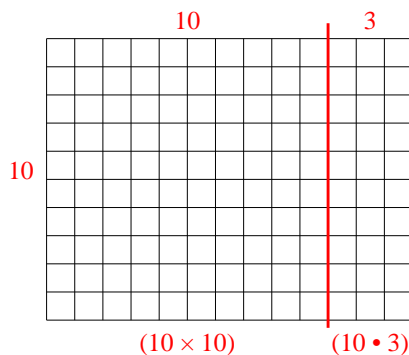


Benutze die vorgegebenen Anordnungen um jede Aufgabe zu lösen.

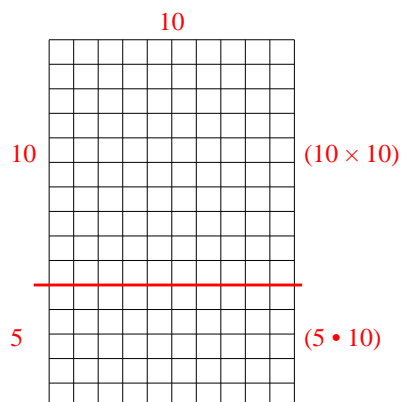
1) $20 \cdot 22 =$



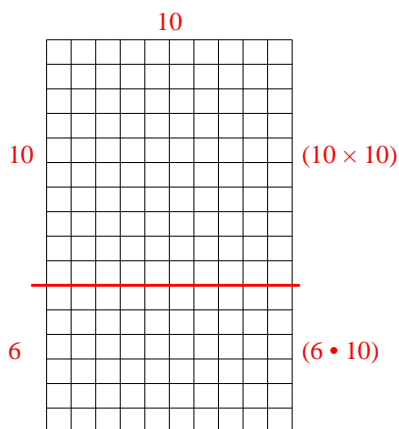
2) $10 \cdot 13 =$



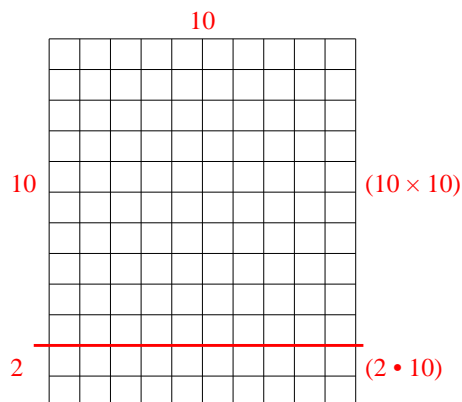
3) $15 \cdot 10 =$



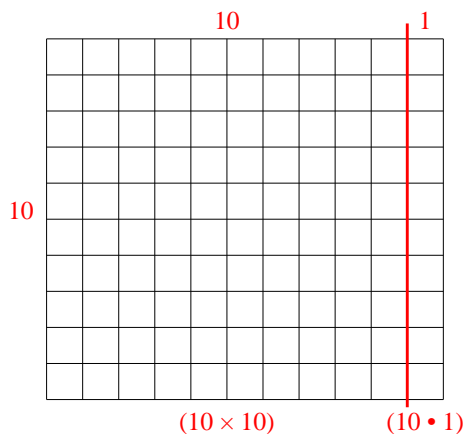
4) $16 \cdot 10 =$



5) $12 \cdot 10 =$



6) $10 \cdot 11 =$

**Antworten**

1. **440**
2. **130**
3. **150**
4. **160**
5. **120**
6. **110**