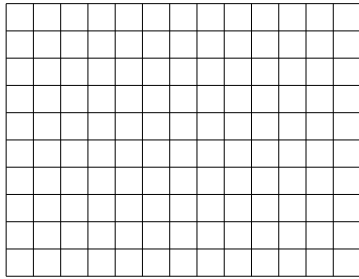





Benutze die vorgegebenen Anordnungen um jede Aufgabe zu lösen.

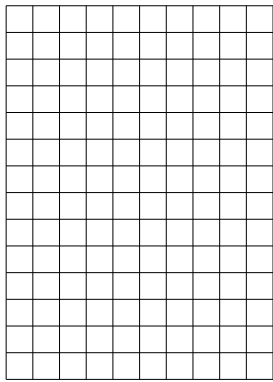
1) $10 \cdot 13 =$




2) $18 \cdot 10 =$




3) $14 \cdot 10 =$




4) $16 \cdot 10 =$



5) $10 \cdot 15 =$



6) $10 \cdot 14 =$



Antworten

1. _____

2. _____

3. _____

4. _____

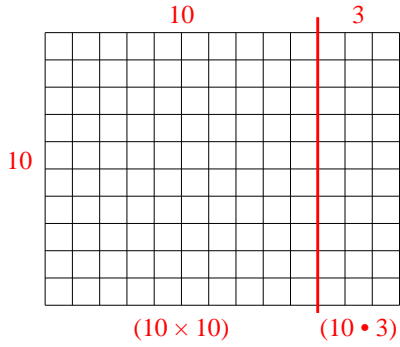
5. _____

6. _____

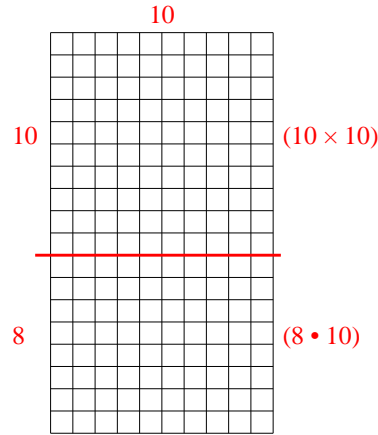


Benutze die vorgegebenen Anordnungen um jede Aufgabe zu lösen.

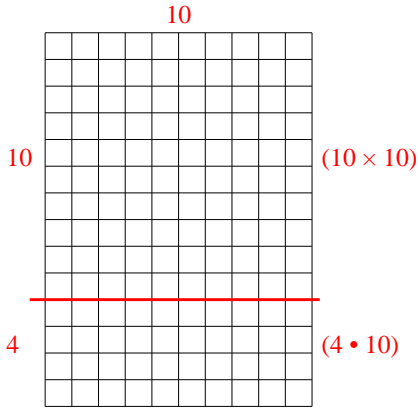
1) $10 \cdot 13 =$



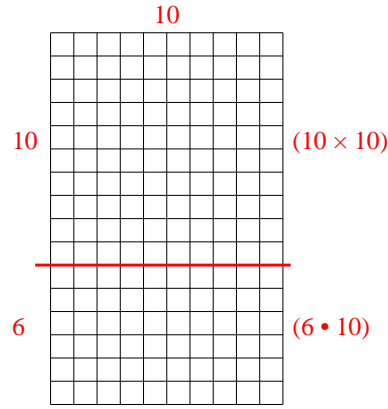
2) $18 \cdot 10 =$



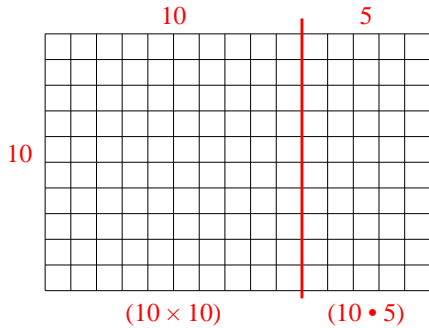
3) $14 \cdot 10 =$



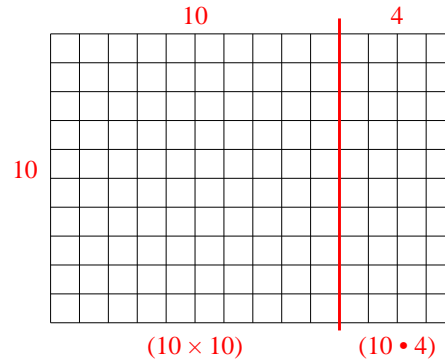
4) $16 \cdot 10 =$



5) $10 \cdot 15 =$



6) $10 \cdot 14 =$



Antworten

- 1. 130
- 2. 180
- 3. 140
- 4. 160
- 5. 150
- 6. 140