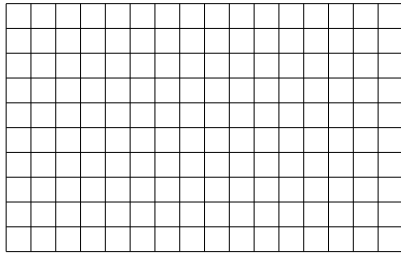





Benutze die vorgegebenen Anordnungen um jede Aufgabe zu lösen.


1) $10 \cdot 16 =$




2) $11 \cdot 10 =$




3) $10 \cdot 12 =$




4) $10 \cdot 18 =$



5) $10 \cdot 19 =$



6) $10 \cdot 13 =$



Antworten

1. _____

2. _____

3. _____

4. _____

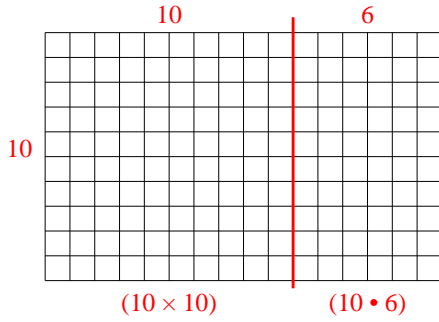
5. _____

6. _____

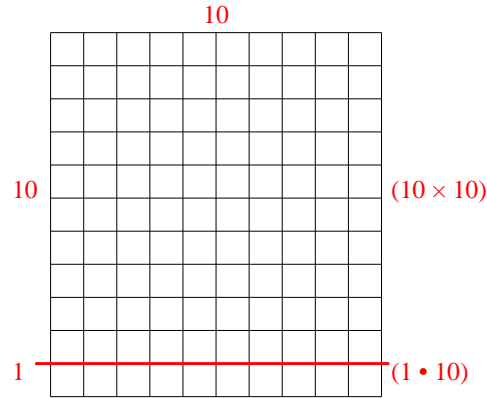


Benutze die vorgegebenen Anordnungen um jede Aufgabe zu lösen.

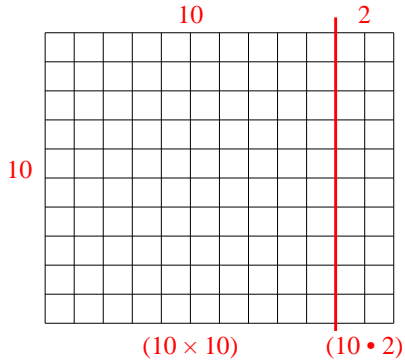
1) $10 \cdot 16 =$



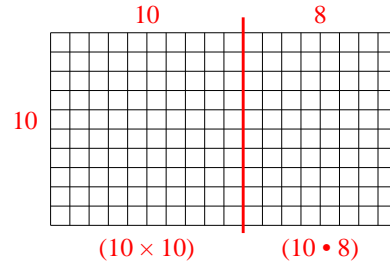
2) $11 \cdot 10 =$



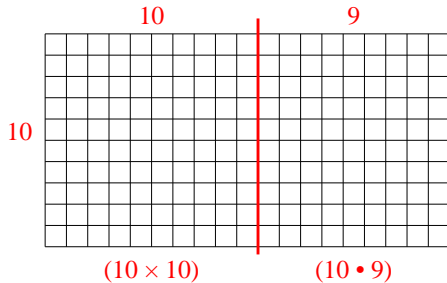
3) $10 \cdot 12 =$



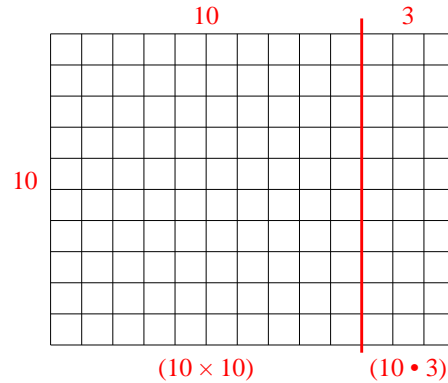
4) $10 \cdot 18 =$



5) $10 \cdot 19 =$



6) $10 \cdot 13 =$



Antworten

1. 160

2. 110

3. 120

4. 180

5. 190

6. 130