


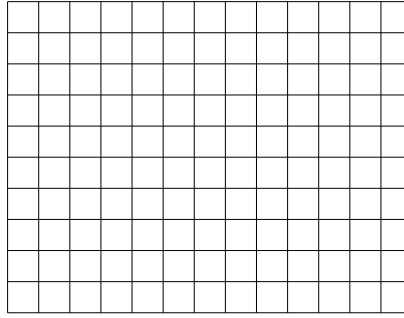


Benutze die vorgegebenen Anordnungen um jede Aufgabe zu lösen.


1)  $23 \cdot 20 =$




2)  $10 \cdot 13 =$




3)  $10 \cdot 11 =$




4)  $10 \cdot 17 =$



5)  $10 \cdot 16 =$



6)  $19 \cdot 10 =$



**Antworten**

1. \_\_\_\_\_

2. \_\_\_\_\_

3. \_\_\_\_\_

4. \_\_\_\_\_

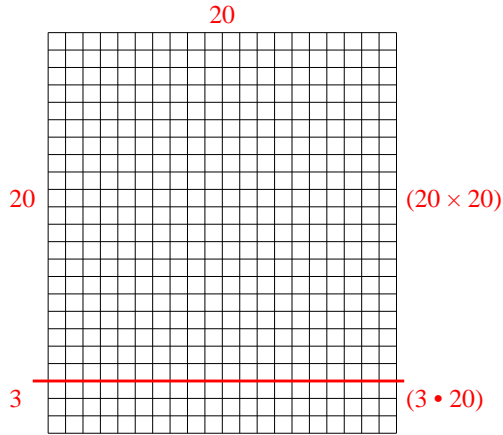
5. \_\_\_\_\_

6. \_\_\_\_\_

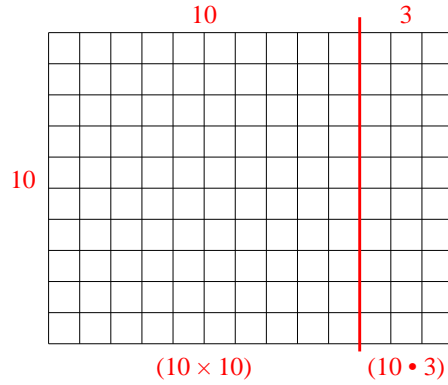


Benutze die vorgegebenen Anordnungen um jede Aufgabe zu lösen.

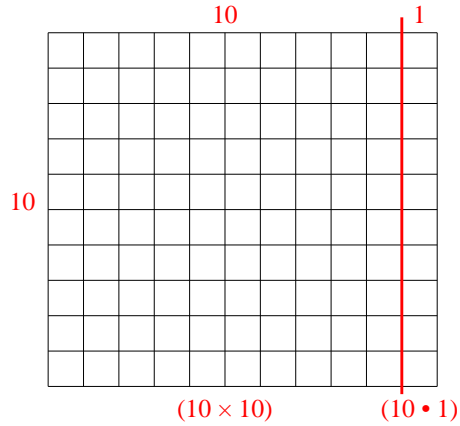
1)  $23 \cdot 20 =$



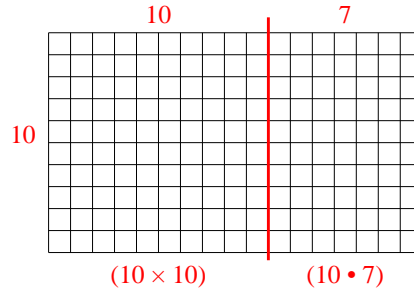
2)  $10 \cdot 13 =$



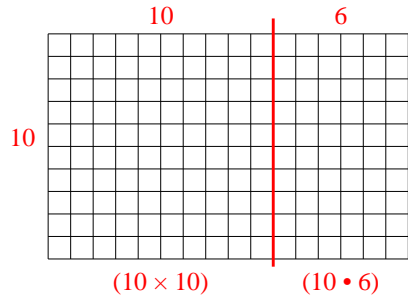
3)  $10 \cdot 11 =$



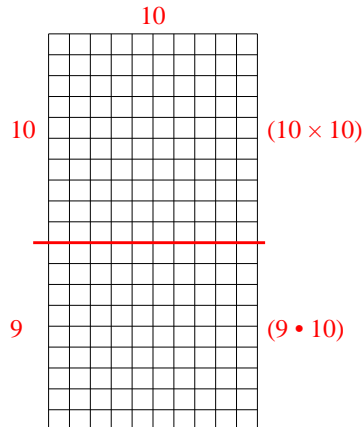
4)  $10 \cdot 17 =$



5)  $10 \cdot 16 =$



6)  $19 \cdot 10 =$



**Antworten**

1. **460**

2. **130**

3. **110**

4. **170**

5. **160**

6. **190**