
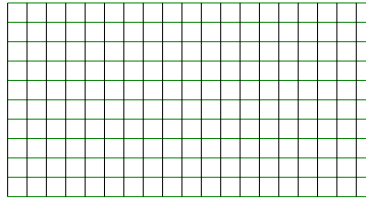


**Benutze die vorgegebenen Anordnungen um jede Aufgabe zu lösen.****Antworten**

1) $20 \cdot 16 =$



2) $10 \cdot 19 =$



1. _____

2. _____


3. _____

4. _____


5. _____

6. _____


3) $10 \cdot 12 =$




4) $15 \cdot 10 =$



5) $19 \cdot 10 =$



6) $10 \cdot 13 =$

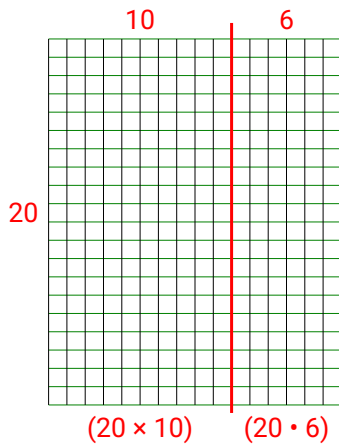




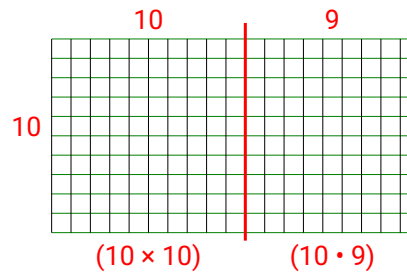
Benutze die vorgegebenen Anordnungen um jede Aufgabe zu lösen.

Antworten

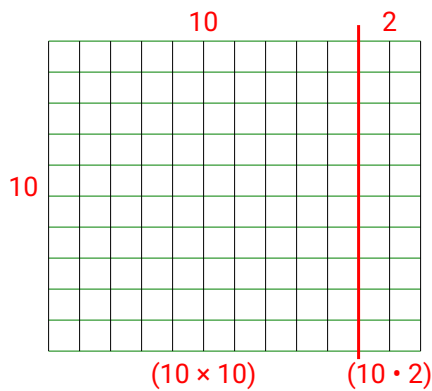
1) $20 \cdot 16 =$



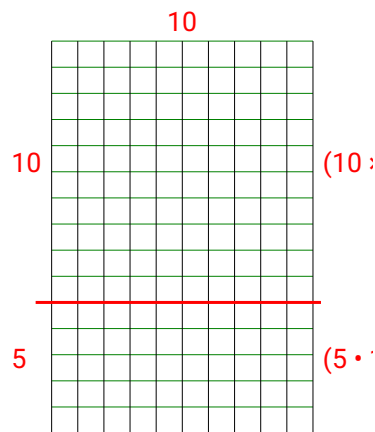
2) $10 \cdot 19 =$

1. **320**2. **190**3. **120**4. **150**5. **190**6. **130**

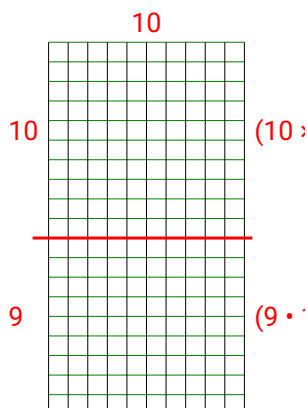
3) $10 \cdot 12 =$



4) $15 \cdot 10 =$



5) $19 \cdot 10 =$



6) $10 \cdot 13 =$

