

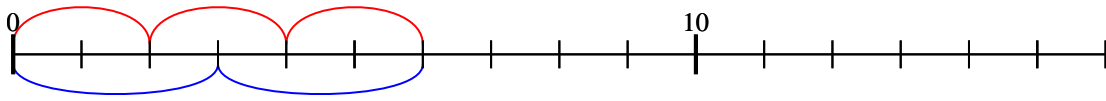


Benutze den Zahlenstrahl um jede Aufgabe zu beantworten.

Antworten

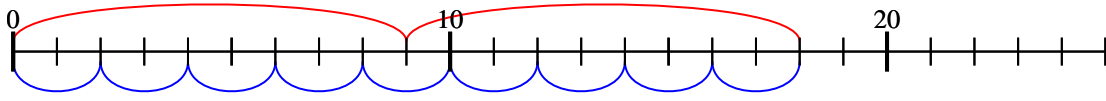
$$1) \quad 3 \cdot 2 =$$

$$2 \cdot 3 =$$

1. 6

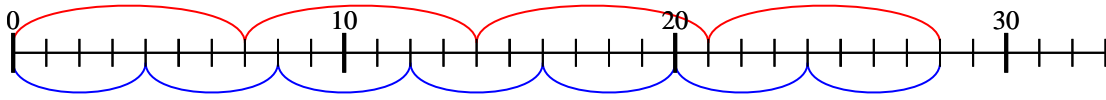
$$2) \quad 2 \cdot 9 =$$

$$9 \cdot 2 =$$

2. 18

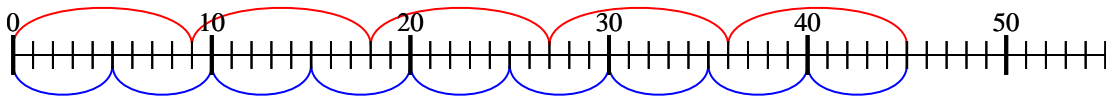
$$3) \quad 4 \cdot 7 =$$

$$7 \cdot 4 =$$

3. 28

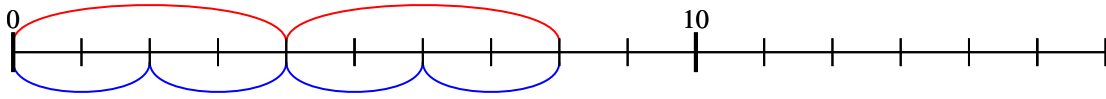
$$4) \quad 5 \cdot 9 =$$

$$9 \cdot 5 =$$

4. 45

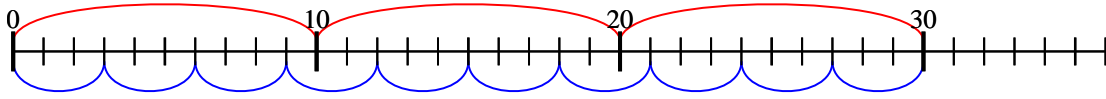
$$5) \quad 2 \cdot 4 =$$

$$4 \cdot 2 =$$

5. 8

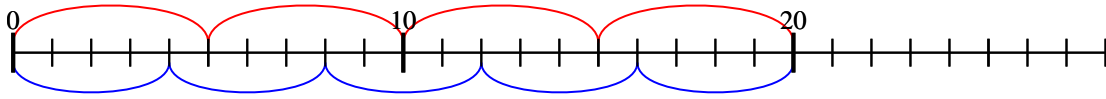
$$6) \quad 3 \cdot 10 =$$

$$10 \cdot 3 =$$

6. 30

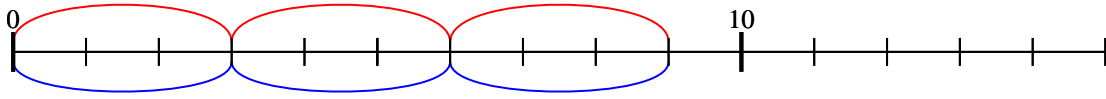
$$7) \quad 4 \cdot 5 =$$

$$5 \cdot 4 =$$

7. 20

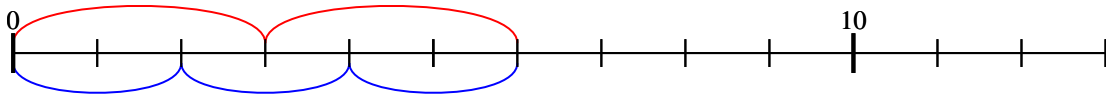
$$8) \quad 3 \cdot 3 =$$

$$3 \cdot 3 =$$

8. 9

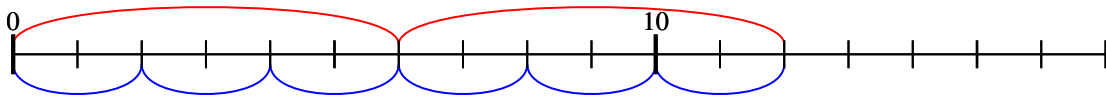
$$9) \quad 2 \cdot 3 =$$

$$3 \cdot 2 =$$

9. 6

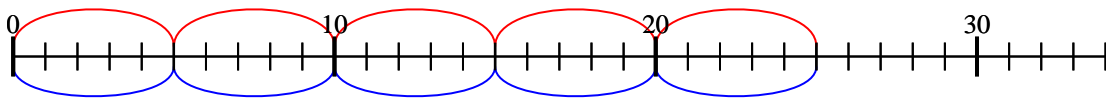
$$10) \quad 2 \cdot 6 =$$

$$6 \cdot 2 =$$

10. 12

$$11) \quad 5 \cdot 5 =$$

$$5 \cdot 5 =$$

11. 25