





Schreibe eine Gleichung, die der Anordnung entspricht und finde die richtige Anzahl der Formen.

Antworten



Bsp. $5 \cdot 3 = 15$

1. _____

2. _____

3. _____

4. _____

5. _____

6. _____

7. _____

8. _____

9. _____

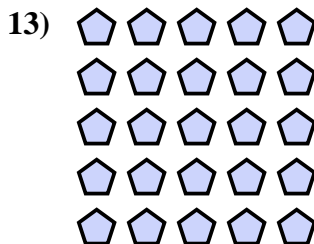


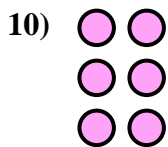

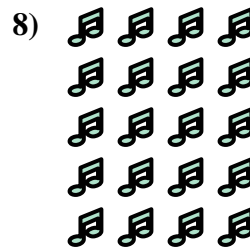
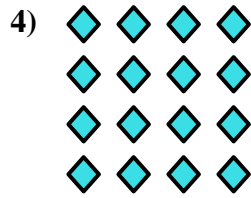

10. _____

11. _____

12. _____

13. _____

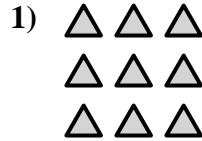

14. _____





Schreibe eine Gleichung, die der Anordnung entspricht und finde die richtige Anzahl der Formen.

Antworten



Bsp. $5 \cdot 3 = 15$

1. $3 \cdot 3 = 9$

2. $2 \cdot 3 = 6$

3. $4 \cdot 2 = 8$

4. $4 \cdot 4 = 16$

5. $2 \cdot 5 = 10$

6. $2 \cdot 4 = 8$

7. $4 \cdot 3 = 12$

8. $5 \cdot 4 = 20$

9. $3 \cdot 4 = 12$

10. $3 \cdot 2 = 6$

11. $3 \cdot 5 = 15$

12. $4 \cdot 5 = 20$

13. $5 \cdot 5 = 25$

14. $2 \cdot 2 = 4$

