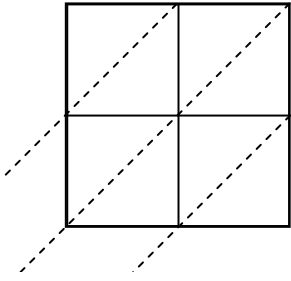




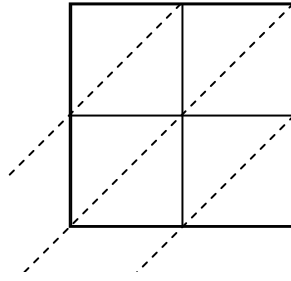
Wende die Gittermultiplikation an um jede Aufgabe zu lösen.

Antworten

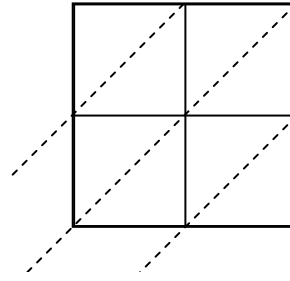
1) $18 \cdot 35 =$



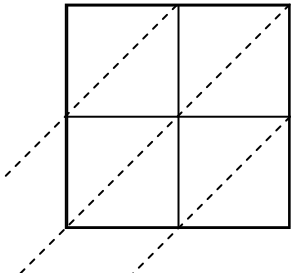
2) $53 \cdot 85 =$



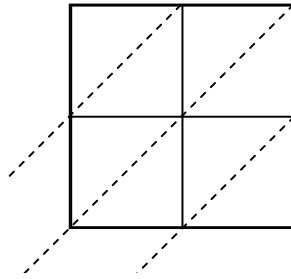
3) $76 \cdot 55 =$



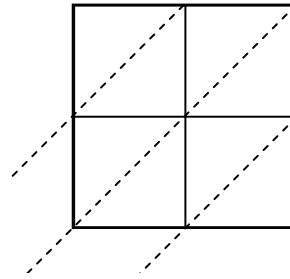
4) $52 \cdot 57 =$



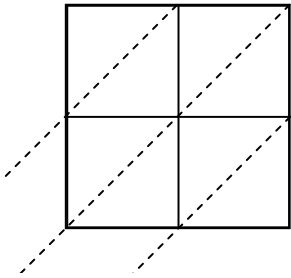
5) $80 \cdot 99 =$



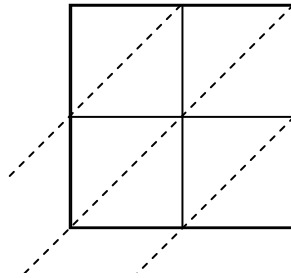
6) $38 \cdot 19 =$



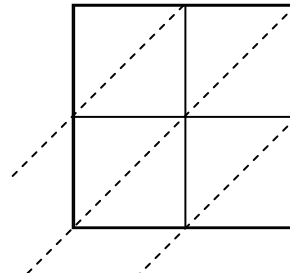
7) $93 \cdot 53 =$



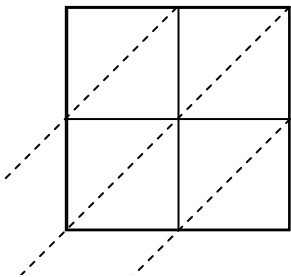
8) $27 \cdot 83 =$



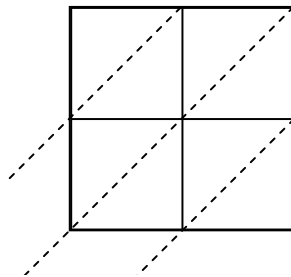
9) $72 \cdot 60 =$



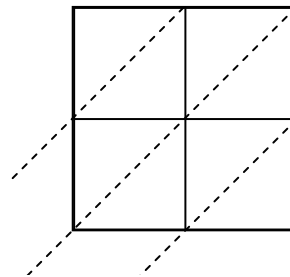
10) $64 \cdot 16 =$



11) $38 \cdot 21 =$



12) $43 \cdot 70 =$



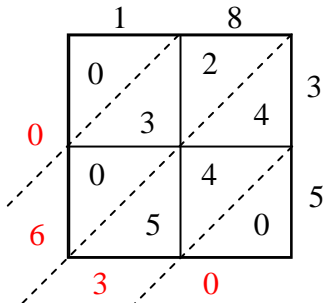
1. _____
2. _____
3. _____
4. _____
5. _____
6. _____
7. _____
8. _____
9. _____
10. _____
11. _____
12. _____



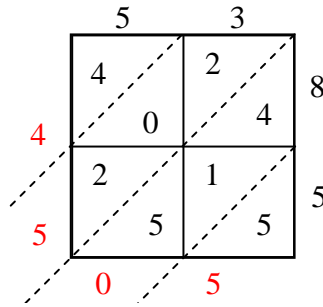
Wende die Gittermultiplikation an um jede Aufgabe zu lösen.

Antworten

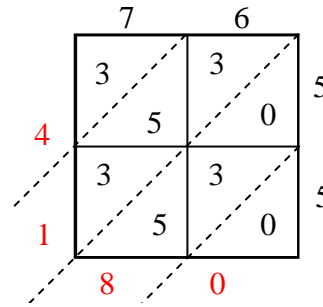
1) $18 \cdot 35 =$



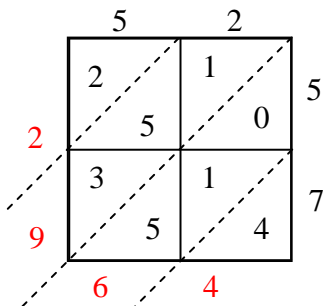
2) $53 \cdot 85 =$



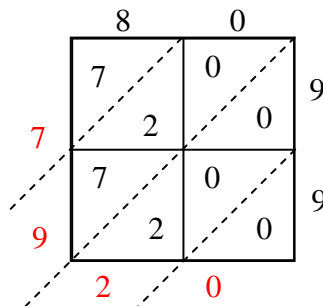
3) $76 \cdot 55 =$



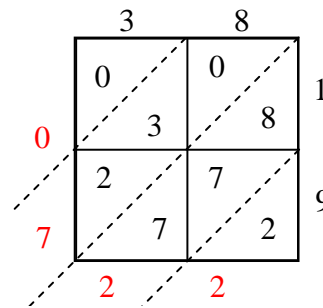
4) $52 \cdot 57 =$



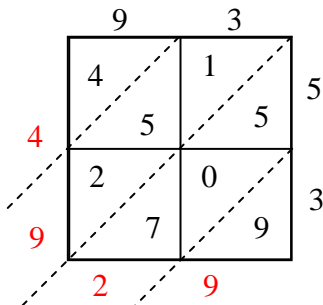
5) $80 \cdot 99 =$



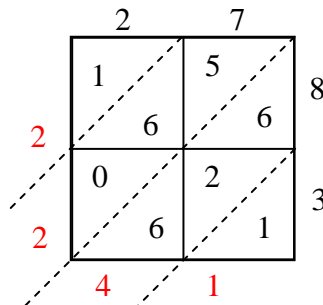
6) $38 \cdot 19 =$



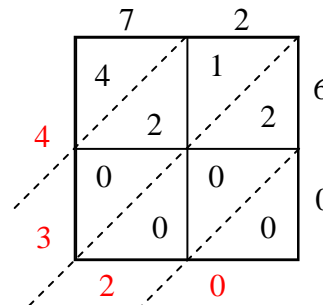
7) $93 \cdot 53 =$



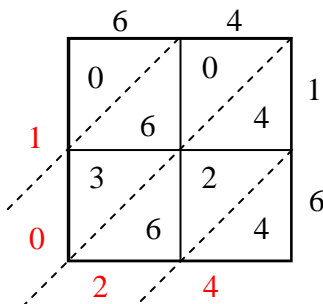
8) $27 \cdot 83 =$



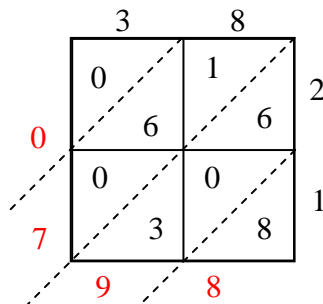
9) $72 \cdot 60 =$



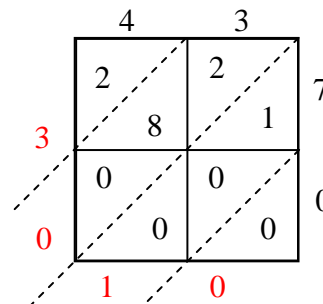
10) $64 \cdot 16 =$



11) $38 \cdot 21 =$



12) $43 \cdot 70 =$

1. **630**2. **4.505**3. **4.180**4. **2.964**5. **7.920**6. **722**7. **4.929**8. **2.241**9. **4.320**10. **1.024**11. **798**12. **3.010**