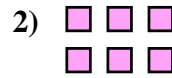
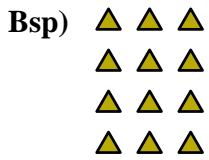




Schreiben Sie jedes Array als Additionsaufgabe und lösen Sie.

Antworten



Bsp. 3+3+3+3=12

1. _____

2. _____

3. _____

4. _____

5. _____

6. _____

7. _____

8. _____

9. _____


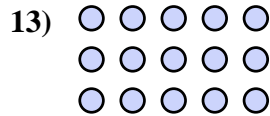

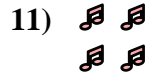
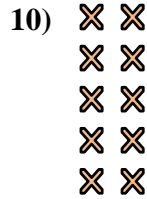

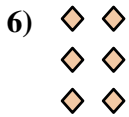
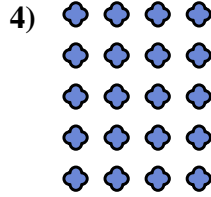

10. _____

11. _____

12. _____

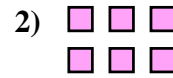
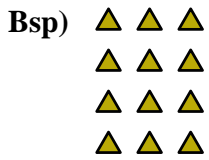
13. _____

14. _____





Schreiben Sie jedes Array als Additionsaufgabe und lösen Sie.

Bsp. $3+3+3+3=12$ 1. $3+3+3=9$ 2. $3+3=6$ 3. $4+4+4=12$ 4. $4+4+4+4+4=20$ 5. $5+5=10$ 6. $2+2+2=6$ 7. $4+4=8$ 8. $4+4+4+4=16$ 9. $3+3+3+3+3=15$ 10. $2+2+2+2+2=10$ 11. $2+2=4$ 12. $5+5+5+5=20$ 13. $5+5+5=15$ 14. $2+2+2+2=8$ 