
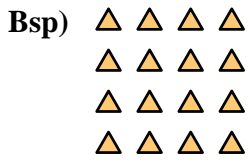




Schreiben Sie jedes Array als Additionsaufgabe und lösen Sie.

Antworten

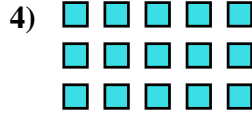


Bsp. 4+4+4+4=16

1. _____

2. _____

3. _____

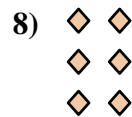



4. _____

5. _____

6. _____

7. _____


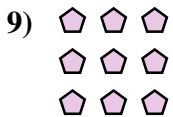


8. _____

9. _____

10. _____


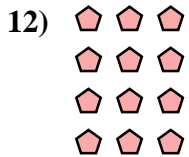
11. _____



12. _____


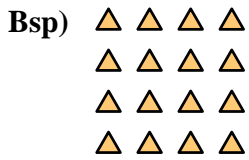
13. _____

14. _____





Schreiben Sie jedes Array als Additionsaufgabe und lösen Sie.

Bsp. $4+4+4+4=16$ 1. $4+4=8$ 2. $2+2+2+2+2=10$ 3. $4+4+4=12$ 4. $5+5+5=15$ 5. $3+3=6$ 6. $5+5+5+5=20$ 7. $3+3+3+3+3=15$ 8. $2+2+2=6$ 9. $3+3+3=9$ 10. $5+5+5+5+5=25$ 11. $4+4+4+4+4=20$ 12. $3+3+3+3=12$ 13. $2+2=4$ 14. $5+5=10$ 