
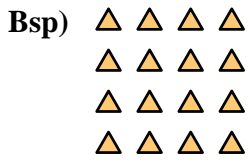




Schreiben Sie jedes Array als Additionsaufgabe und lösen Sie.

**Antworten**

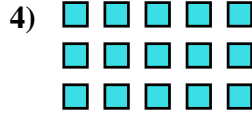


Bsp. 4+4+4+4=16

1. \_\_\_\_\_

2. \_\_\_\_\_

3. \_\_\_\_\_

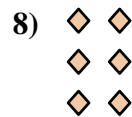



4. \_\_\_\_\_

5. \_\_\_\_\_

6. \_\_\_\_\_

7. \_\_\_\_\_


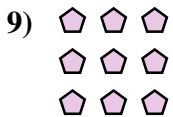


8. \_\_\_\_\_

9. \_\_\_\_\_

10. \_\_\_\_\_


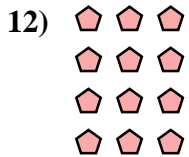
11. \_\_\_\_\_



12. \_\_\_\_\_


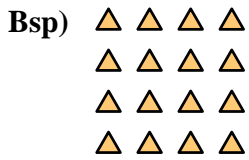
13. \_\_\_\_\_

14. \_\_\_\_\_





Schreiben Sie jedes Array als Additionsaufgabe und lösen Sie.



Bsp.  $4+4+4+4=16$

1.  $4+4=8$

2.  $2+2+2+2+2=10$

3.  $4+4+4=12$

4.  $5+5+5=15$

5.  $3+3=6$

6.  $5+5+5+5=20$

7.  $3+3+3+3+3=15$

8.  $2+2+2=6$

9.  $3+3+3=9$

10.  $5+5+5+5+5=25$

11.  $4+4+4+4+4=20$

12.  $3+3+3+3=12$

13.  $2+2=4$

14.  $5+5=10$

