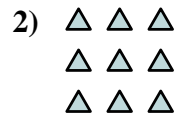





Schreiben Sie jedes Array als Additionsaufgabe und lösen Sie.

Antworten

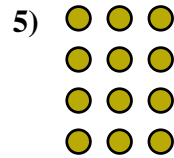
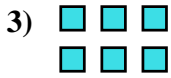


Bsp. 2+2=4

1. _____

2. _____

3. _____

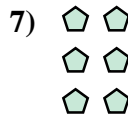



4. _____

5. _____

6. _____

7. _____




8. _____

9. _____

10. _____

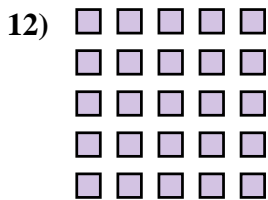
11. _____



12. _____

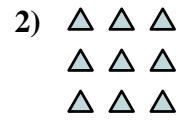

13. _____

14. _____





Schreiben Sie jedes Array als Additionsaufgabe und lösen Sie.

**Antworten**Bsp. 2+2=41. 2+2+2+2+2=102. 3+3+3=93. 3+3=64. 4+4+4=125. 3+3+3+3=126. 4+4+4+4+4=207. 2+2+2=68. 3+3+3+3+3=159. 5+5=1010. 2+2+2+2=811. 5+5+5=1512. 5+5+5+5+5=2513. 4+4=814. 4+4+4+4=16