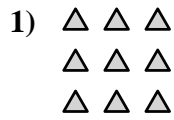
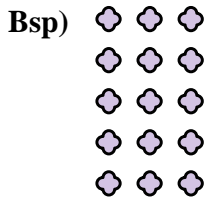




Schreiben Sie jedes Array als Additionsaufgabe und lösen Sie.

**Antworten**



Bsp. 3+3+3+3+3=15

1. \_\_\_\_\_

2. \_\_\_\_\_

3. \_\_\_\_\_

4. \_\_\_\_\_

5. \_\_\_\_\_

6. \_\_\_\_\_

7. \_\_\_\_\_

8. \_\_\_\_\_

9. \_\_\_\_\_

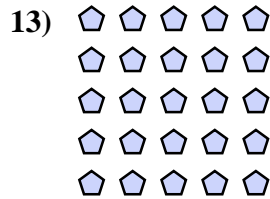

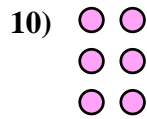
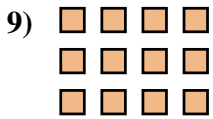

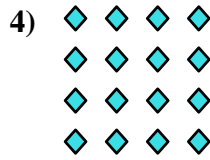

10. \_\_\_\_\_

11. \_\_\_\_\_

12. \_\_\_\_\_

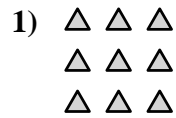
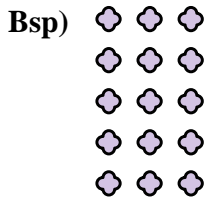
13. \_\_\_\_\_

14. \_\_\_\_\_





Schreiben Sie jedes Array als Additionsaufgabe und lösen Sie.

Bsp.  $3+3+3+3+3=15$ 1.  $3+3+3=9$ 2.  $3+3=6$ 3.  $2+2+2+2=8$ 4.  $4+4+4+4=16$ 5.  $5+5=10$ 6.  $4+4=8$ 7.  $3+3+3+3=12$ 8.  $4+4+4+4+4=20$ 9.  $4+4+4=12$ 10.  $2+2+2=6$ 11.  $5+5+5=15$ 12.  $5+5+5+5=20$ 13.  $5+5+5+5+5=25$ 14.  $2+2=4$ 