




Bestimmen Sie den angezeigten Geldbetrag.


Antworten




1. _____



2. _____



3. _____



4. _____




5. _____



6. _____



7. _____



8. _____



9. _____




10. _____



Bestimmen Sie den angezeigten Geldbetrag.


Antworten




1. \$0,81



2. \$0,95



3. \$0,98



4. \$0,99




5. \$0,96



6. \$0,92



7. \$0,98



8. \$0,99



9. \$0,98



10. \$0,68