



Benutze die Einheiten zum Messen der Länge jeden Streifens.

**Antworten**



1. \_\_\_\_\_



2. \_\_\_\_\_



3. \_\_\_\_\_




4. \_\_\_\_\_



5. \_\_\_\_\_



6. \_\_\_\_\_



7. \_\_\_\_\_



8. \_\_\_\_\_



9. \_\_\_\_\_




10. \_\_\_\_\_




Benutze die Einheiten zum Messen der Länge jeden Streifens.

**Antworten**



1. 5




2. 10




3. 13




4. 1



5. 11



6. 15



7. 8



8. 14



9. 6



10. 9