



Stelle fest, welcher Buchstaben am besten die Länge / Höhe darstellt.

Antworten

**Milímetro (mm)**

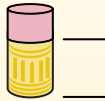
Un milímetro equivale al grosor de una tarjeta de crédito.



**Centímetro (cm)**

10 mm = 1 cm.

La parte metálica de un lápiz mide aproximadamente 1 cm. Una regla mide unos 30 centímetros.



**Metro (m)**

100 cm = 1 m

Desde el suelo hasta la perilla de una puerta hay aproximadamente 1 metro.



**Kilómetro (km)**

1,000 m = 1 km

La mayoría de las carreteras principales tienen al menos un kilómetro de largo.



1. \_\_\_\_\_
2. \_\_\_\_\_
3. \_\_\_\_\_
4. \_\_\_\_\_
5. \_\_\_\_\_
6. \_\_\_\_\_
7. \_\_\_\_\_
8. \_\_\_\_\_
9. \_\_\_\_\_

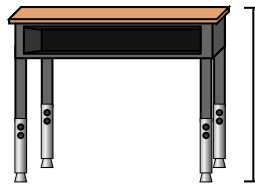
1)



Stift

- A. 12 zentimeters
- B. 30 millimeters
- C. 30 zentimeters
- D. 5 meters

2)



Schreibtisch

- A. 15 zentimeters
- B. 2 meters
- C. 70 zentimeters
- D. 30 zentimeters

3)



Frosch

- A. 20 zentimeters
- B. 8 zentimeters
- C. 4 millimeters
- D. 60 zentimeters

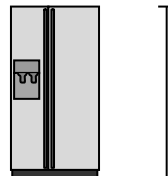
4)



Fahrrad

- A. 10 zentimeters
- B. 1 meter
- C. 3 meters
- D. 25 zentimeters

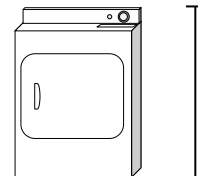
5)



Kühlschrank

- A. 180 zentimeters
- B. 30 zentimeters
- C. 5 kilometers
- D. 4 meters

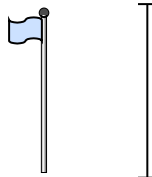
6)



Wäschetrockner

- A. 60 zentimeters
- B. 1 meter
- C. 25 zentimeters
- D. 15 zentimeters

7)



Fahnenmast

- A. 2 kilometers
- B. 9 meters
- C. 300 zentimeters
- D. 2 meters

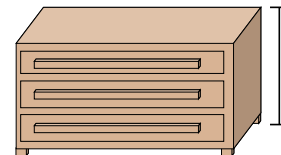
8)



Tennis Ball

- A. 3 millimeters
- B. 25 zentimeters
- C. 8 zentimeters
- D. 60 zentimeters

9)



Kommode

- A. 45 zentimeters
- B. 90 zentimeters
- C. 3 meters
- D. 30 zentimeters



Stelle fest, welcher Buchstaben am besten die Länge / Höhe darstellt.

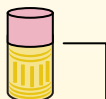
**Antworten****Milímetro (mm)**

Un milímetro equivale al grosor de una tarjeta de crédito.

**Centímetro (cm)**

10 mm = 1 cm.

La parte metálica de un lápiz mide aproximadamente 1 cm. Una regla mide unos 30 centímetros.

**Metro (m)**

100 cm = 1 m

Desde el suelo hasta la perilla de una puerta hay aproximadamente 1 metro.

**Kilómetro (km)**

1,000 m = 1 km

La mayoría de las carreteras principales tienen al menos un kilómetro de largo.



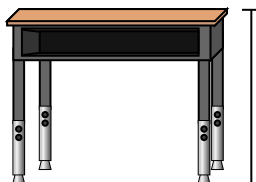
1)



Stift

- A. 12 zentimeters
- B. 30 millimeters
- C. 30 zentimeters
- D. 5 meters

2)



Schreibtisch

- A. 15 zentimeters
- B. 2 meters
- C. 70 zentimeters
- D. 30 zentimeters

3)



Frosch

- A. 20 zentimeters
- B. 8 zentimeters
- C. 4 millimeters
- D. 60 zentimeters

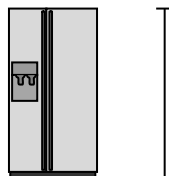
4)



Fahrrad

- A. 10 zentimeters
- B. 1 meter
- C. 3 meters
- D. 25 zentimeters

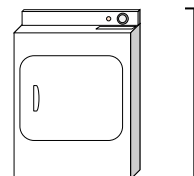
5)



Kühlschrank

- A. 180 zentimeters
- B. 30 zentimeters
- C. 5 kilometers
- D. 4 meters

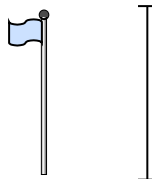
6)



Wäschetrockner

- A. 60 zentimeters
- B. 1 meter
- C. 25 zentimeters
- D. 15 zentimeters


7)



Fahnenmast

- A. 2 kilometers
- B. 9 meters
- C. 300 zentimeters
- D. 2 meters

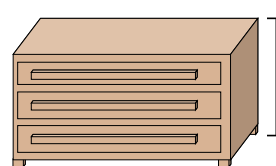
8)



Tennis Ball

- A. 3 millimeters
- B. 25 zentimeters
- C. 8 zentimeters
- D. 60 zentimeters

9)



Kommode

- A. 45 zentimeters
- B. 90 zentimeters
- C. 3 meters
- D. 30 zentimeters

1. **A**2. **C**3. **B**4. **B**5. **A**6. **B**7. **B**8. **C**9. **B**