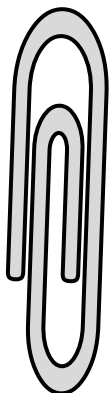





Messen Sie jeden Punkt von Spitze zu Spitze und tragen Sie dann Ihre Ergebnisse in das Liniendiagramm ein.

Antworten


Bsp)



1)



2)



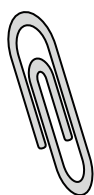
3)




4)



5)



6)




7)



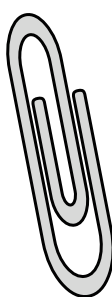
8)




9)



10)



11)



Bsp. **2**

1. _____

2. _____

3. _____

4. _____

5. _____

6. _____

7. _____

8. _____

9. _____

10. _____

11. _____

Line Plot

$\frac{1}{4}$

$\frac{1}{2}$

$\frac{3}{4}$

1

$1\frac{1}{4}$

$1\frac{1}{2}$

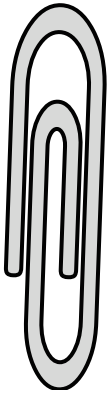
$1\frac{3}{4}$

2




Messen Sie jeden Punkt von Spitze zu Spitze und tragen Sie dann Ihre Ergebnisse in das Liniendiagramm ein.


Bsp)



1)



2)



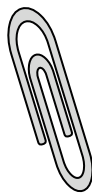
3)



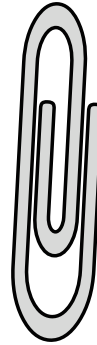
4)



5)



6)




7)



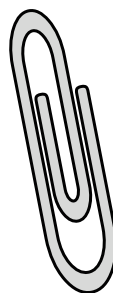
8)




9)



10)



11)

**Antworten**Bsp. **2**1. **$1 \frac{1}{2}$** 2. **$1 \frac{1}{4}$** 3. **$\frac{3}{4}$** 4. **$\frac{1}{4}$** 5. **1**6. **$1 \frac{3}{4}$** 7. **$\frac{1}{2}$** 8. **$\frac{3}{4}$** 9. **1**10. **$1 \frac{1}{2}$** 11. **$1 \frac{3}{4}$** **Line Plot**