




Messe die Länge und Höhe jedes Blocks in Inch und Zentimeter.


Bsp)



1)




2)



3)



4)



Antworte

n

Bsp. 0 1/2 **1** **1,3** **2,5**

1. _____

2. _____


3. _____

4. _____



Messe die Länge und Höhe jedes Blocks in Inch und Zentimeter.

Bsp)



1)




2)



3)



4)



Antworte

n

Bsp. $0\frac{1}{2}$ **1** **1,3** **2,5**

1. $2\frac{1}{2}$ $1\frac{1}{2}$ **6,4** **3,8**

2. **4** $0\frac{1}{2}$ **10,2** **1,3**

3. $5\frac{1}{2}$ $0\frac{1}{2}$ **14** **1,3**

4. $3\frac{1}{2}$ $1\frac{1}{2}$ **8,9** **3,8**