




Messe die Länge und Höhe jedes Blocks in Inch und Zentimeter.

Bsp)



**Antworte**

**n**

Bsp. 2 1/2 **1** **6,4** **2,5**


1. \_\_\_\_\_

2. \_\_\_\_\_


3. \_\_\_\_\_

4. \_\_\_\_\_


1)



2)



3)



4)






Messe die Länge und Höhe jedes Blocks in Inch und Zentimeter.


Bsp)




1)



2)



3)



4)



**Antworte**

n

Bsp.  $2\frac{1}{2}$  **1** **6,4** **2,5**

1.  $4\frac{1}{2}$   $1\frac{1}{2}$  **11,4** **3,8**

2. **3** **1** **7,6** **2,5**

3. **5**  $1\frac{1}{2}$  **12,7** **3,8**

4. **2**  $0\frac{1}{2}$  **5,1** **1,3**