




Messe die Länge jedes Streifens in Inch und Zentimeter.

Bsp)



Antworten

Bsp. 2 1/2 6 - 7

1)



1. _____

2. _____

2)



3. _____

4. _____

3)



5. _____

6. _____

4)



7. _____

8. _____

5)




9. _____

6)



7)



8)



9)





Messe die Länge jedes Streifens in Inch und Zentimeter.

Bsp)



Antworten

Bsp. 2 1/2 6 - 7

1)



1. 4 1/2 11 - 12

2. 3 7 - 8

2)



3. 5 12 - 13

4. 2 5 - 6

3)



5. 3 1/2 8 - 9

6. 5 1/2 13 - 14

4)



7. 0 1/2 1 - 2

8. 1 2 - 3

5)




9. 4 10 - 11

6)



7)



8)



9)

