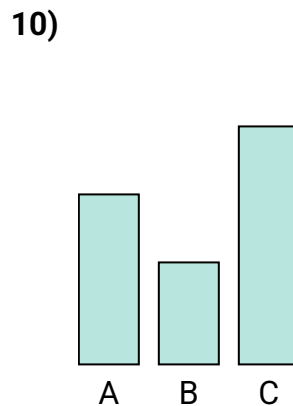
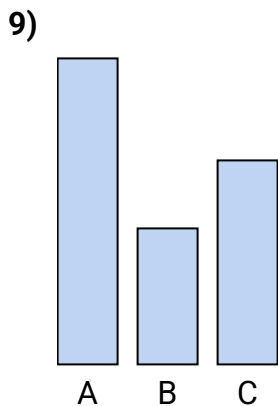
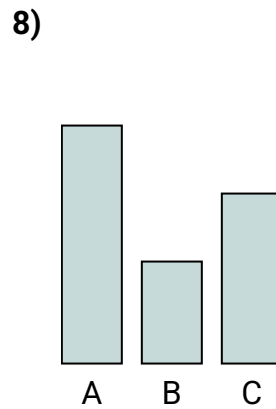
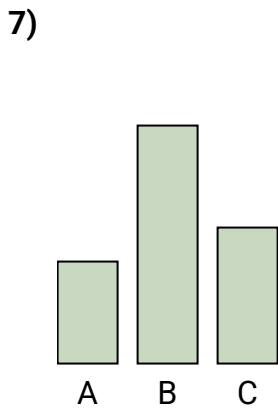
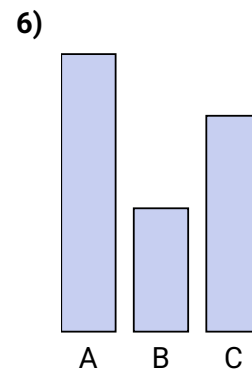
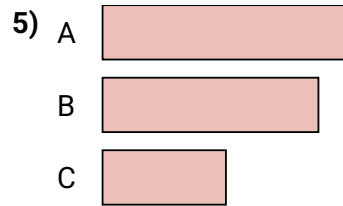
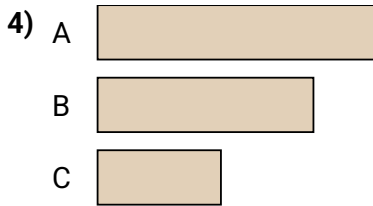
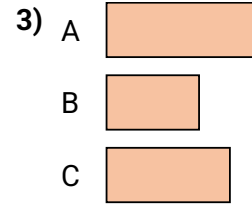
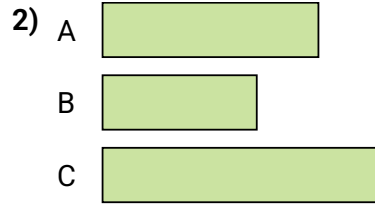
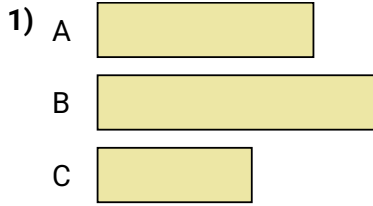




Ordne die Objekte in der Reihenfolge vom kleinsten zum größten Objekt.

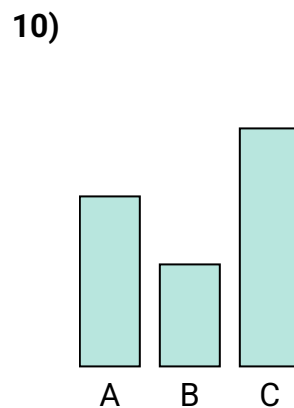
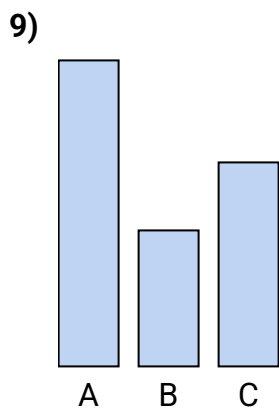
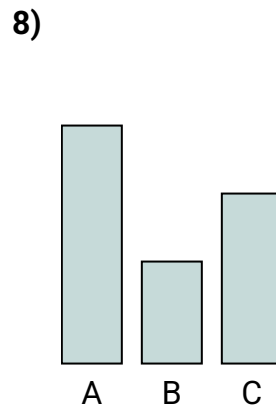
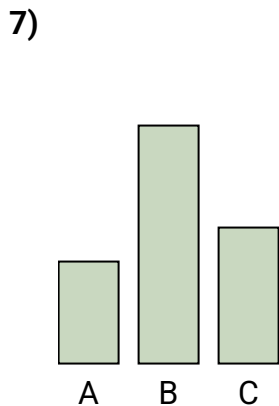
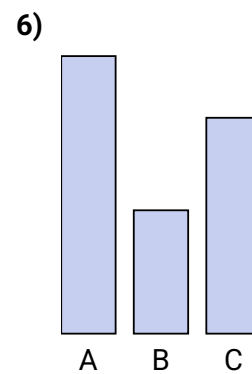
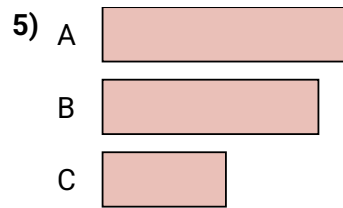
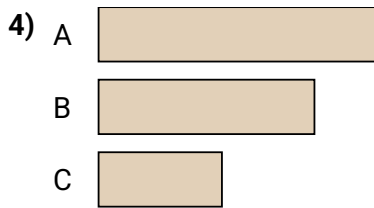
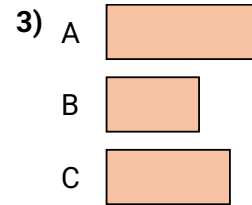
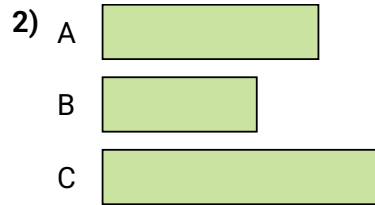
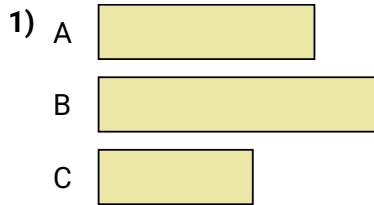
**Antworten**



1. \_\_\_\_\_
2. \_\_\_\_\_
3. \_\_\_\_\_
4. \_\_\_\_\_
5. \_\_\_\_\_
6. \_\_\_\_\_
7. \_\_\_\_\_
8. \_\_\_\_\_
9. \_\_\_\_\_
10. \_\_\_\_\_



Ordne die Objekte in der Reihenfolge vom kleinsten zum größten Objekt.

**Antworten**

1. **C, A, B**
2. **B, A, C**
3. **B, C, A**
4. **C, B, A**
5. **C, B, A**
6. **B, C, A**
7. **A, C, B**
8. **B, C, A**
9. **B, C, A**
10. **B, A, C**